



PRAHLADRAI DALMIA LIONS COLLEGE OF COMMERCE & ECONOMICS
SYJC TERM END EXAMINATION 2018

Duration: 3 Hrs.

SUBJECT: ORGANISATION OF COMMERCE & MANAGEMENT

Marks: 80

Q.1(A) Select the proper option and rewrite the statements given below: (5)

- 1) Directing is a responsibility of _____ at all levels. (manager, worker, people).
- 2) The government has established _____ to settle the consumer disputes by compromise. (Lok Adalat, District forum, Supreme court)
- 3) Postal services are administered by _____. (Private companies, Government of India, panchayat.)
- 4) Management principles are _____ in nature. (constant, universal, limited.)
- 5) The Maharashtra State Co-operative Society Act was passed in _____. (1956, 1932, 1960.)

Q.1(B) Match the columns: (5)

COLUMN A	COLUMN B
1. Minor partner	a An NGO working for consumers.
2. Savings account	b Business class.
3. Grahak shakti	c Limited liability.
4. F.W.Taylor	d. directly related to human beings.
5. Directing	e Father of scientific management.
	f Taking action against employees.
	g Father of modern management.
	h Unlimited liability.
	i Salaried class and wage earners.
	j A government of India undertaking.

Q.1(C) Write a word or a phrase or a term which can substitute the following statements: (5)

- 1) A function rightly treated as the essence of management.
- 2) Getting good quality of goods is the basic right of this group of society.
- 3) A person who lends his name to partnership firm.
- 4) The basic guidelines that help the managers to perform more effectively.
- 5) An electronic letter through which the messages can be exchanged on the computer.

Q.2) Distinguish the following: (any 3) (15)

- 1) Private company and Public company.
- 2) Planning and Controlling.
- 3) District forum and National commission.
- 4) Current account and Fixed Deposit account.
- 5) Joint Hindu Family Business and Joint Stock Company.

Q.3) Write short notes on: (any 3) (15)

- 1) Rights of consumers.
- 2) Principles of modern management.
- 3) Features of Sole trading concern.
- 4) Nature of staffing.
- 5) Principles of Insurance.

Q.4) State with reasons whether the following statements are true or false: (any 3) (15)

- 1) Every action in the organisation is initiated through directing.
- 2) Principles of management are rigid.
- 3) Consumer being the king of the market does not have any responsibility.
- 4) Post offices provide money remittance services.
- 5) Ownership and management are not separate in Joint Stock Company.

Q.5) Write answers of the following :(any 2) (10)

- 1) Explain the nature of organising.
- 2) Explain the types of warehouses.
- 3) Explain the Scientific principles of management.
- 4) Explain the merits of Co-operative society.

Q.6) Define Partnership. Explain its merits and demerits. (10)

OR

Q.6) Define Life Insurance. Explain its various policies. (10)



PRAHLADRAI DALMIA LIONS COLLEGE OF COMMERCE & ECONOMICS
SYJC TERM END EXAMINATION 2018

Duration: 3 Hrs.

SUBJECT: ECONOMICS

Marks: 80

- Note: 1. All questions are compulsory.
2. Draw tables/ diagrams wherever necessary.
3. Figures to the right indicate full marks.
4. Write answers to all main questions on new pages.

Q 1 (A) Fill in the blanks using proper alternatives given in the brackets. (5)

1. Income elasticity of demand for inferior goods is _____.
(positive/ negative/ zero/ greater than one)
2. Micro Economics is _____ equilibrium approach.
(partial/ general/ total/ multi- variable)
3. When MU is _____ TU decreases.
(positive/ negative/ zero/ high)
4. When price rises, there is _____ of supply.
(extension/ contraction/ decrease/ increase)
5. Supply of labour is _____ during the short period.
(elastic/ inelastic/ perishable/ passive)

(B) Match the following words from groups 'A' and 'B'. (5)

- Group A**
- a. Disposable Income
 - b. Concept of Group
 - c. Monopoly
 - d. Pen and Ink
 - e. TC/TQ

- Group B**
1. Cartel
 2. Average cost
 3. Marshall
 4. Chamberlin
 5. Substitute goods
 6. Personal Income minus Direct Tax
 7. Marginal Cost
 8. Joint demand

(C) State whether the following statements are True or False. (6)

1. Product differentiation is possible under perfect competition.
2. Land is the most active and living factor of production.
3. Micro Economic Theory suggests policies to solve the problem of inflation.
4. Quantity demanded varies directly with price.
5. Supply of perishable goods is inelastic.
6. Public capital is also known as social capital.

Q 2 (A) Define or explain the following concepts. (Any three) (6)

1. Market
2. Selling cost
3. Partial equilibrium
4. Market demand schedule
5. Cross elasticity of demand
6. Legal monopoly

(B) Give reasons or explain the following statements. (Any three) (6)

1. Micro Economic theories are based on certain assumptions.
2. Utility is a subjective concept.
3. All capital is wealth, but all wealth is not capital.
4. Labour cannot be stored.
5. The supply of agricultural commodities is relatively inelastic.
6. Demand for factors of production is derived demand.

P.T.O.

Q 3 (A) Distinguish between the following. (Any three)

1. Stock and Supply
2. Expansion of demand and Contraction of demand
3. Perfect competition and Pure competition
4. Labour and Entrepreneur
5. Total utility and Marginal utility
6. Normal goods and Giffen goods

(6)

(B) Write short notes on the following. (Any two)

1. Features of Micro Economics
2. Types of demand
3. Paradox of value
4. Risk and uncertainty bearing function of entrepreneur

(6)

Q 4 Answer the following questions. (Any three)

1. What are the features of monopolistic competition?
2. What are the types of capital?
3. Explain the significance of price elasticity of demand.
4. Explain backward bending supply curve of labour.
5. What are the types of price elasticity of demand?
6. Explain the subject matter of Micro Economics.

(12)

Q 5 State with reasons whether you 'Agree' or 'Disagree' with the following statements.

(12)

(Any three)

1. Demand curve slopes downward from left to right.
2. There are no real exceptions to the law of diminishing marginal utility.
3. Price is the only determinant of supply.
4. A seller is a price taker in monopoly.
5. Profit is the reward for bearing risk only.
6. Various factors determine the elasticity of demand.

Q 6 Write explanatory answers. (Any two)

(16)

1. Explain law of demand. What are its exceptions?
2. Explain total expenditure method and Geometric method of measuring elasticity of demand.
3. What is Equilibrium price? Explain price determination under perfect competition.
4. Explain law of supply. What are its assumptions?



Duration: 3 Hrs.

Q. 1. Attempt Any THREE of the following

[15]

A. Answer the following questions in one sentence each.

(05)

- (1) What is life membership fees?
- (2) What is surplus?
- (3) What are Noting Charges?
- (4) What is Dishonour of Bill?
- (5) What do you mean by Dissolution of partnership firm?

(B) Write a word / term / phrase which can substitute each of the following statements:

(05)

- (1) Debt which is irrecoverable
- (2) A system of book-keeping which record dual aspect of each transaction
- (3) Payment of the bill before due date.
- (4) What is debit balance of realization of account
- (5) Organization formed for services.

(C) Select the most appropriate alternative from those given below and rewrite the statements.

(05)

- (1) A bill which is accepted with some conditions is called _____ acceptance
(a) general (b) qualified (c) retirement (d) none of these.
- (2) A person who accepts the bill is called _____
(a) drawer. (b) acceptor. (c) payee. (d) creditor.
- (3) Credit balance of realization account shows
(a) Liquidity (b) Profit. (c) loss. (d) Capital
- (4) If any asset is taken over by partner from firm his capital A/c will be _____
(a) credited (b) debited (c) added (d) none of these
- (5) The proportion in which old partners make a sacrifice is called _____ ratio.
(a) capital (b) gaining (c) sacrifice (d) new

(D) State whether the following statements are True or False.

(05)

- (1) The interest on drawing is an income of the firm.
- (2) The inland bill is drawn and payable in the same country
- (3) Partners Current accounts are prepared when their capital are fixed
- (4) Single entry system is not useful for large business
- (5) On dissolution all assets are not transferred to realization account

(E) Prepare a specimen of Bill of Exchange from the following information:

(05)

- 1) Drawer : Rahul Thakur, Sunder Nagar, Malad.
- 2) Drawee: Vimal Patel, Sahara Road, Andheri.
- 3) Period of bill : 2 months.
- 4) Amount of bill : Rs. 50,000/-
- 5) Date of bill : 10th July, 2018.
- 6) Date of Acceptance: 14th July, 2018.
- 7) Payee: Babu Naidu

Q. 2. Mr. Manoj of Mumbai has not kept proper books of accounts, following information is provided to you.

Particulars	31.3.2017 (₹)	31.3.2018 (₹)
Machinery	50,000	50,000
Furniture	50,000	1,30,000
Debtors	18,000	25,000
Creditors	18,000	20,000
Stock	30,000	42,000
Investment	10,000	10,000
Cash at bank	32,000	40,000

Further information:

(1) Mr. Manoj introduced additional capital ₹ 40,000 on 1st January, 2018.

(2) He paid his Son's college fees from business bank account ₹ 12,000.

(3) Depreciate machinery by 5% p.a.

(5) Interest on capital is to be provided ₹ 5,000 . and on drawings ₹ 100

Prepare: Opening and closing statement of affairs and statement of profit or loss for the year ended 31st March 2018.

Q. 3. Ajay and Bharat are partners sharing profits and losses 3:2 respectively. Their position on 31st March, 2018 was as follows:

Balance sheet as on 31st March, 2018.

Liabilities	Amount (₹.)	Assets	Amount (₹)
Capital Accounts		Building	60,000
Ajay	50,000	Furniture	20,000
Bharat	30,000	Stock	35,000
Creditors	10,000	Debtors	5,000
Bills Payable	19,000	Bank Balance	4,000
General Reserve	15,000		
	1,24,000		1,24,000

On 1st April, 2018 They admitted Charu on the following terms:

(1) Charu should bring ₹.40,000 as capital for 1/5th share in future profit and ₹. 20,000 as goodwill.

(2) Building should be revalued at ₹. 66,000.

(3) Depreciate furniture @ 10 % and stock should be revalued ₹. 32000

Prepare: Profit and loss adjustment account, capital accounts and Balance Sheet of the firm after admission of Charu.

Q.4. Ajay sold goods for ₹ 50,000 to Sanjay. Sanjay accepted a bill of ₹ 50,000 drawn by Ajay at 3 months. Ajay got the bill discounted with his bank at 12% p.a. Before the due date, Sanjay approached Ajay for renewal of the bill. Ajay agreed on the condition that ₹ 20,000 be paid immediately and for the balance he should accept a new bill for 3 months together with interest at 12% p.a. These arrangements were carried through. Afterwards, Sanjay retired the bill and he was allowed rebate of ₹ 500.

Pass journal entries in the books of Ajay

5. L, M, and N were partners sharing profits and losses in the proportion of 2:2:1. Following is their balance sheet as on 31st July, 2018. [10]

Balance sheet as on 31st July 2018

Liabilities	Amount(₹)	Amount(₹)	Assets	Amount (₹)	Amount (₹)
Capital Account			Machinery		25,000
L	30,000		Stock		10,000
M	10,000		Debtors		32,000
N	10,000	50,000	Investment		13,000
General Reserve		10,000	Bank		10,000
Creditors		20,000			
Bills Payable		10,000			
		90,000			90,000

On the above date, the partners decided to dissolve the firm.

(i) Assets were realised as -

Machinery ₹ 22,500, Stock ₹ 9,000, Investment ₹ 10,000, Debtors ₹ 27,500 and unrecorded furniture realised ₹ 11,000

(ii) Dissolution expenses were ₹1,000.

(iii) All liabilities were paid in full

Pass the necessary journal entries in the books of the firm.

6. Andheri Sports Club has given you the following information from which, you are required to prepare. (i) Income and Expenditure Account for the year ending on 31.03.2018, (ii) Balance Sheet as on 31.03.2018. [12]

Receipts and Payment Account for the year ending 31.03.2018

Receipts	Amount (₹)	Payments	Amount(₹)
To Balance b/d		By Stationery	5,000
Cash in hand	13,000	By Furniture	10,000
Cash at bank	35,000	[Purchased on 01.04.2017]	
To Locker Rent	15,000	By Investments	30,000
To Entrance Fees	10,000	By Expenses of Drama	40,000
To Sale of old newspapers	1,000	By Ground Expenses	21,000
To Receipts from Drama	49,000	By Magazines and Newspapers	4,000
To Legacies	30,000	By Salaries	22,000
To Miscellaneous Receipts	2,000	By Balance c/d	
		Cash in Hand	3,000
		Cash at bank	20,000
	1,55,000		1,55,000

Additional Information:

(1) Capital fund on 01.04.201, was ₹ 48,000.

(2) Legacies are to be capitalized.

(3) Outstanding salary ₹. 3,000.

(4) 50% of entrance fees is to be capitalized.

(5) Depreciation on Furniture @ 10% p.a.

[3]

Q7. From the following Trial Balance and adjustments of M/s Hitesh and Mitesh you are required to prepare Trading and Profit and Loss account for the year ended 31st March 2018 and Balance sheet as on that date:

Trial Balance as on 31.03.2018

Name of Accounts	Debit (₹)	Credit (₹)
Capital Accounts		
Hitesh		1,20,000
Mitesh		70,000
Purchases and Sales	92,000	1,70,000
Sundry Debtors and Creditors	56,000	20,000
Bills Receivable and Bills Payable.	20,000	15,000
Opening Stock	36,000	
Wages	18,000	
Investment	27,200	
Travelling Expenses	4,000	
Insurance	3,000	
Plant and machinery	76,000	
Furniture	40,000	
Cash in hand	20,000	
Carriage on purchases	8,000	
Bad debts	800	
Salaries	20,000	
Loan from Ganesh		32,000
Motive Power	4,000	
Commission	5000	3000
	4,30,000	4,30,000

Adjustments:

- (1) The closing stock is valued at ₹ 70,000
- (2) Outstanding Audit Fees was ₹. 2,000.
- (3) Depreciate furniture at 10% p.a.
- (4) Insurance ₹ 500 is paid in advance.
- (5) Provide for Reserve for doubtful debts of ₹ 1,600.
- (6) Goods worth ₹ 2,000 were destroyed by fire and insurance company admitted claim for ₹ 1,600 only.



- Note: (i) All questions are compulsory
(ii) Figure to the right indicate full marks.
(iii) Answer to every question must be written on a new page.
(iv) L.P.P. problem should be solved on graph paper only.
(v) Log table will be provided on request.
(vi) Write answers of section-I and section-II in two separate answer books.

Section-I

Q.1 Attempt Any Six of the following

[2x6=12]

- (i) If p : It is day time.
 q : It is warm.

Give the verbal statement for the following symbolic statement.

a) $p \wedge \sim q$

b) $q \leftrightarrow p$

(ii) Evaluate $\int \frac{1}{x(3+\log x)} dx$

- (iii) Write the converse and contra positive of the following statement.
"If a man is bachelor, then he is unhappy."

(iv) If $A = \begin{bmatrix} 2 & 1 \\ 1 & 1 \end{bmatrix}$, find $A^2 - 3A$.

(v) Find $\frac{d^2y}{dx^2}$, if $y = \log x$

- (vi) Find the value of x and y from the following matrix equation.

$$2 \begin{bmatrix} x & 5 \\ 7 & y-3 \end{bmatrix} + \begin{bmatrix} 3 & -4 \\ 1 & 2 \end{bmatrix} = \begin{bmatrix} 7 & 6 \\ 15 & 14 \end{bmatrix}$$

(vii) If $y = \cos^{-1}(\sin 5x)$, find $\frac{dy}{dx}$

- (viii) The cost C of producing x article is given as $C = x^3 - 16x^2 + 47x$, for what value of x the average cost is decreasing?

Q.2 [A] Attempt any Two of the following

[3x2=6]

(i) Evaluate $\int \tan^{-1} x dx$

(ii) Find A^{-1} by adjoint method $A = \begin{bmatrix} 1 & 2 & 3 \\ -1 & 1 & 2 \\ 1 & 2 & 4 \end{bmatrix}$

(iii) If $x = \frac{2t}{1+t^2}$ and $y = \frac{1-t^2}{1+t^2}$ then show that $\frac{dy}{dx} = -\frac{x}{y}$

[B] Attempt any Two of the following

[4x2=8]

- (i) The cost of 4 pencils, 3 pens and 2 erasers is Rs 60. The cost of 2 pencils, 4 pens and 6 erasers is Rs 90 and the cost of 6 pencils, 2 pens and 3 erasers is Rs 70. Find the cost of each items, by using matrices.

- (ii) Examine whether the following statement patterns is a tautology, or a contradiction, or a contingency.
 $(p \rightarrow q) \leftrightarrow (\neg p \vee q)$

- (iii) If the demand function is $D = 50 - 3p - p^3$, find the elasticity of demand at (a) $p = 5$ (b) $p = 2$. Interpret your result.

[3x2=6]

Q.3[A] Attempt any Two of the following

- (i) Express the truth of each of the following statement by Venn diagrams.
 a) No circles are polygons.
 b) All teachers are scholars and scholars are teachers.
 c) Some quadratic equations have equal roots.

- (ii) If $x^3 \cdot y^5 = (x + y)^8$ show that $\frac{dy}{dx} = \frac{y}{x}$

- (iii) Evaluate $\int e^x \frac{x}{(x+1)^2} dx$

[4x2=8]

[B] Attempt any Two of the following

- (i) Evaluate $\int \frac{3x+1}{(x-2)^2(x+2)} dx$

- (ii) In a firm the cost function for output x is given as $C = \frac{x^3}{3} - 20x^2 + 70$. find the output for which Marginal cost (C_m) is minimum

- (iii) The expenditure E_c of a person with income I is given by $E_c = (0.000035)I^2 + (0.045)I$. Find Marginal Propensity to consume (MPC) and Marginal Propensity save (MPS) when $I = 5000$. Also find APC and APS.

Section-II

Q.4 Attempt Any Six of the following

[2x6=12]

- (i) In a class, 60% students are boys and 40% are girls. By admitting 16 boys and 8 girls the ratio of boys becomes 8:5. What must be the number of boys and number of girls originally in the class?
 (ii) Compute the age specific death rate for the following data :

Age group (year)	Population (In '000')	Number of deaths
0 - 10	11	275
10 - 20	12	180
20 - 60	9	81
60 and above	2	32

- (iii) Given that Crude Death Rate (C.D.R.) for the following data is 13.4 per thousand. find the value of

Age group (year)	Population	Number of deaths
0 - 20	40000	350
20 - 65	65,000	650
Above 65	15,000	x

- (iv) Determine l_{92} and l_{93} given that $l_{91} = 97$, $d_{91} = 38$ and $q_{92} = \frac{27}{59}$

[2]

(v) Solve the inequations $-8 \leq 3x - 5 < 7$ and represent it on real number line.

(vi) Find common region for the following system of linear inequations.

$$x \geq -3, 4x - 5y \geq -20, 3x + 4y \leq 12, y \geq -2$$

(vii) A job production unit has four jobs A, B, C, D which can be manufactured on each of the four machines P, Q, R and S. The processing cost of each job for machine is given below.

Jobs	Processing Cost (₹)			
	Machines			
	P	Q	R	S
A	31	25	33	29
B	25	24	23	21
C	19	21	23	24
D	38	36	34	40

How should the jobs be assignment to machines so that the total producing cost is minimum?

(viii) The time (in hours) required to perform the printing and binding operations (in that order) for each book is give in the following table.

Book	I	II	III	IV
Printing Machine M1	3	7	4	5
Printing Machine M2	6	2	7	3

Find the sequence that minimizes the total elapsed time (in hours) to complete the work.

Q.5 [A] Attempt any Two of the following

[3x2=6]

(i) Amar, Akbar and Anthony started a transport business by investing Rs. 1 lakh each. Amar left after 5 months from the commencement of business and Akbar left 3 months later. At the end of one year, the business realized a profit on Rs. 37,500. Find the share of profit of each partner.

(ii) Calculate e_0^0, e_1^0, e_2^0 from the following data:

Age x	0	1	2
I_x	1000	900	700
T_x	-	-	11500

(iii) Raghu, Madhu and Ramu started a business in partnership by investing Rs 60,000, Rs 40,000 and Rs 75,000 respectively. At the end of the year they found that they have incurred a Loss of Rs 24,500. Find how much loss each one had to bear.

[B] Attempt any Two of the following

[4x2=8]

(i) John and Mathew started a business with their capitals in the ratio 8:5. After 8 months John added 25% of his earlier capital as further investments. At the same time Mathew withdrew 20% of his earlier capital. At the end of the year earned Rs 52,000 as profit. How should they divide it between them?

(ii) A company has one surplus car each in cities P, Q, R, and S and one deficit car each in cities A, B, C, and D. The distance in kilo meter between the cities are shown.

Cities	Distances (Kms.)			
	A	B	C	D
P	8	5	8	2
Q	9	3	6	9
R	4	10	7	4
S	3	5	6	1

The management wishes to determine the assignment of surplus car to the cities with a deficit to minimise the total kilo metres travelled. Gives alternate optional assignment if possible compute the total distance for optimum assignment?

[3]

- (iii) Given the following table which relates to the number of animals of a certain species in age group x and the life table with d_x, q_x, L_x and T_x

x	0	1	2	3	4	5
l_x	1000	850	760	360	25	0

[3x2=6]

Q.6[A] Attempt any Two of the following

- (i) From the following data compute Crude death rate for population A and population B and compare them.

Age Group	Population A		Population B	
	Population	No of death	Population	No. of death
0-15	1000	20	2000	50
15-60	3000	30	7000	70
60 and Above 60	2000	40	1000	25

- (ii) Solve graphically for the following L.P.P.

$$\text{Minimize } Z = 4x + 10y$$

$$\text{Subject to: } 2x + 5y \leq 10$$

$$5x + 3y \leq 15,$$

$$x + 2y \geq 30, \quad x \geq 0, y \geq 0.$$

- (iii) For the following problem, find the sequence that minimized total elapsed time (in hours) required to complete the following jobs on two machine M1 and M2 in the order M1 M2. Also find the minimum elapsed time T.

Job	A	B	C	D	E
M1	5	1	9	3	10
M2	2	6	7	8	4

[4x2=8]

[B] Attempt any Two of the following

- (i) A carpenter has 45, 40 and 25 running feet of Trek wood, plywood and rosewood respectively. A table requires 2, 1 and 1 running feet and chair required 1, 2 and 1 running feet of teak wood, plywood and rosewood respectively. If a table wood sell for Rs. 4800 per unit and chair for Rs. 1600 per unit. How many tables and chairs should the carpenter make and sell in order to obtain maximum income out of stock of wood.

- (ii) Solve the following maximal assignment problem:

Branch Manager	Monthly Business(Rs lakh)			
	A	B	C	D
P	11	11	9	9
Q	13	16	11	10
R	12	17	13	8
S	16	14	16	12

- (iii) There are 5 jobs each of the which is to be processed through three machine A, B and C in order A B C. Processing time in hours are as shown in the following table:

Jobs	1	2	3	4	5
A	3	8	7	5	4
B	4	5	1	2	3
C	7	9	5	6	10

Determine the optimum sequence for the five jobs and the minimum elapsed time.



Q.1 A Select the correct answer from the possible choices given below and rewrite the statements: (5)

- 1) Trading on equity means use of _____ capital for financing a firm.
(Equity share, preference share, borrowed)
- 2) A _____ is an indivisible unit of share capital. (Debenture, share, bond)
- 3) Debenture certificate must be issued within _____ months of allotment. (Three, six, nine)
- 4) The _____ recommend the final dividend. (Shareholders, board of directors, promoters)
- 5) A _____ company cannot accept deposits from the general public.
(Private, public, government)

B) Match the correct pairs :

(5)

Group A	Group B
1. Fixed capital	a. Owned capital
2. Overdraft facility	b. Bearer document
3. Share certificate	c. Investment in fixed assets
4. Debentures	d. Current account
5. Return on shares	e. Application money
	f. Dividend
	g. Investment in current assets
	h. Borrowed capital
	i. Saving account
	j. Registered document

C) Write a word/ term / phrase which can substitute each of the following statements:

(5)

- 1) Depository receipt traded in other countries other than the U.S.A.
- 2) Transfer of ownership of shares as per the provisions of law.
- 3) Dividend declared by company at annual general meeting.
- 4) Return on investments in debentures.
- 5) The bond with no interest.

Q.2) Distinguish between the following (Any THREE)

(15)

- 1) Shares and Debentures.
- 2) Transfer of shares and Transmission of shares.
- 3) Interim dividend and Final dividend.
- 4) Share certificate and Share warrants.
- 5) Fixed capital and Working capital.

Q.3) Write notes on the following (Any THREE)

(15)

- 1) Acceptance of deposits
- 2) Retained profits
- 3) Employee stock option schemes (E.S.O.S)
- 4) Importance of depository system
- 5) Importance of financial planning

Q.4) State with reasons, whether the followings statements are True or False (Any THREE)

(15)

- 1) Preference shareholders do not enjoy normal voting rights.
- 2) Shares certificates is bearer document.
- 3) There are no legal provision regarding payment of dividend.
- 4) The bond holders are owners of the company.
- 5) Debentures redemption reserve is created for redemption of deposit.

Q.5) Attempt the following (Any TWO)

(10)

- a) Draft a letter of thanks to a depositor of company.
- b) Draft a letter to a depositor informing him about payment of interest.
- c) Write a letter to debenture holder informing him about redemption of debentures.
- d) Write external factors influencing capital structure.

Q.6) What is equity shares? Write features of equity shares.

(10)

OR

Draft a letter of allotment to a share applicant.



PRAHLADRAI DALMIA LIONS COLLEGE OF COMMERCE & ECONOMICS

SYJC TERM END EXAMINATION 2018

Duration: 2^{1/2} Hrs.

SUBJECT: INFORMATION TECHNOLOGY

Marks: 80

Q.1 Fill in the blanks.

[10]

1. _____ is a computer that stores website.
2. _____ function key is used to pass sales voucher in Tally.
3. In MS-Access, _____ means to arrange the records in either ascending or descending order.
4. _____ defines the arrangement of nodes, cables and connectivity devices.
5. FTP stands for _____.
6. Radio waves can travel in all directions and can also be called as _____.
7. Ethical principles are based on _____ values.
8. .AU is an audio format developed by _____.
9. The light signals are transmitted by _____ cable.
10. RDBMS stands for _____.

Q.2 State following statements are true or false.

[10]

1. Furniture, Land and Building, Plant and Machinery – all will come under the group Fixed Asset within Tally.
2. In MS-Access, data displayed on report cannot be edited.
3. LAN covers wider area than MAN and WAN.
4. There are 15 commandments of computing.
5. .QT video file format produces fine picture quality and is widely used for Web.
6. Modem means modulator and demodulator.
7. Trial balance will get generated automatically in Tally.
8. In MS-Access, it is compulsory to provide primary key within a table.
9. Digital signature uses private and public key together.
10. External style sheet must be within HTML tags.

Q.3 Select one correct option from following.

[20]

1. Vertical frames can be created using _____ attribute within <frameset> tag. (columns, rows, row, cols)
2. _____ key is used to delete a voucher within Tally. (Alt+ C, Alt+D, Ctrl+ C, Ctrl+ D)
3. _____ is a protection that covers original work. (Unauthorized access, IT Act, Copyright, IT Amendment Act)
4. In MS- Access, _____ data type is used to attach Excel spreadsheet. (Hyperlink, Attachment, OLE Object, Memo)
5. Wireless media is also known as _____. (Bounded, Wired, Unguided, All)
6. _____ is one of the definition present within IT Act 2000.(Computer resource, Firewall, Patches, Copyright)
7. A class selector definition starts with _____. (Hash, Period, Property, Value)
8. _____ is one of the feature of Fiber Optic. (Wireless media, Easy to install, Expensive, High attenuation)
9. _____ is a freeware software. (Linux, Windows, Dos, Mac)
10. _____ is the bottom layer present within OSI model. (Application, Data link, Presentation, Physical)
11. _____ is one of the guideline of ethics. (Firewall, Communication, IDS, Hotfixes)
12. There are _____ types of relationships which can be created in MS-Access. (4,3,2,1)
13. _____ is an attribute of <Embed> tag. (Rows, Vlink, Volume, Href)
14. _____ is one of the example of protocol. (SMTP, ASCII, ANSI, ARPANET)
15. Gaining access without permission is known as _____. (Software Piracy, Copyright, Netiquette, Unauthorized Access)
16. _____ is a type of topology used within LAN. (Star, Hub, Router, Bridge)



SECTION: A

*Reading Comprehension, Vocabulary, Grammar, Note-Making & Summary Writing***Q 1 (A) Read the first activity, read the extract and then do all the activities.**

(12)

Activity 1 State whether the following statements are true or false.

2

- The writer/Narrator was very happy with the feeling of idleness.
- The Narrator's severe indigestion was cured easily with a bottle of syrup.
- The Narrator was very focussed and determined from his childhood.
- The Narrator was restricted from all physical works during his treatment.

I was 33 at the time, a doctor in the West End of London. I had been lucky in advancing through several arduous Welsh mining assistantships to my own practice – acquired on the instalment plan from a dear old family physician who, at our first interview, gazed at my cracked boots and frayed cuffs and trusted me.

I think I wasn't a bad doctor. My patients seemed to like me – not only the nice old ladies with nothing wrong with them, who lived near the Park and paid handsomely for my cheerful bedside manner, but the cabbies, porters and deadbeats in the mews and back streets of Bayswater, who paid nothing and often had a great deal wrong with them.

Yet there was something – though I treated everything that came my way, read all the medical journals, attended scientific meetings, and even found time to take complex postgraduate diplomas – I wasn't quite sure of myself. I didn't stick at anything for long. I had successive ideas of specializing in dermatology, in aural surgery, in pediatrics, but discarded them all. While I worked all day and half of most nights, I really lacked perseverance, stability.

One day I developed indigestion. After resisting my wife's entreaties for several weeks. I went casually to consult a friendly colleague. I expected a bottle of bismuth and an invitation to bridge. I received instead the shock of my life: a sentence to six months' complete rest in the country on a milk diet. I had a gastric ulcer.

The place of exile, chosen after excruciating contention, was a small farmhouse near the village of Tarbert in the Scottish Highlands. Imagine a lonely whitewashed steading set on a rain-drenched loch amid ferocious mountains rising into grey mist, with long-horned cattle, like elders of the kirk, sternly munching thistles in the foreground. That was Fine Farm. Conceive of a harassed stranger in city clothes arriving with a pain in his middle and a box of peptonizing powders in his suitcase. That was I.

Nothing is more agonizing to the active man than enforced idleness. A week of Fyne Farm drove me crazy. Debarred from all physical pursuits, I was reduced to feeding the chickens and learning to greet the disapproving cattle by their Christian names. Casting around desperately for something to do, I had a sudden idea.

For years, at the back of my mind, I had nursed the vague illusion that I might write. Often, indeed, in unguarded moments, I had remarked to my wife, "You know, I believe I could write a novel if I had time," at which she would smile kindly across her knitting, murmur, "Do you, dear?" and tactfully lead me back to talk of Phinnie Smith's whooping cough.

Now, as I stood on the shore of that desolate Highland loch I raised my voice in a surge of self-justification: By Heavens! This is my opportunity. Gastric ulcer or no gastric ulcer, I will write a novel." Before I could change my mind I walked straight to the village and bought myself two dozen penny exercise books.

Activity 2 Complete the following the statements by choosing two appropriate reasons from the options and Rewrite.

2

The Narrator was a good doctor because.....

- He was very qualified and experienced.
- He was specialized in many areas.
- His Patients seemed to like him not only the old women with nothing wrong with them and paid him reasonably well for his cheerful bedside manners.
- He treated all his patients like the taxi drivers, porters, and unemployed people in the mews and the backstreets who had no money without any discrimination.

Activity 3: Find out the expressions/statements/proofs that show that the narrator could not become a successful person due to..... (Write any two)

2

Activity 4: Write the contextual meaning of the following words. Choose the appropriate one from the options.

2

Mews = (a) church, (b) buildings used to keep horses, (c) village area.

Perseverance = (a) Enthusiasm, (b) Courage, (c) continued pursuit.

Ferocious = (a) tall, (b) wild and fierce, (c) Big.

Desolate = (a) Rainy, (b) Barren, (c) Fertile.

Activity 5: Sometimes an incident in your life can be a "Blessing in disguise." Share your own experience in one paragraph.

2

Activity 6: Grammar

i) I didn't stick at anything for long. (Make it a Rhetorical question)
Fill in the blanks and rewrite your answer.

Ans : I at anything for long?

ii) I will write a novel. (Make it less definite) (Select your correct option and rewrite it)

Ans: (a) I must write a novel (b) I should write a novel (c) I can write a novel (d) I may/might write a novel.

Q 1 (B) Do as directed.

- 1) Lunch box is most precious treasure for school going children. (Insert articles in the sentence wherever necessary.) (3)
- 2) In Thane city the rain recorded 41.8mm on Saturday. (Write down what the underlined prepositions indicate.) 1
- 3) The principal said to the students, "Use your time wisely. You won't get this chance again." (Complete the following sentence by filling in the blanks appropriately.) 1
The principal _____ the students' _____ use _____ time wisely as they _____ get that chance again. 1

Q 2 (A) Read the first activity, read the extract and then do all the activities.

Activity 1 Out of the given four statements find out the two statements which are summarising the extract and rewrite them. (12)

- a) This extract speaks about multi-faceted role of teacher in the village. 2
- b) The extract speaks about the quarrels or fights of the villagers which were generally solved at the doorstep of the village deity.
- c) This extract speaks about the poor condition of schooling/ education system in our country/ state.
- d) This extract speaks about the marriages which used to take place in the state/ country.

The school had no regular calendar. Everywhere else summer was the vacation time; here the school closed for the harvest. The boys came to school whenever they felt like it. The school-master's lot was not unlike that of a bus-driver in the country-he could not do a thing until a sufficient number turned up. Half the time he had little work to do and it was impossible for him to confine his sphere of operations to the four walls of the school. The most important of my subsidiary roles was, of course, to act as a scribe, to write letters, petitions and applications for the village. My week-end visits to the home-town were invariably embarked upon with my pockets stuffed with letters which I had undertaken to post. When it was discovered that I did these time-honoured jobs without a murmur, every conceivable problem and grievance began coming my way and I became an adviser and counsellor to all and sundry. Whenever a sheep was lost, or wife quarrelled with husband, the school-master was consulted-in the belief that school-masters are as well versed in law and common sense as they are educated and wise.

This kept me busy even when there was no teaching to be done. Whenever the authorities complained about the poor enrolment I found myself making excuses: the school is at an experimental stage, this is the sowing season-and so on; but I kept the school going. As the school building was a court, village-hall, police station and municipal office in addition to- being a school, the teacher's role was varied. He was a judge, policeman, revenue official and even stamp-vendor! However, this much could be said for the arrangement: it was unusual for disputes to cross the boundary of the village. Most of them were resolved at a 'panchayat' meeting-that is before a councilor assembly of about ten people. The dispensers of justice included the school-master and such venerable villagers as the old Karbhari, Rama's Kakuba, Shekuba and others. As a rule the judgment of these ten was accepted as final by the offender and he would pay the fine decided by them. If the 'panchayat' failed to give satisfaction, he was at liberty to go in appeal. The appellate authority was a supernatural one, the oracle of a deity recognized by every shepherd; the goddess was consulted before a large gathering of shepherds from all over the district. This step was taken but rarely, for a communal banquet had to be given before the Supreme Being could be invoked and a banquet of the required size might cost as much as seven or eight hundred rupees.

Weddings were similarly solemnised on a communal basis on an auspicious day so that no one was ever required to feed the whole village single-handed. There might possibly be ten or twenty weddings in a year and each family was required to feed more or less an equal number of persons. If financial difficulties threatened to postpone a scheduled wedding, the village often helped to tide over the situation. All pitched in to share the burden so that the wedding might take place on the appointed day.

Activity 2: Give Reasons

1. In case of any difficulty or complaint the villagers used to seek an advice from the masterji because 2
2. Villagers seldom appealed the village deity because _____

Activity 3. 'The school had no regular calendar', guess the probable reasons for the same from the extract and rewrite. 2

Activity 4: Fill in the blanks by using appropriate phrase given in the bracket. 2

(Pitched in, embarked upon, tide over the situation, all and sundry)

1. India along with Israel has _____ a new venture in arms and ammunition.
2. In 1993, Latur earthquake destroyed the spirit of common man of the area, but whole India came forward _____ during the time of crisis.
3. The whole village _____ to become the winner of the Water Cup competition of Aamir Khan.
4. During pre-independence time _____ used to gather Gandhiji's speech at Congress session.

Activity 5: Even today in 21st century too in some part of our country and state in some communities they have Panchayat system to resolve the disputes or quarrels, fights amongst them. Explain your views with reason whether such system delivers justice effectively or not. 2

Activity 6: Grammar: 2

- (i) He could not do a thing until a sufficient number turned up. (Use 'be able to' and rewrite)
- (ii) The goddess was consulted before a large gathering of shepherds from all over the district. (Rewrite the sentence beginning with 'They-----')

Q2 (B) Read the extract and complete the notes given below. Give a suitable title: (3)

I remember my childhood as being generally happy and can recall experiencing some of the most carefree times of my life. But I can also remember, even more vividly, moments of being deeply frightened. As a child, I was truly terrified of the dark and getting lost. These fears were very real and caused me some extremely uncomfortable moments.

May be it was the strange way in which things looked and sounded familiar in my room at night that scared me so much. There was never total darkness, but a street light or passing car lights made clothes hung over a chair take on the shape of an unknown beast. Out of the corner of my eye, I saw curtains move when there was no breeze. A tiny creak in the floor would sound a hundred times louder than in the daylight and my imagination would take over, creating burglars and monsters. Darkness always made me feel helpless. My heart would pound and I would lie very still so that 'the enemy' wouldn't discover me.

Another childhood fear of mine was that I would get lost, especially on the way home from school. Every morning, I got in the school bus right near my home — that was no problem. After school, though, when all the buses were lined up along the curve, I was terrified that I would get on the wrong one and be taken to some unfamiliar neighbourhood. I would scan the bus for the faces of my friends, make sure that the bus driver was the same one that had been there in the morning, and even then ask the others over and over again to be sure I was in the right bus. On school or family trips to an amusement park or a museum, I wouldn't let the leaders out of my sight. And of course, I was never very adventurous when it came to taking walks or hikes because I would go only where I was sure I would never get lost.

i) Remembering childhood moments

a)

b) Terrified of the dark and getting lost.

ii) Childhood fears

1) Feeling helpless in dark.

a) Moving curtains

b)

c)

2) Fear of getting lost (especially on the way to home from school).

a) Scanning of school buses - _____

b)

c) Taken to some unfamiliar neighbourhood.

d)

Q 3 (A) Read the first activity, read the extract and then do all the activities. (12)

Activity 1. On the basis of your reading of the passage, answer the following questions by choosing the best of the given choices. 2

- i) The Titanic sank on _____.
 a) Its 100th Anniversary b) an iconic voyage in 1985
 c) 5th April, 1912 d) leaving the port of Belfast.
- ii) The Titanic attracts attention because
 a) It is irony personified in history.
 b) Its advanced technology gave double diving technology.
 c) It is a treasure hunt.
 d) It is a common need.
- iii) Ballard's documentary on the Titanic is titled _____.
 a) A museum of Human History.
 b) The Titanic.
 c) Save the Titanic.
 d) 75 years later.
- iv) Bob Ballard is a _____.
 a) Former US Navy Officer b) A professor of oceanography
 c) Both (a) and (b) d) None of the above

The titanic, in its watery grave, is a great museum of human history and is at risk of being lost forever because of curious voyagers and treasure hunters, fears Bob Ballard, who first discovered the remains of the iconic ship in 1985. Famous for discovering the great ship, Ballard is a former US Navy Officer and a professor of oceanography.

Section C Rapid Reading

Q.5. (A) Read the following extract and complete the activities given below.

(4)

And so Daisy stayed, and was brought into the lark's cage. The poor bird was lamenting its lost liberty, and beating its wings against the wires; and the little daisy could not speak or utter a consoling word, much as it would have liked to do so. So the forenoon passed.

"I have no water," said the captive lark, "they have all gone out, and forgotten to give me anything to drink. My throat is dry and burning. I feel as if I had fire and ice within me, and the air is so oppressive. Alas! I must die, and part with the warm sunshine, the fresh green meadows, and all the beauty that God has created." And it thrust its beak into the piece of grass, to refresh itself a little. Then it noticed the little daisy, and nodded to it, and kissed it with its beak and said: "You must also fade in here, poor little flower. You and the piece of grass are all they have given me in exchange for the whole world, which I enjoyed outside. Each little blade of grass shall be a green tree for me, each of your white petals a fragrant flower. Alas! You only remind me of what I have lost."

"I wish I could console the poor lark," thought the daisy. It could not move one of its leaves, but the fragrance of its delicate petals streamed forth, and was much stronger than such flowers usually have.

Activity 1 Choose the two most appropriate statement about the bird and daisy.

2

- i) The poor flower daisy felt pity about the bird lark.
- ii) The bird lark was feeling happy with daisy.
- iii) The little daisy had uttered the words of praise and the bird lark was thinking quietly.
- iv) The little bird lark was dying due to lack of freedom and water.

Activity 2 Discuss the pain of lark in cage 4-5 sentences

2

Q 5.(B) Read the following extract and complete the given activities.

(4)

The four of us drove out to Coney Island. Roma was easy to talk to, easy to be with. Turned out she was wary of blind dates too! We were both just doing our friends a favor. We took a stroll on the boardwalk, enjoying the salty Atlantic breeze, and then had dinner by the shore. I couldn't remember having a better time.

We piled back into Sid's car, Roma and I sharing the backseat. As European Jews who had survived the war, we were aware that much had been left unsaid between us. She broached the subject, 'Where were you during the war?' she asked softly.

'The camps,' I said the terrible memories still vivid, the irreparable loss. I had tried to forget. But you can never forget.

She nodded. 'My family was hiding on a farm in Germany, not far from Berlin,' she told me. "My father knew a priest, and he got us Aryan papers." I imagined how she must have suffered too, fear, a constant companion. And yet here we were, both survivors, in a new world.

'There was a camp next to the farm.' Roma continued. "I saw a boy there and I would throw him apples every day."

Activity 1. Correct the following statements and rewrite them.

2

- i) The three of them went to Coney Island.
- ii) Roma and Sid were helping their friends.
- iii) Roma's family was hiding on a farm in Germany, near Berlin.
- iv) Roma saw the boy and threw an apple to him.

Activity 2. Write the gist of the given extract in about 50 words.

2

Section D Writing Skills

Q. 6(A) Letter Writing (any one)

(4)

Write a letter of application in response to the following advertisement with the help of the given C.V.(Resume):
Required Experienced Sales Staff(Male & Female)

Qualifications:

XII Standard and having at least 2 years' experience in textile sales.

Apply to:

The Managing Director;

Richa Industries Ltd,

DLF Industrial Area, Faridabad-121003 Haryana, India

C.V(Resume)

Name: Sanjay Shah

Address: A-305,Koregaon Park, Pune.

Educational Qualifications:

Degree	Year of passing	University/board	Percentage	Class
SSC	2015	SSC	68%	I
HSC	2017	HSC	58%	II

Experience: 2 years' experience at a renowned Pune based textile outlet.

OR

Read the following intro of a news and write to the Municipal Commissioner, requesting for immediate action.

MENACE OF STRAY DOGS

The areas around Bhayander W surrounding the Panchatantra Towers is filled with stray dogs, spreading skin infections and competing for food and biting residents when they get violent, 2 children have already been bitten and people are terrified to visit the residents of this area. The Municipal Commissioner needs to look into the issue of rehabilitating the stray dogs to keep the residents' safe and disease free.

Q. 6 (B) Write any one of the following items:

(4)

1) **Appeal:** The Secretary of the Students' Council of your college has arranged a health and wellness camp of 10 days for the elderly. You are required to raise funds to conduct the same. You need to invite health and fitness specialists like a yoga instructor, nutritionists, doctors who deal with age related ailments. Prepare a leaflet appealing to people to donate sufficient funds to conduct the same. Make use of the following points:

- -make an attractive slogan
- -explain the need for such health sessions
- -give information about the talks and activities that will be included
- -ask for contributions
- -add other ideas of your own

OR

2) Read the following Intros of news items. Choose any ONE of them and write headline, the dateline and a short continuing paragraph:

- (i) Two schoolchildren were injured after the bus they were travelling in was stoned by unidentified miscreants in Srinagar at 8.45 am on Wednesday, evoking outrage from the people of the region.
- (ii) The National Film awards were announced by Shekhar Kapur, The head of the Jury for feature films, on Friday 13 April 2018. Sridevi bags the National Award for Best Actress; A R Rahman takes home two of the awards. Vinod Khanna get the Dada Saheb Phalke award.

Q. 6 (C) Write any ONE of the following items:

(4)

1) **Information transfer**

Study carefully the following tabular representation of the opinion of viewers on the T V programme 'Cool Dudes' in the year 2016-17. Write a paragraph of about 120 words drawing as many conclusions as possible.

Choice	Men	Women	Children	Total
1) Like the Programme	50	56	45	151
2) Indifferent	23	16	12	51
3) Do not like	43	55	40	138
4) Total	116	127	97	340

OR

2) **View-Counter view**

Prepare a paragraph with an appropriate title to be used for the counter-view section on the following topic in about 120 words:

View Section: Security Cameras are an invasion of our privacy

- Everyone has a set of private things hidden from the rest of the world which should be respected
- Security cameras installed in a few necessary public places is acceptable but not otherwise
- People who really want to escape the cameras know and have the technology to evade it.
- The world needs to open up and belong to such a civilization where there is trust and harmony which can happen only with education and not security cameras.

Q.7. Do the following activities:

(7)

(A) **Interview Questions**

A representative from Lions Club International, an organization which works with WHO to promote awareness on blindness and vision impairment, has been invited to your college on World Sight Day (second Thursday of every October). Frame a set of 8 -10 questions to interview him. Prepare one introductory question, some probing questions and one concluding question.

(B) **Prepare a Speech on the topic 'The Rising levels of Cosmetic Surgery Is Exceeding Good Sense' using the following points**

- Each one is born unique and beautiful
- Cosmetic surgery not simple but painful ones involving all risks.
- It is a potential health risk.
- More importance to develop self-confidence and grow wise



प्रश्न: 1 (क) परिच्छेद पढ़कर सूचना के अनुसार कृतियाँ कीजिए।

[8]

(1) संज्ञान पूर्ण कीजिए

(2)

सौरमंडल के इन ग्रहों को बतलव है _____, _____, _____
शनि की सतह पर अंतरिक्ष यान को उतारना तो संभव नहीं है, परंतु टाइटन की सतह पर अंतरिक्ष यान को उतारने के प्रयास किए जाँचें।

शनि इस की सबसे आकर्षक चीज है इसके चारों ओर के बलय का संलय। सबसे पहले गैलिलियो ने ही इसकी खोज की थी। अभी कुछ साल पहले तक शनि के तीन स्पष्ट बलय पहचाने गए थे। इनके बीच में कुछ खाली जगह भी है। शनि के ये बलय इस ग्रह के विपुलवर्तीय समतल में ही परिभ्रमा करते हैं। इनके कुछ अर्थोंमें पायोनियर और वायरजर यानों के जहाँ शनि के और भी कुछ बलय घोड़े गए हैं। इन बलयों की संख्या अब सात पर पहुँच गई है।

सातवाँ बलयकारी के अनुसार बृहस्पति, युरेनस और नेपच्यून के इर्द-गिर्द भी बलय है, परंतु शनि के बलय ज्यादा विस्तृत और स्पष्ट हैं। ये शनि की सतह से करीब 50 हजार किलोमीटर की ऊँचाई पर शुरू होते हैं और दो लाख किलोमीटर से भी अधिक दूरी तक फैले हुए हैं। लेकिन इनकी मोटाई 10 किलोमीटर से अधिक नहीं हो सकती। इसलिए विशेष अवसरों पर शनि के बलय होने पर पूरी रेखा-जैसे दिखाई देते हैं। कभी-कभी इन बलयों में से दूर के तारों को देखा जा सकता है।

शनि हमारे सौर मंडल का एक अदभुत और सुंदर ग्रह है। किसी भी ग्रह की शुभ या अशुभ समझने का कोई भौतिक कारण नहीं है। शनि तो हमारे सौर मंडल का सबसे खूबसूरत ग्रह है।

(2) छोटे मिलाइए:

(2)

'अ'	'ब'
(क) पायोनियर	(1) टाइटन
(ख) सबसे खूबसूरत ग्रह	(2) सात
(ग) शनि का उपग्रह	(3) यान
(घ) शनि की बलय संख्या	(4) शनि
	(5) चौब

(3) (1) निम्नलिखित अर्थवाले शब्द परिच्छेद से हैकर लिखिए:

(2)

(1) उपरी स्तर (2) संलय या घेरा

(ii) वचन परिवर्तित कीजिए-

(1) चीज (2) परिभ्रमा

(4) किसी चीज को शुभ या अशुभ समझना उचित है या अनुचित अपना दृष्टिकोण संक्षेप में लिखिए।

(2)

(ख) परिच्छेद पढ़कर सूचना के अनुसार कृतियाँ कीजिए।

[8]

(1) संज्ञान पूर्ण कीजिए:

(2)

मजदूर के बच्चों के पास ये चीजें थी _____, _____, _____

"साइकल है बाऊ बी, आप जाने-जाने चलो...इधर आपका स्मूटर पहुँचा कि मैं भी पीछे-पीछे पहुँचता हूँ।" वह एक छोटा सा लका बना घर था। देखकर लग ही रहा था कि किसी मध्यमवर्गीय ईमानदार कारकारी का घर है। चित्रतो में बानाए जाने की केतरीलीबी और किशायत नजर आ रही थी।

उस मजदूर ने साइकल रोकी। साइकल पर लगे दोनों बच्चों को उतारा फिर उन बच्चों को उसने घर के गेट के पास ही एक गंदला सा चादर बिछाकर छायादार होने में बिठा दिया। स्वयं जीवारी का पैसा लिए उनके पीछे-पीछे पैदली में बनी सीटियों तक चला आया। उनके लिए गए ताप और अपने अनुभव के अनुसार कुछ मोड़-पटाव किया, पिता लेकर लड़ी माप लिए, मिथान लगाए और छेनी से छेद करने लगा। तीनों बच्चे लड़ी चुपचाप बैठ बजब का संलय दर्शा रहे थे। वे उसे छोड़कर लड़ी की पुकार पर खाना खाने बैठ गए। वह खट-खट छेनी हथौड़ी बजाता रहा। खाना खाकर लुमि की टकाल लेकर वे लड़े ही थे कि उन्हें बाज़ार बेटे उन तीन बच्चों का ख्याल आया। तीन छोटे बच्चे और पिछले एक घंटे से कोई आवाज नहीं। देखा कि उस छायादार होने की धूप ने जरा-जरा हथिया लिया था। अपने पंद्रह मिनट में वह बोना पूरा धूप से घिरने वाला था।

लेखक बच्चे शांत जाने में मगन होकर बच्चा एक समता चिल्लाता लेकर लड़े बच्चे को हँसा रहा था। (आई तीन साल की लड़की चादर पर अथलेटी डेप रही थी। पास ही एक स्टीन का तीन खंडों वाला डिक्कन रखा था। लुड की आधी भरी बोतल थी। एक समने म्यूवीज डिस्कुट का पैकट था। बच्चे की कोई कुपेक्षित बच्चे नहीं दिख रहे थे।) (मैमैने मगन प्यारे नेहरो जाने गदबदे बच्चे से।

(2) उधर लिखिए:

(2)

(i) घर देखकर मजदूर के मन में आई बातें _____, _____

(ii) मजदूर का काम करने का तरीका _____

[1]

(3) (i) विंग बदलकर लिखिए:

(1) पड़ी (2) लड़की

(ii) परिच्छेद से शब्द चुनकर खोँटकर लिखिए - _____

(4) भंडी में काम डूँडते मजदूरोंको देखकर आपके मन में उठे विचार को लिखिए।

(ग) 80 से 100 शब्दों में उत्तर लिखिए। (सिर्फ एक)

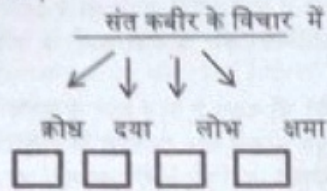
(i) 'बुढ़ाओं से' पाठ का उद्देश्य स्पष्ट कीजिए।

(ii) सयानी बुआ का चरित्र चित्रण कीजिए।

(iii) "एक व्यवसाय में दृढ़तापूर्वक लगे रहना श्रेयस्कर है," इस कथन को स्पष्ट कीजिए।

प्रश्न: 2 (घ) पद्यांश पढ़कर सूचना के अनुसार कृतियों कीजिए।

1) संज्ञाल पूर्ण कीजिए



ऐसी बानी बोलिए, मन का आपा खोय।

औरन को सीतल करै, आपहु सीतल होय।।

पाहन पूजे हरि मिलै, तो मैं पूजू पहार

ताते यह चाकी भली, पीस खाय संसार।

जहाँ दया तहाँ धर्म है, जहाँ लोभ तँह पाप




जहाँ क्रोध तँह काल है, जहाँ क्षमा तँह आप

(2) आकृति पूर्ण कीजिए:

वाणी के बारे में संत कबीर जी का संदेश



वर्णन



(3) पद्यांश के प्रथम दो दोहे का भावार्थ सरल हिंदी में लिखिए।

(घ) पद्यांश पढ़कर सूचना के अनुसार कृतियों को कीजिए:

(1) संज्ञाल पूर्ण कीजिए:

इन स्थितियों में भी जागृत रहने की कवि की कामना _____, _____, _____, _____

मौं बस यह वरदान चाहिए।

जीवनपथ जो कंटकमय हो,

विपदाओ का घोर वलय हो,

किंतु कामना एक यही बस,

प्रतिपल पग गतिमान चाहिए।

हास मिले या त्रास मिले,

विश्वास मिले या फाँस मिले,

गरजे क्यों न काल ही सम्मुख

जीवन का अभिमान चाहिए।

(2) (i) उचित विकल्प चुनकर काव्यपंक्तियाँ पूर्ण कीजिए:

(1) प्रतिपल पग..... चाहिए।

(अ) गतिमान (ब) क्रियाशील (क) सक्रिय

(2) गरजे क्यों नही सम्मुख।

(अ) आज (ब) काल (क) संकट

(iii) उत्तर लिखिए:

इन स्थितियों में कवि की गतिमान रहने की कामना _____, _____

(3) प्रस्तुत पद्यांश का भावार्थ अपने शब्दों में लिखिए।

(ग) पद्यांश पढ़कर दी गई सूचनाओं के अनुसार कृतियों को कीजिए:

(1) संज्ञाल पूर्ण कीजिए:

पत्थर तोड़ती स्त्री का वर्णन _____, _____, _____, _____

वह तोड़ती पत्थर!
देखते देखा मुझे तो एक बार
उस भवन की ओर देखा, छिन्न तार,
देखकर कोई नहीं,
देखा मुझे उस दृष्टि से
जो मार खा रोई नहीं,
सजा सहज सितार,
सुनी मैंने वह नहीं जो थी सुनी झंकार
एक क्षण के बाद वह कांपी सुघर,
डुलके माथे से गिरे सीकर,
लीन होते कर्म में फिर ज्यों कहा-
"मैं तोड़ती पत्थर।" छ

(2) पद्यांश का भावार्थ अपने शब्दों में लिखिए ।

(2)

प्रश्न: (3) परिच्छेद पढ़कर सूचना के अनुसार कृतियाँ कीजिए:

[10]

(अ) (1) संजाल पूर्ण कीजिए:

(2)

डॉ. अंबेडकर के कोलंबिया यूनिवर्सिटी में अध्ययन विषय _____, _____, _____, _____

परिच्छेद: पहली बार डॉ. आंबेडकर ज्ञान साधना के लिए अमेरिका गए, तो बड़ौदा नरेश महाराज सयाजीराव गायकवाड़ द्वारा दी हुई शिष्यवृत्ति की सहायता से। महाराज मुंबई में थे। वे होनहार प्रतिभाशाली युवक भीमराव से बहुत प्रभावित थे। मई में 14 अप्रैल, 1891 में जन्मे अंबेडकर उस समय इक्कीस वर्ष के थे। महाराज सयाजीराव ने भीमराव से कहा, "शिक्षामंत्री को अर्जी दे दो और मुझे सूचना दो।" उन्होंने घर आकर अर्जी भेज दी। ग्यारह पाउंड मासिक छात्रवृत्ति मंजूर हो गई। 14 जून, 1916 तक तीन बरस के लिए यह वृत्ति थी। इसमें ये शर्तें थी कि ये तीन वर्ष विद्याया अध्ययन में ही व्यतीत करने पड़ेंगे और उपाधि मिलने पर दस बरस तक बड़ौदा राज्य में सेवा करनी होगी। अमेरिका जाने की व्यवस्था तो हो गई, परंतु घर में खर्च की क्या व्यवस्था होगी। आनंदराव, उनका बड़ा भाई, अकेला कमाने वाला था। घर में पाँच-छह मुँह खाने वाले थे। भीमराव ने शिक्षा विभाग से कुछ रूपए पेशगी लिए और उनमें से कुछ आनंदराव को दिए।

'एस.एस.अकोला' जहाज पर सवार होकर भीमराव अंबेडकर 21 जुलाई, 1913 को अमेरिका पहुँचे। पहले न्यूयॉर्क और वहाँ से कोलंबिया यूनिवर्सिटी में दाखिल हुए। वहाँ छात्रालय में एक सप्ताह ठहरकर काला पालिटन क्लब में जाकर रहने लगे। उनके अध्ययन के प्रमुख विषय में अर्थशास्त्र प्रमुख विषय था, और साथ में समाज विज्ञान, मानववंश विज्ञान और दर्शनशास्त्र। ये विषय लेकर भीमराव अंबेडकर एम.ए का अध्ययन करने में जुट गए।

(2)

(2) कृति पूर्ण कीजिए:

डॉ. आंबेडकर जी की जानकारी -

जन्मतिथि _____

जन्मस्थल _____

भाई का नाम _____

छात्रावृत्ति की रकम एवं अवधि _____

(2)

(आ) उचित जोड़ियाँ मिलाइए:

'अ'

'आ'

(क) सयाजीराव गायकवाड़

(i) जहाज

(ख) एलफिंस्टन कॉलेज

(ii) अमेरिका

(ग) एम.एस.अकोला

(iii) बड़ौदा नरेश

(घ) कोलंबिया यूनिवर्सिटी

(iv) मुंबई

(2)

(2) उत्तर लिखिए:

(i) डॉ. आंबेडकर जी को मिली छात्रावृत्ति की शर्तें: _____, _____

(ii) निम्न तिथियाँ लिखिए:

(1) बी.ए पास किया _____

(2) ज्ञानसाधना हेतु विदेश गमन _____

(3) 'ज्ञानप्राप्ति की लालसा ही विद्यार्थी को जीवन में गौरव प्राप्त कराती है' इस तथ्य पर अपने विचार लिखिए।

(2)

[10]

प्रश्न: (4) सूचना के अनुसार कृतियाँ कीजिए :

(1) कोष्ठक में दी गई सूचनाके अनुसार कालपरिवर्तन कीजिए: (3 में से 2)

(2)

[3]



PROHLADRAI DALMIA LIONS COLLEGE OF COMMERCE & ECONOMICS
SYJC TERM END EXAMINATION 2018

Duration: 3 Hrs.

SUBJECT: MARATHI

Marks: 80

विभाग १ निबंधलेखन

(१०)

कृती १ : खालीलपैकी कोणत्याही एका विषयावर सुमारे ३०० शब्दांपर्यंत निबंध लिहा.

१०

- १) पुस्तकाची कैफियत लिहा.
- २) समाज घडणीत युवकांची जबाबदारी
- ३) परीक्षा नसल्या तर
- ४) माझे आवडते शिक्षक

विभाग २ गद्य

(१२)

कृती २ : अ) खालील उताऱ्याच्या आधारे सूचनेनुसार कृती करा.

(४)

- १) लता मंगेशकर यांनी गायलेल्या 'ऐ मेरे वतन के लोगो' या गाण्याचा झालेला परिणाम एका वाक्यात लिहा.
- २) या उताऱ्यात आलेला एक प्रत्ययघटित व एक उपसर्गघटित शब्द लिहा.
१) २)

अगदी अलीकडे एका असामान्य प्रतिभेच्या कलावंतांशी माझी भेट झाली; ज्या स्वतः एक आदर्श म्हणून उभ्या आहेत. आपले बडील दीनानाथ मंगेशकरांच्या स्मृतिप्रीत्यर्थ झालेल्या एका कार्यक्रमात गानसम्राज्ञी लता मंगेशकर मला भेटल्या. त्या स्वतः 'भारतरत्न' या पदवीने विभूषित आहे. पुण्यातल्या 'दीनानाथ हॉस्पिटल अँड रिसर्च सेंटर' च्या उद्घाटनाला त्यांनी मला आमंत्रित केलं हा मी माझा सन्मान समजतो. उद्घाटनापूर्वी प्रथमच मी हॉस्पिटल पहिले. इथे येणाऱ्या एकूणच रुग्णांपैकी ३० टक्के रुग्णांना मोफत सेवा मिळणार असल्याचं मला समजले. इतकी अमाप संपत्ती आणि प्रसिद्धी पायाशी लोळण घेत असताना सुद्धा, गरिबांची आणि गांजलेल्यांची सेवा कोणाला तरी करावी लागते हा मानवतावादी दृष्टिकोन त्या विसरलेल्या नाहीत हे पाहून मी भारावलो. गेली अनेक दशके रेडिओवरून ऐकू येणारी त्यांची गाणी ऐकून अगणित हृदये झंकारतात, अगणितांना समाधान मिळते. १९६२ मधल्या चीन-भारत युद्धाच्या वेळी त्यांच्या 'ऐ मेरे वतन के लोगो' या गाण्याने आख्खा देश हालवून सोडला होता. आपल्या अंगच्या केलेने एकाच वेळी कोट्यवधी लोकांना समाधान तृप्त करायचं भाग्य अगदी काही थोड्यांनाच लाभतं.

- ३) 'गेली अनेक दशके रेडिओवरून ऐकू येणारी त्यांची गाणी ऐकून अगणित हृदये झंकारतात' या वाक्यातील आशय सुमारे ८ ते १० ओळीत स्पष्ट करा.

२

ब) खालील उताऱ्याच्या आधारे सूचनेनुसार कृती करा.

(४)

मी वेड्यासारखी समुद्र पहात रहायची. कधी सकाळी तर कधी चांदण्या रात्री. पाण्यावर सांडलेले चांदणं पाहिलं कि वाटायचं सगळा समुद्र ओंजळीत पकडावा. कसं थंड, शांत वाटायचं, मनातले सगळे विकल्प लयाला गेले असायचे. अवघे अस्तित्व निरामय होऊन जायचं. आपण आणि हा अथांग पसरलेला समुद्र ! बाकीची जाग - जाण मिटलेली असायची. अशी अभूतपूर्व शांतता मी पूर्वी कधी अनुभवलेली नव्हती. मुरुडच्या समुद्राने मला बांधून ठेवलं. मी लिहायला लागले त्यामागे या मुरुडच्या समुद्राची फार मोठी प्रेरणा आहे. पुढे पुढे येणाऱ्या लाटा म्हणजे महत्वाकांक्षा, यश आणि आत्मविश्वासचं प्रतीक वाटायच्या, तर मागे मागे सरकणाऱ्या लाटा म्हणजे प्रभाव, अपयश, मानहानी पचवणारी शक्ती. समुद्राच्या पोटात किती काय काय दडलं असेल ! त्यानं किती पचवले असेल, किती सहन केले असेल. माणसाच्या मनाचे मला ते दुसरे रूप वाटायचं. समुद्राशी माझा संवाद चालायचा. माझ्या एकटेपणाच्या, पोरकेपणाच्या जगण्यात समुद्राची सोबत मला फार आधार देऊन गेली. मी मोकळेपणी गाऊ लागले, स्वतःशीच संवाद साधू लागले. मुरुडच्या समुद्राने माझ्या लेखणीला शब्द दिले, विचारांना दिशा दिली आणि माझ्यातली काव्यात्मकृती जागवली.

'मला आवडलेला समुद्रकिनारा' या विषयावर सुमारे १२ ते १५ ओळीत लिहा. किंवा
सागरसम्पत्तीने आपले जीवन कसे समृद्ध केले आहे ते तुमच्या शब्दांत १२ ते १५ ओळीत लिहा.

क) खालील उताऱ्याच्या आधारे सूचनेनुसार कृती करा.

(५)

- १) फरक लिहा. १. प्राणी - पक्षी याचे घर ----- २. मानवाचे घर -----
२) खालील इंग्रजी शब्दाला मराठी प्रतिशब्द लिहा. होलिस्टिक अप्रोच -----

मातीचे बांधकाम म्हटल्यावर वारूळ येते. वारूळाच्या बांधकाम तंत्राबद्दल थोडा विचार करूया. गवळणीने दारात केलेल्या तिच्या डोम्सकडे पहा. गांधील माशीचे घर पहा. मधमाशी, सुगरण.... क्वचित प्राणी-पक्षी एकदा बांधले घरात पुन्हा राहतात. (फक्त एवढाच मुद्दा डोक्यात पक्का करू नका. नाही तर सेकंड होम कसे निसर्गातच येता याला पुष्टी म्हणून त्याचा वापर व्हायचा.) त्यांच्या घरांचा वेगळा असतो बांधलेले घर पुन्हा निसर्गाचाच होऊन जाते. आपल्या घरासारखा त्याचा कचरा निर्माण होत नाही. हा त्यांच्यातला आणि आपल्यातला फरक आपण फक्त निसर्गावर भरच आहे. जगताना एकाच दिशेने.... एकाच विचाराने आपण जगू शकत नाही आपल्याला पूर्णवादी म्हणजेच होलिस्टिक अप्रोच ठेऊन जगला हवे. तुकड्या तुकड्यात नाही मग मातीचे घर प माती वापरून होऊ शकते. मातीच्याच विटा, मातीचाच मसाला म्हणजे मॉर्टार मातीचाच गिलावा आणि हो, छप्प मातीचेच. मुंग्यांनी त्यांच्या गुरूंनी दिलेला मंत्र जपला आणि मातीचं घर बांधलं, टिकवले. तेच आपण करूया.

प्रसन्न कुलकर्णी

- ३) 'प्राणी- पक्षी व निसर्ग' आणि 'माणूस व निसर्ग' याबद्दलचे तुमचे विचार ८ ते १० ओळीत लिहा.

२

विभाग ३ - पद्य

(८)

कृती ३:अ) खालील अभंगाच्या आधारे दिलेल्या सूचनेनुसार कृती करा.

(५)

- १) अभक्ताची ओळख करून देताना दिलेल्या दोन फळांची नवे लिहा.

१

१..... २.....

- २) खालील शब्दांचा कवितेत असणारा विरुद्धार्थी शब्द लिहा.

१

१. कठीण २. कोवळी

नारळ कठीण दिसे बाहेर । भितरी खोबरें अरुवार ॥

तैसें साधूंचे अंतर । बोधें वोसडले ॥१॥

आंबे साले तुरट रस गोड । आठोळी निबर जैसा दगड ।

तैसे अभक्ताचे कैवाड । वरदळ गोमटे ॥२॥

इंद्रावने कोवळी कडवट । पक्व जाल्या येतसे वीट ।

तैसे अभक्त अति नष्ट । तारुण्य वृद्धपणी ॥३॥

पक्व जालिया इंद्रावन । अमृतफळसे दिसे दुरून ।

हाती धरू नये, कडूपण । तदन्याये कपट्याचे ॥४॥

- ३) 'साधू आणि अभक्त' याविषयी संत शेख महंमदांनी सांगितलेले विचार तुमच्या शब्दांत ८ ते १० ओळीत लिहा.

२

ब) खालील कवितेच्या आधारे दिलेल्या सूचनेनुसार कृती करा.

(५)

असें तुझ्याशी बोलावे हें, ठरवुन आलों मनांत काहीं ;

आणिक तुझिया नेत्रीं दिसलें, बोलायाचे तसें तुलाही.

असा कसा मग मुकाच झालों ! चर्चा केली नको नको ती ;

हास्याच्या उठल्या लहरी, पण मानत लपले मनाचे मोती.

एक आवंढा गिळून तूही, गिळले जे थरथरले ओठीं ;

ओठ दाबिला उठवित नाजूक, भुवयांवर बारिकशी आठी.

त्या आठीच्या रेघेवर पण, शी ठोकिली मम नशिवाने

असा कसा मी मुकाच झालों, मुकी जाहलिस तुही कशाने ?

या जन्माला फुटे न भाषा ; निदान पुढच्या फुटेल का ती ?

ज्योतीत तुझ्या जळल्यावाचून, मातीला नच मिळेल माती.

'या जन्माला फुटे न भाषा' या शीर्षकाची यथार्थता सुमारे १२ ते १५ ओळीत स्पष्ट करून लिहा.

किंवा

'संयमित व उदात्त प्रेम आणि आजचे विध्वंसक एकतर्फी प्रेम' याविषयी तुमचे विचार १२ ते १५ ओळीत लिहा.

कृती ४: अ) खाली दिलेल्या पर्यायांतून निर्दोष शब्द ओळखून लिहा.

२

१. अ) धिक्कार ब) धिकार क) धीक्कार ड) धिक्कार

२. अ) अंतरकर ब) अंतर्करण क) अंतःकरण ड) आंतःकरण

आ) पुढील वाक्यप्रचारांच्या अर्थाचा योग्य पर्याय निवडून लिहा.

२

१. पोट्यात कावळे ओरडणे --- अ) पोट्यात दुखणे ब) पोट फुगणे
क) भुकेने व्याकूल होणे ड) खाण्याची इच्छा नसणे

२. पडावं पडणे --- अ) कायमस्वरूपी राहणे ब) पडवीत राहणे
क) नावेत बसणे ड) तात्पुरते वास्तव्य करणे

इ) खालील वाक्यातील वाक्यप्रकाराचा योग्य पर्याय ओळखून लिहा.

२

१. मी त्या खडकाच्या आडून हळूहळू बाहेर यायची तयारी करू लागलो.

अ) प्रश्नार्थी ब) उद्गारार्थी क) नकारार्थी ड) विधानार्थी

२. त्या यंत्रमानवाची काहीच चूक नाही असे नाही.

अ) नकारार्थी ब) प्रश्नार्थी क) विधानार्थी ड) उद्गारार्थी

ई) खालील वाक्यात येणाऱ्या योग्य विरामचिन्हांचा पर्याय निवडून लिहा.

२

१. "बोल बाबा काय झालं ". अ) प्रश्नचिन्ह, उद्गारचिन्ह ब) स्वल्पविराम, उद्गारचिन्ह
क) संयोगचिन्ह, पूर्णविराम ड) अर्धविराम, प्रश्नचिन्ह

२. मी विचारले, असे का म्हणतोस बाबा अ) पूर्णविराम, अर्धविराम

ब) दुहेरी अवतारचिन्ह, प्रश्नचिन्ह क) अर्धविराम, पूर्णविराम ड) उद्गारवाचक चिन्ह, पूर्णविराम

उ) खालील विधानातील व पद्यपंक्तीतील रस ओळखून लिहा.

२

१. पाण्यावर सांडलेले चांदणं पाहिलं की वाटायचं सगळं समुद्र ओंजळीत पकडावा .

अ) रौद्ररस ब) शांतरस क) करुणरस ड) भयानकरस

२. साममंत्र तो सारे, रणाची नौबत आता धडधडते .

अ) रौद्ररस ब) भयानकरस क) शृंगाररस ड) शांतरस

ऊ) खाली दिलेल्या पर्यायांतून पारिभाषिक शब्दांसाठी योग्य प्रत्यय निवडून लिहा.

२

१. BACKLOG २. VACANT POST

अ) शिस्तभंग ब) अनुशेष क) परिभाषा ड) रिक्तपद

विभाग ५ - विनोद एक वाङ्मयप्रकार

(८)

कृती : अ) खालील उताऱ्याच्या आधारे सूचनेनुसार कृती करा.

१

१. एक स्त्रीलिंगी भुताचे नाव --- एक पुल्लिंगी भुताचे नाव ---

२. खालील उताऱ्यात आलेले विरुद्धशब्द लिहा ---

१

तुकारामाने जी माहिती सांगितली तीवरून पाव्हण्याला एवढे समजले की ही भुते कुठेही असू शकतात. ती अमक्या ठिकाणी नाहीत असे कुणालाही छातीवर हात ठेवून सांगता यायचे नाही. कदाचित ती सध्या आपल्या घरात माळवदावर बसलेली असतील. कदाचित ती अगदी ह्याच वेळी आपल्या पाठीमागून पावले टाकीत, अगदी अदबीने येत असतील. पण साधारणपणे सांगातच म्हणजे ती कुठल्याही पडक्या वाड्यात, विहिरीत, मसणवटीत असतातच. विशेषतः विहिरीत हडळ असते आणि ती सुंदर बाईचे रूप घेऊन इकडे तिकडे हिंडत असते. कुणी एकटादुकटा आढळला तर त्याला विहिरीत नेऊन मारते. बिल्कुल हयगय करीत नाही. पिंपळावर तर मुंजा हटकून असतो आणि वड पिंपरणी, लिंबू - असल्या झाडांवरही भुते माकडासारखी गर्दी करून बसलेली असतात. दिवस ती काही करत नसली तरी रात्रीच्या वेळी त्यांना उजाडते. त्या वेळी मात्र कुठेही आणि कुणाच्याही वेषात भेटतात. त्यांचे पाय उलटे असतात असे म्हणतात; पण तसे काही त्यांच्यावर बंधनच आहे असे नाही. अमावस्येच्या रात्री तर ती हमखास फिरायला निघालेली असतात. अशा वेळी त्यांच्यासंबंधी काही बोलणे अगर दृष्टीस पडणे हे धोक्याचे असते.

३. 'भूत' या कल्पनेबाबत समाजात असणाऱ्या अंधश्रद्धे संबंधी १२ ते १५ ओळीत माहिती लिहा.

४

किंवा

समाजात रुढ असणारी एखादी अंधश्रद्धा सांगून या अंधश्रद्धेच्या निर्मूलनासाठी कोणती उपाययोजना करत
येईल ते १२ ते १५ ओळीत लिहा.

४. 'भित्यापाठी ब्रह्मराक्षस' हि कल्पना ८ ते १० ओळीत स्पष्ट करा.

२

(१०)

६

विभाग ६ - सर्जनशील लेखन

कृती ६; अ) खालील कवितेचे १५ ते २० ओळीत रसग्रहण करा.

सगळ्याच झाडांच्या फळांवर

सगळ्याच झाडांच्या फळांवर नसते लिहिलेले आपले नाव
सगळ्याच गावांना जाण्याइतकी नसते आपल्या पायांची धाव
आंबट म्हणू नयेत फळे आपल्या नावाची निशाणी नसलेली
नाकारू नयेत गवे आपल्या पायांची पालथी न घातलेली
ही एवढीशी कुडी, इवलीशी ओंजळ ... त्यात मावणार किती ?
पण हे गूढ अनाकलनीय मन ज्याला न मर्यादा न मिती
आपापल्या कुवतीप्रमाणे स्वतःपुरतेच शोधत रहावे उतर
आपल्याच अर्ध्यामुर्ध्या पाकळीतून मिळवावे निदान थेंबभर अंतर

--- वृंदा लिमये

किंवा

अ) खालीलपैकी कोणत्याही एका विषयावर १५ ते २० ओळीत संवादलेखन करा.

१) सहलीतून मिळणाऱ्या आनंदाबाबत दोन विद्यार्थ्यांमधील संवाद

२) 'वाचलेले चांगले पुस्तक', याबाबत मित्राशी / मैत्रिणीशी संवाद.

३) तुमच्या परिसरातील पर्यावरणपूरक काम करणाऱ्या गणपती मंडळाच्या अध्यक्षांशी संवाद

कृती : ब) योग्य प्रश्नांची सूचनेनुसार उत्तरे लिहा.

१. खालील वाक्यातील अंशाभ्यस्त शब्द शोधून लिहा.

वाक्य - त्यांचा बंगला तसा मॉडर्न कॉलनीतल्या शांत भागात होता.

बंगल्याच्या आजूबाजूला चक्क झाडीबिडी.

२. खालील विधानातील पूर्णाभ्यस्त शब्द शोधून लिहा.

वाक्य - कधी कधी माझा देह खडकांवर उभा - आडवा कसाही आपटत होता.

३. क्रियापदाचे स्थान बदलून उठावदार वाक्यरचना करा.

वाक्य - रात्रीचा काळाकुट्ट अंधार सगळीकडे दाटला होता.

४. खालील विधानातून दोन विशेषणे शोधून लिहा.

वाक्य - हिराची आई तरतरीत मार्कची अन केवड्याच्या रंगाची होती.

विभाग ७ - उपयोजित लेखन

कृती ७ अ) खालीलपैकी कोणत्याही दोन कृती सोडवा.

१. दिलेल्या मुद्द्यांच्या आधारे 'अग्रलेखा' विषयी सुमारे १५ ते २० ओळीत विवेचन करा.

अग्रलेख म्हणजे - अग्रलेखाचे महत्त्व व भूमिका - काही प्रमुख सम्पादकांची नावे - अग्रलेख व बातमी
स्पष्टीकरण - वाचक आणि अग्रलेखाचे नटे - दोन अग्रलेखाची उदाहरणे . २. दिलेल्या मुद्द्यांच्या आधारे
'आर. जे.' ची वैशिष्ट्ये सुमारे १५ ते २० ओळीत लिहा.

आर. जे. - रेडिओ जॉकी - भाषेवर प्रभुत्व - सलग दोन तीन तास खिळवून ठेवण्याची क्षमता - मिश्र भाषा
प्रयोग - रंजकता - विविध क्लुप्त्या - उस्ताहवर्धकता - श्रोत्यांशी मनमोकळा संवाद

३. दिलेल्या मुद्द्यांच्या आधारे तुम्हांला दूरचित्रवाणीवरील आवडलेल्या जाहिरातीविषयी सुमारे
१५ ते २० ओळीत माहिती लिहा.

मॉडेल - कॅमेऱ्याचा कौशल्यपूर्ण पूर्ण वापर - उत्पादनाची माहिती - निवेदन - गुणवत्तापूर्ण आवाज - रंगसंगती -
संगीत - याचा योग्य वापर - योग्य अनुवाद - लक्ष्य वयोगट - ग्राहकाचे समाधान.

ब) खालीलपैकी कोणत्याही एका विषयावर मुलाखतपूर्व प्रश्नावली तयार करा.

(१० ते १२ प्रश्न अपेक्षित)

१. प्लस्टिक निर्मूलनाबाबत कार्य करणाऱ्या कार्यकर्त्यांची मुलाखत .
२. निराधार मुलांसाठी कार्य करणाऱ्या संस्थेच्या अध्यक्षांची मुलाखत .
३. 'स्वच्छ भारत अभियान' या कार्यक्रमाच्या निमित्ताने कॉलेजच्या मुख्याध्यापकांची घेतलेली मुलाखत .

क) खालील उतान्याच्या आधारे सूचनेनुसार कृती करा.

१. खालील इंग्रजी शब्दांसाठी योग्य मराठी प्रतिशब्द लिहा.
इंटरसेप्टर मिसाइल
२. 'फेसबुक' संकेत स्थानावरील दोन मराठी गट लिहा.
३. या पाठाचा उद्देश एका ओळीत लिहा.

या संकेतस्थानांपासून धोके अनेक आहेत. पण ती गंभीरपणे वापरली तर त्याचा उपयोगही खूप आहे. समविचारी मित्रमैत्रीणी जोडून त्यांच्याशी विचारांचे आदानप्रदान करता येते. आपल्या मनात जे विचार येतात व विरून जातात, त्यांना शब्दबद्ध करून ते नीट मांडण्याची सवय लावता येते. इतरांनी मांडलेल्या मतांवर विचार केला येतो. म्हणजेच विचारांना चालना मिळते. आपल्याला असलेल्या शंकांचे निरसन इतरांकडून करता येते. उदाहरणार्थ, इंटरसेप्टर मिसाइल 'या इंग्रजी शब्दांसाठी एका वृत्तपत्रात 'आंतरविच्छेदी क्षेपणास्त्र' असा मराठी शब्द योजण्यात आला होता. हा अनुवाद योग्य वाटत नव्हता, त्यामुळे त्याविषयी 'फेसबुक' वर झालेल्या चर्चेनंतर 'क्षेपणभेदी क्षेपणास्त्र' असा नेमका शब्द एकाने सुचवला. असा उपयोग या संकेतस्थानाचा करून घेता येतो. काही समान छंद असलेले गट संकेतस्थानांवर असतात, त्यांच्याकडून आपल्या आवडीच्या क्षेत्रात नवे काय चालले आहे, ते कळू शकते. फेसबुक या संकेतस्थानावरचे 'वाचू आनंदे', 'चव्हाटा', 'मराठी पुस्तके', 'वाचनवेड', 'माझ्या मन', 'अभिमान आहे मराठी असण्याचा', असे काही गट सांगता येतील. महाजालावर मराठी भाषा देवनागरीचा जिथे वापरता येईल, तिथे तिथे तिचा चांगल्या तऱ्हेने वापर कार्याला शिकणे हा पाठाचा उद्देश आहे.

४. संकेतस्थानांच्या योगु वापराबाबत तुमचे मत ८ ते १० ओळीत लिहा.

समाप्त