



PRAHLADRAI DALMIA LIONS COLLEGE OF COMMERCE & ECONOMICS
Sunder Nagar, S.V. Road Malad (w), Mumbai 400064
ISO 9001:2015 Certified

FYJC ANNUAL EXAMINATION MARCH-2023

Day-----02

SEAT NUMBER

--	--	--	--	--	--	--	--

2023

3

25

1330

(E)

MATHEMATICS & STATISTICS (88)

TIME: 3.00 Hrs.

(6 Pages)

Max. Marks: 80

SECTION I

Q.1. (A) Select and write the correct answer of the following multiple choice type of questions: (1 mark each)

i) The conjugate of complex number $3 - 2i$ is _____

- a) $3 + 2i$ b) $-3 + 2i$ c) $-3 - 2i$ d) $-2i$

ii) The value of i^{24} is _____

- a) 1 b) -1 c) $-i$ d) 0

iii) n^{th} term of the following G.P. is _____

2, 8, 32, 128, 512,

- a) $2(3)^{n-1}$ b) $2(4)^{n-1}$ c) $4(2)^{n-1}$ d) $2(2)^{n-1}$

iv) If $\begin{vmatrix} 3 & 7 \\ 2 & x \end{vmatrix} = 1$ Then value of x is _____

- a) 3 b) -5 c) 5 d) 0

v) The derivative of the function x^{12} is _____

- a) $12x^{11}$ b) $11x^{12}$ c) $13x^{12}$ d) $12x^{13}$

vi) For a G.P. 1, -5, 25, -125, value of Common Ratio (r) is _____

- a) -5 b) $\frac{1}{5}$ c) 5 d) $-\frac{1}{5}$

B) State whether the following statement are TRUE OR FALSE. (1 mark each)

1) A Complex number whose imaginary part is zero is called real number.

2) The value of $\begin{vmatrix} 3 & 0 & 2 \\ 1 & -1 & 1 \\ 4 & 3 & 3 \end{vmatrix}$ is 4

3) If $y = \log x$ then $\frac{dy}{dx} = \frac{1}{-x}$

C) Fill in the following blanks:

(1 mark each)

1) Reciprocal of terms of G.P. are also in _____

2) In the Complex number of the form $a + ib$, Symbol i is called as _____

3) The rate of change of demand with respect to price is called the _____

Q2. A) Attempt any two of the following:

- Find the value of $i + i^2 + i^3 + i^4$
- For a G.P. if $S_5 = 1023$, $r = 4$ find a
- Find value of x if $\begin{vmatrix} 2 & 1 & x+1 \\ -1 & 3 & -4 \\ 0 & -5 & 3 \end{vmatrix} = 0$

(2x4=8)

B) Attempt any two of the following:

- Differentiate the following w.r.t. x

$$\frac{\log x}{x^3 - 5}$$

- Express the following in the form of $a + bi$, Where $a, b \in R$, $i = \sqrt{-1}$. State Values of a and b

$$(1 + 2i)(-2 + i)$$

- Express the following recurring decimals as rational number
0.66666.....

(2X3=6)

Q3. A) Attempt any two of the following:

- Find the area of the triangle whose vertices are $(4, 5)$, $(0, 7)$, $(-1, 1)$
- Differentiate the following w.r.t. x
 $e^x \log x$
- Find value of x if $\frac{4}{3}$, x , $\frac{4}{27}$ are in G.P.

(1x4=4)

B) Attempt any one of the following:

- Show that the following equation are consistent.
 $2x + 3y + 4 = 0$, $x + 2y + 3 = 0$, $3x + 4y + 5 = 0$
- Find the values of x and y which Satisfy following Equations. ($x, y \in R$)
 $(x + 2y) + (2x - 3y)i + 4i = 5$

(1x4=4)

C) Attempt any one of the following: Activity

- The demand function of a Commodity is given as $P = 20 + D - D^2$. Find the rate at which price is changing when demand is 3.

Solution: Given : $P = 20 + D - D^2$

$$\begin{aligned} \text{The rate of change of price} &= \frac{\boxed{}}{\boxed{}} \\ &= \frac{d}{dD} \boxed{} \\ &= \boxed{} \end{aligned}$$

When $D = 3$, the rate at which price is changing

$$= \left(\frac{dP}{dD} \right)_{D=3} = \boxed{}$$

ii) Find values of x , y and z by using Cramer's Rule.

$$x + y - z = 1, 8x + 3y - 6z = 1, -4x - y + 3z = 1$$

$$D = \begin{vmatrix} \square & 1 & 1 \\ \square & 3 & -6 \\ \square & -1 & 3 \end{vmatrix} = -1$$

$$D_x = \begin{vmatrix} 1 & 1 & -1 \\ 1 & 3 & -6 \\ 1 & -1 & 3 \end{vmatrix} = \square$$

$$D_y = \begin{vmatrix} 1 & \square & -1 \\ 8 & \square & -6 \\ -4 & \square & 3 \end{vmatrix} = -3$$

$$D_z = \begin{vmatrix} 1 & 1 & \square \\ 8 & 3 & \square \\ -4 & -1 & \square \end{vmatrix} = -4$$

$$x = \frac{D_x}{D} = \frac{\square}{-1} = \square$$

$$y = \frac{D_y}{D} = \frac{-3}{-1} = 3$$

$$z = \frac{D_z}{D} = \frac{\square}{-1} = \square$$

SECTION II

Q.4. (A) Select and write the correct answer of the following multiple choice type of questions: (1 mark each)

(i) In a bivariate frequency distribution, total frequency N is obtained as _____

- a) $\sum x$ b) $\sum f$ c) $\sum fx$ d) $\sum N$

(ii) The value of nP_r is _____

- a) 120 b) 180 c) 90 d) 18

(iii) If the sum of the product of deviations of x and y series from their means i.e. $\sum xy$ is zero, then the coefficient of correlation will be _____.

- a) -1 b) 1 c) 0 d) -2

(iv) The value of $4! \times 2!$ is _____

- a) 8 b) 24 c) 6 d) 48

(v) If marginal frequency distribution of X then the value of N is _____

Y	0-20	20-40	40-60	60-80	N
F	5	12	8	5	?

- a) 30 b) 12 c) 8 d) 5

(vi) If $r_{(x,y)} = 0.7$, then the value of $r_{(x+0.2, y+0.2)}$ is _____.

- a) 0.9 b) 0.7 c) 1.1 d) -0.7

B) State whether the following statement are TRUE OR FALSE. (1 mark each)

- 1) The arrangement of the elements does not matter in a Permutation.
- 2) For Bivariate frequency distribution total frequency is obtained as $\sum fx$.
- 3) If $r < 0$, Negative Correlation.

C) Fill in the following blank's: (1 mark each)

- 1) If the correlation coefficient between X and Y is 0.8, then correlation coefficient between $x+7$ and $y+9$ will be _____.
- 2) The value of ${}^{10}C_2$ is _____.
- 3) A Teacher wants to select the class monitor in a class of 30 boys and 20 girls. In how many ways can he select a student if the monitor can be a boy or girl _____.

Q5. A) Attempt any two of the following: (2X3=6)

i) Correlation coefficient between two variables x and y is 0.3 and their covariance is 12. The variance of x is 9. Find the standard deviation of y .

ii) Following table gives income (X) and expenditure (Y) of 25 families :

X \ Y	200 - 300	300 - 400	400 - 500
200 - 300			
300 - 400	--		
400 - 500	--	--	

Find Marginal frequency distributions of income and expenditure.

iii) show that $\frac{91}{31.60} + \frac{91}{41.52} = \frac{101}{41.60}$

B) Attempt any two of the following:

(2x4=8)

i) Find the value of ${}^{20}C_{16} - {}^{19}C_{16}$

ii) Following data gives the age of husbands (X) and age of wives (Y) in years. Construct a bivariate frequency distribution table and find the marginal distributions of x and y

(27,21) (25,20) (28,20) (26,21) (29,23) (27,22) (28,20)
 (26,20) (25,19) (25,19) (27,23) (26,19) (29,23) (25,23)
 (27,22) (26,21) (25,20) (28,22) (25,23) (27,22) (26,21)

Also find conditional frequency distribution of age of husbands when the age of wife is 23 years.

(iii) Calculate correlation coefficient from the following data:

X	1	3	5	7	9	11	13
Y	12	10	8	6	4	2	0

Q6. A) Attempt any two of the following:

(2X3=6)

i) Find correlation coefficient between x and y series for the following data:

$n = 15, \bar{x} = 25, \bar{y} = 18, \sigma_x = 3.01, \sigma_y = 3.03, \sum (x - \bar{x})(y - \bar{y}) = 122$.

ii) Find the number of 4 digit numbers that can be formed using the digits 1,2,4,5,6,8 if

(a) digits can be repeated

(b) digits cannot be repeated.

iii) Two dice are thrown simultaneously 25 times. The following pairs of observations are obtained.

(2, 3) (2, 5) (5, 5) (4, 5) (6, 4) (3, 2)
 (5, 2) (4, 1) (2, 5) (6, 1) (3, 1) (3, 3)
 (4, 3) (4, 5) (2, 5) (3, 4) (2, 5) (3, 4)
 (2, 5) (4, 3) (5, 2) (4, 5) (4, 3) (2, 3)
 (4, 1)

Prepare a bivariate frequency distribution table for the above data. Also obtain the marginal distributions.

B) Attempt any one of the following:

(1x4=4)

(i) If ${}^nP_r = 1814400$ and ${}^nC_r = 45$, Find r.

(ii) Find correlation coefficient for the following data:

(Given that $\sqrt{3} = 1.732$)

X	3	6	2	9	5
Y	4	5	8	6	7

C) Attempt any one of the following: Activity

(1x4=4)

(i) Find the number of arranging 11 distinct objects taken 4 at a time so that a specified object (a) always occurs (b) never occurs

Solution:

Here $n = 11, r = 4$

(a) One particular thing always occur:

The number of permutations $r \times (n-1)P_{(r-1)}$

Putting $r = 4, n = 11$ we get number of permutations

$$= 4 \times (11-1)P_{(4-1)}$$

$$= 4 \times {}^{10}P_3$$

$$= \boxed{}$$

$$= 4 \times 10 \times 9 \times 8$$

$$= \boxed{}$$

(b) One particular thing never occur:

The number of permutations = ${}^{(n-1)}P_r$

Putting $n = 11, r = 4$, we get the number of permutations = ${}^{(11-1)}P_4$

$$= {}^{10}P_4$$

$$= \frac{\boxed{}}{\boxed{}}$$

$$= 10 \times 9 \times 8 \times 7$$

$$= \boxed{}$$

ii) Prepare a bivariate frequency distribution for the following data, taking class intervals for X as 35-45, 45-55, ...etc.. and for Y as 115-130, 130-145, ... etc

(55,151), (36, 140), (72, 160), (38, 124), (65, 148), (46, 130), (58, 152), (50,149), (38,115), (42, 145), (41, 163), (47,161), (69, 159), (50, 161), (58, 131), (57, 136), (43, 141), (52, 164), (59, 161), (44,128), (35, 118), (62, 142), (67, 157), (70, 162)

X= Age in years : Min. (X)=35, Max. (X)=72.

Classes are, 35-45, 45-55, 55-65, 65-75

Y = Blood pressure, Min (Y) = 115, Max. (Y) = 164

Classes are 115-130, 130-145, 145-160, 160-175,

X \ Y	35-45	45-55	55-65	65-75	f_y
115-130	(4)	--	--	--	4
130-145	(2)	(1)	(3)	--	<input type="text"/>
145-160	(1)	(1)	<input type="text"/>	(3)	7
160-175	(1)	(2)	(2)	(2)	7
f_x	<input type="text"/>	4	<input type="text"/>	5	<input type="text"/>



PRAHLADRAI DALMIA LIONS COLLEGE OF COMMERCE & ECONOMICS

Sunder Nagar, S.V. Road Malad (w), Mumbai 400064

ISO 9001:2015 Certified

FYJC ANNUAL EXAMINATION EXAM MARCH 2023

2023	04	01	1400	(E)
HEALTH & PHYSICAL EDUCATION (30)				
TIME: 1 Hr.		(02 Pages)		Max. Marks: 25

Day-----07

SEAT NUMBER

--	--	--	--	--	--	--	--

Signature of Candidate

--

Signature of Invigilator

--

Marks Obtained

Signature of Examiner

--

--

Q.1 Choose the correct alternative and fill in the blanks:

(4)

- Yoga is one of the gifts that _____ has given to the world. (India, Pakistan, Nepal)
- Holding of the breath is _____. (Purak, Rechak, Retention)
- W.H.O has declared _____ to be a disease (Thickness, fattiness, Obesity)
- The food items consisting of these _____ types of test. (Six, Five, Two)

Q.2 Match the following:

(4)

A	B	Answer
a. P.T Usha	1. Cricket	A. _____
b. P.V Sindhu	2. Less than 18.5	B. _____
c. Underweight	3. Athlete	C. _____
d. Smriti Mandhana	4. Badminton	D. _____

Q.3 State the following statement are 'True' or 'False' :

(4)

- Sit ups or Crunches reduces abdominal Fat. 1. _____
- Body mass Index is measurement of weight with respect to the height. 2. _____
- There are Total 12 players in Cricket game. 3. _____
- Weight of the Shot-put (Women) is 4 kg. 4. _____

Q.4 Answer the following Questions in one sentence.

(4)

- a. Write any two outdoor game name?

Ans. _____

- b. Write any two names of Bone injuries.

Ans. _____

c. Write any two names of Asanas.

Ans. _____

d. Write the full form of S.R.P.F.

Ans. _____

Q.5 Answer the following question in short.

a. What are the side effect of doping?

Ans. _____

b. What do you mean by obesity?

Ans. _____

Q.6 Answer the following question in brief.

a. According to the theories of Panchamahabhut write the five components of food ?

Ans. _____

b. Write the importance of first aid.

Ans. _____



PRAHLADRAI DALMIA LIONS COLLEGE OF COMMERCE & ECONOMICS
Sunder Nagar, S.V. Road Malad (w), Mumbai 400064
ISO 9001:2015 Certified

Day-----02 SEAT NUMBER

--	--	--	--	--	--	--

2023	I	17	1430	(E)
ENGLISH (01)				
TIME: 2.30 Hrs.		(4 Pages)		Max. Marks: 50

SECTION-1:PROSE

(Reading for comprehension, Language Study, Summary and Mind Mapping)

Q.1 (A) Read the following passage and complete the activities given below: (06 Marks)

She opened the door for him but on the threshold they both stood still, for again footsteps could be heard approaching, this time from the far south.

'May be it's Tom,' said Mrs. Adis.

'There's more than one man there, and I can hear voices.'

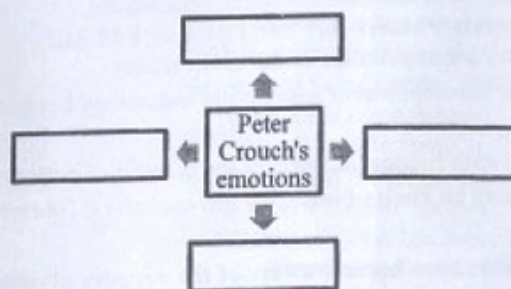
'You'd better go back,' she said shortly. 'Wait till they've passed, anyway.'

With an unwilling shrug he went back into the little dusty shed, which he had come to hate, and she locked the door upon him. The footsteps drew nearer. They came slowly and heavily this time. For a moment he thought they would pass also, but their momentary dulling was only the crossing of the strip of grass outside the door. The next minute there was a knock. It was not Tom, then.

Trembling with anxiety and curiosity, Peter Crouch put his eye to one of the numerous cracks in the door and looked through into the kitchen. He saw Mrs. Adis go to the cottage door, but before she could open it a man came in quickly and shut it behind him.

Crouch recognized Vidler, one of the keepers of Scotney Castle, and he felt his hands and feet grow leaden cold. They knew where he was then. They had followed him. They had guessed that he had taken refuge with Mrs. Adis. It was all up. He was not really hidden; there was no place for him to hide. Directly they opened the inner door they would see him. Why couldn't he think of things better? Why wasn't he cleverer at looking after himself - like other men? His legs suddenly refused to support him, and he sat down on the pile of sacks.

A.1 Complete the web and write down Peter Crouch's emotions as he hid in the shed. (2)



A 2. Give Reason: Peter Crouch did not leave Mrs. Adis's house. (2)

A 3. Guess: Peter Crouch repented for entering Mrs. Adis's cottage. Give its evidence. (2)

Q.1(B) Language Study

(4 Marks)

B1 Do as directed:

(3)

(i) Car drivers can be given an alternative route, when there is a traffic jam.

(Choose the correct alternative that indicates modal auxiliary showing 'Certainty')

(a) Car drivers may be given an alternative route, when there is a traffic jam.

(b) Car drivers should be given an alternative route, when there is a traffic jam.

(c) Car drivers must be given an alternative route, when there is a traffic jam.

(d) Car drivers will be given an alternative route, when there is a traffic jam.

(ii) You will never know unless you try.
(Choose the correct alternative to get 'If... Not' form of the given sentence.)

- (a) You will never know if you not try.
- (b) You will never know if you do not try.
- (c) If you never know you won't try.
- (d) You will have to try if you want to know.

(iii) These books have brought about very good changes in the lives of thousands of readers.
(Choose the correct alternative to rewrite the sentence beginning with 'Very good changes.....')

- (a) Very good changes in the lives of thousands of readers have been brought about by these books.
- (b) Very good changes these books have brought in the lives of thousands of people.
- (c) Very good changes in the lives of thousands of readers have brought by these books.

(1)

B2 Spot the error and rewrite the correct sentence.

There is not any substitute for hard work.

(06 Marks)

Q.2(A) Read the following extract and complete the activities given below:

It is true that progress in knowledge has led to the development of science and which has, in turn, profoundly altered our environment. For example, fertilizers and insecticides have increased agricultural output, which is required to feed the swelling population of the world. However, both give rise to pollution. Each one in the modern world has accumulated in our bodies a few milligrams of D.D.T., which is organo-chlorine, a type of insecticide. The DDT level in fish is rising and already some fish-eating birds are becoming sterile. Fertilizers used in farmlands are washed away by rain into rivers, lakes, and reservoirs. The heavy intake content of fertilizers leads to the wild growth of vegetation in them, which in turn deoxygenizes the waters, and as a result, all the fish is lost. Massive industrialization too has led to serious pollution of the environment. Millions of tons of smoke, sulphur gas, ash, and unknown quantities of toxic by-products are sent up every day all over the world and we simply do not know if our chemical environment is slowly poisoning us all. What is even worse, the increase in the carbon dioxide content of the atmosphere from burning oil and coal may, in time, prevent the escape of the sun's heat from the earth. Leading to a rise in the earth's temperature, the melting of ice caps, and a rise in the level of the ocean. The sea has become a cheap dumping ground for all kinds of waste products. Although the sea has a great capacity to break down all kinds of waste, this capacity is not unlimited, especially in shallow seas. Industrial effluent gets washed out to sea, for industries tend to concentrate in coastal areas in order to be able to dispose of unwanted waste cheaply. Atomic wastes as well as poison gases are dumped in the sea by industrial and military authorities.

It would be foolish to shut our eyes to the dangers of the pollution that human beings cause. It is true that more and more people have become aware of the dangers of pollution. Rivers are being gradually restored to health: International organizations are trying to keep the seas clean. Industries are being asked to pay large sums to meet the cost of disposing of effluents. Campaigns are being organised against cutting down trees. Public opinion is gradually being aroused to concern, and if all of us become concerned about our environment, we shall be able to keep the earth habitable for future generations.

A1 Read the following sentences and state whether they are TRUE or FALSE:

(2)

- (i) Excessive industrialization has led to serious pollution of the environment.
- (ii) Progress in knowledge has led to the development of science and technology but has kept the environment intact.
- (iii) Now a day's more and more people have become unaware of the dangers of pollution.
- (iv) Sea has a great capacity to break down all kinds of waste but this capacity is limited.

A2 Find out from the extract how people have become aware of the dangers of pollution and the measures that they are taking to control it.

(2)

A3 "It would be foolish to shut our eyes to the danger of pollution that human beings cause." Describe or state at least two steps that you would take to protect the environment of your area.

(2)

(B) Summary

Write a summary of the above extract with the help of the given clues and suggest a suitable title.

(3)

Increasing environmental pollution.... survival problem..... pollution result of.contamination of
..... human's need to control.

(C) Mind Mapping

Develop a 'Mind Mapping' frame or design on 'Organising a Birthday Party'.

(3)

SECTION II- POETRY

(Poetry and Appreciation)

Q.3. (A) Read the following extract and complete the activities given below:

(08 Marks)

Earth has not anything to show more fair:
Dull would he be of soul who could pass by
A sight so touching in its majesty:
This city now doth, like a garment, wear
The beauty of the morning; silent, bare,
Ships, towers, domes, theatres, and temples lie
Open unto the fields, and to the sky;
All bright and glittering in the smokeless air.
Never did sun more beautifully steep
In his first splendour, valley, rock, or hill;
Ne'er saw I, never felt, a calm, so deep!
The river glideth at his own sweet will:
Dear God! the very houses seem asleep;
And all that mighty heart is lying still!

A1. Pick any two correct alternatives from the options below:

(2)

- (i) Everyone appreciates the view from the bridge.
- (ii) The mornings are very chaotic.
- (iii) The sunrise creates a great impact on the surroundings.
- (iv) The residents miss the beautiful sight.

A2. 'Dull would he be of soul who could pass by

A sight touching in its majesty:'

Explain the poet's point of view in light of these lines.

(2)

A3. Write your experience when you felt revitalized in the company of the nature.

(2)

A4. Pick out two examples of the Figure of Speech 'Personification' from the given extract. (2)

Q.3(B) Appreciation:

(04 Marks)

Read the given extract and write an appreciation of the poem using the following points:

- About the poem, poet and title
- Theme
- Poetic devices/language/style
- Special features/ Novelties
- Message

There is another sky,
Ever serene and fair,
And there is another sunshine,
Though it be darkness there;
Never mind faded forests, Austin,
Never mind silent fields—
Here is a little forest,
Whose leaf is ever green;
Here is a brighter garden,
Where not a frost has been;
In its unfading flowers
I hear the bright bee hum:
Prithee, my brother,
Into my garden come!

SECTION III: WRITING SKILLS

Q.4 Complete the activities as per the instructions given below:

(08 Marks)

(A) Drafting Virtual Message:

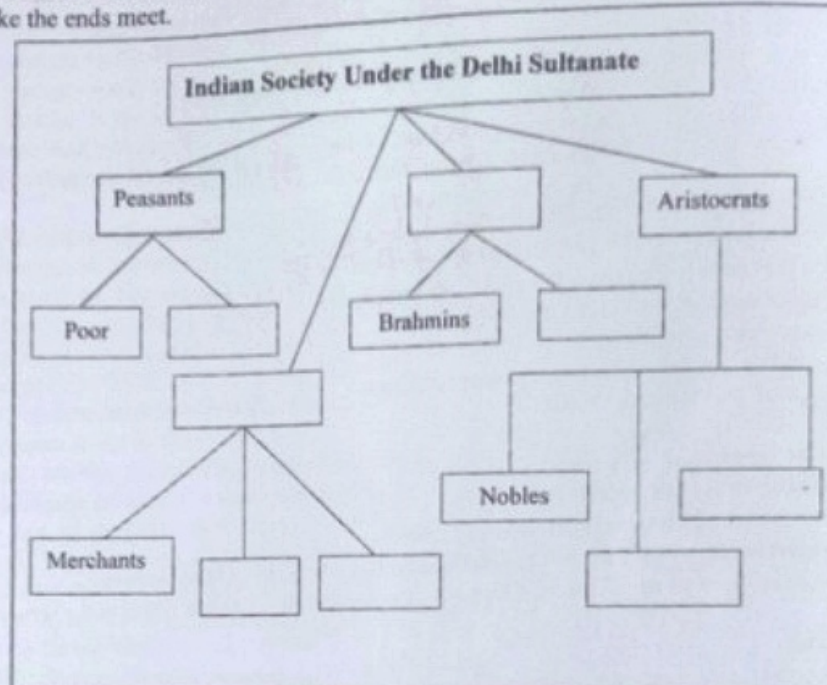
(4)

Using information given below, write a message which Mohit left for his brother Mohan. Do not add any new information. The message should not exceed more than 50 words.

Rajan called up—Self-written story reading competition—Occasion National Book Day and A P J Abdul Kalam birthday—Venue is City Library at Churchgate. Rajan will pick him up at 5.00 pm and they both will attend the programme together.

(B) Tree- Diagram:

Make a tree diagram of the given passage:
The Delhi Sultanate was an Islamic Empire based in Dehli that stretched over large parts of the Indian Subcontinent for 320 years(1206-1526).The Sultanate period classified the India into four social groups: the aristocrats, the priests, the townspeople, the peasants. The aristocrats were considered as ruling class and they were very powerful. It consisted of the nobles and the Hindu princes; the Sultan was the centre of power. The Brahmins among the Hindus and the Ulema among the Muslims looked after the religious matter. The townspeople were the merchants, traders and artisans who lived in the town and sold goods both within and outside the country. The peasants were poor and were forced to pay many taxes. They struggled hard to make the ends meet.



SECTION IV- LITERARY GENRE- DRAMA

Q.5 (A) Complete the given activities as per the instructions:

(4Marks)

(1) Fill in the blanks:

(2)

- (i) Drama has its origin in _____ theatre.
(ii) The early seeds of Modern Indian Drama can be found in the _____ drama.
(iii) A dramatist who experimented with Greek Tragedy _____.
(iv) In _____ characters thought process is expressed aloud.

(2) Match the Columns:

(2)

A	B
Flat Characters	Backbone of Drama
Exposition	Caricatures
Theme	Introduction
Conflict	Implicit/Explicit

(B) Answer in about 50 words to the questions based on One Act Play:

(4 Marks)

- (1) Draw a character sketch of ' Sergeant ' .
(2) Describe the setting of the play: ' The Rising of the Moon '.

(2)

(2)



PRAHLADRAI DALMIA LIONS COLLEGE OF COMMERCE & ECONOMICS

Sunder Nagar, S.V. Road Malad (w), Mumbai 400064

ISO 9001:2015 Certified

FYJC ANNUAL EXAMINATION MARCH-2023

Day-----05

SEAT NUMBER

--	--	--	--	--	--	--

2023	3	29	1400	(E)
MARATHI (02)				
TIME: 3.00 Hrs.		(5 Pages)		Max. Marks: 80

विभाग १: गद्य [२० गुण]

कृती १. अ) पुढील उताऱ्याच्या आधारे सूचनेनुसार कृती करा.

[८]

१. कृती करा.

(२)

(१) आजच्या काळात घराघरांतून
कानांवर पडणारी वाक्ये

(२) बिनचेहऱ्याच्या माणसांची संवाद साधने

(२)

--	--	--	--

संवादाचे 'मूल्य' तुडवणाऱ्या या काळात, संवेदनांचे निरोप समारंभ साजरे होऊ लागले. घर, शाळा, मंदिर ही समाजाची आशास्थान होती. पण या काळात घर म्हणजे चार घटकांचा निवारा, पुन्हा पोटाशी आकाशात उडून उडून थकून भागल्यावर टेकायला एक लॉज, एवढंच काय घर उरलं. वडील सहा-आठ महिने दौऱ्यावर. घरात आले, की सारखे फोनवर. आई कामावर घरी आली की, सिरियल बघण्यात मग्न! मुलं पळताहेत — या क्लासमधून त्या क्लासमध्ये प्रश्नपत्रिकांचे गट्टे सोडवत. संवाद कुठला, 'की भरायला पैसे हवेत,'

'हॉटेलमध्ये जाऊन 'पुष्कळ दिवसांत चायनीज खाल्लेलं नाही, 'गधक्या, इतके पैसे ओतलेत तरीही एटीनाईनच पसेंट?', 'न्यूयॉर्कची सीडी आणायची' हे किंवा या चेहऱ्याची वाक्यं! ह्याला संवाद म्हणता येत नाही, 'आत्म्याची साद असते, तोच संवाद! ती नसेल तर तो गोंगाटच!'

कृत्रिम पाऊस पाडण्याचा आटापिटा करावा, तथा प्रकारे काहीशी अगतिक झालेली माणसं कुठं ई-मेल, कुठं चॅटिंग, कुठं एसएमएस, कुठं फोनवरून बिनचेहऱ्याने बडबडत राहतात. बोटांनी बटणांचा खेळ म्हणजे संवाद नव्हे! त्याची सोबत होत नाही! साथ लाभत नाही! एक भरून उरलेलं एकाकीपण! रात्रीचा घट्ट दगड पहाटेपर्यंत न्यायचा बस... सकाळ झाली, की पाय पाठीला लावून पोटासाठी पळपळ पळायचं. कुठं पळतोय भान नाही. सतत चिंता... उद्या - उद्या - उद्याची! आज गेला खडक्यात. उद्या येत नाही. खड्डा खोल होत जातो. ही 'आज'ची भीषण स्थिती आहे. संगणकाच्या बोटांनी आयटीची कळ ऐटीत फिरवत भारताची अमेरिका करणारे आपणच. अन् पुन्हा अमेरिकेवर टीका करणारे आपणच. लौकिक प्रगती करणाऱ्या विज्ञानाचं कोडकौतुक करताना अलौकिक, चिरंतन आनंद देणाऱ्या या मातीच्या वारशाचं तेज लोपून कुठलं सुख मिळणार? मिळणार नाहीच, हेच त्रिवार सत्य आहे. मग 'खरं सुख' ते कोणतं हेही कळण्यापासून आपण इतके दूर जाऊ, की 'विनाश हाच विकास' हा नव्या जगाचा मंत्र होईल.

३) 'आत्म्याची साद असते, तोच संवाद! ती नसेल तर तो गोंगाटच!' हे विधान तुमच्या शब्दांत १० ते १२ ओळीत स्पष्ट करा.

(४)

किंवा

'सामाजिक संकेतस्थळांवरील संवाद' याविषयी तुमचे मत १० ते १२ ओळीत स्पष्ट करा.

[८]

कृती.१ ब) पुढील उताऱ्याच्या आधारे सूचनेनुसार कृती करा.

१. 'युद्ध आणि शांती' या कादंबरीसाठी तपशील
गोळा करण्याची साधने

(२)

--	--	--	--

२. पुढील शब्दांसाठी उताऱ्यात आलेल्या उपमा लिहा.

(२)

अ) 'युद्ध आणि शांती' ही कादंबरी : _____
आ) कादंबरीसाठी केलेला अभ्यास : _____

१८६३ च्या अखेरीस 'युद्ध आणि शांती' या कादंबरीच्या लेखनास सुरुवात झाली. प्रत्यक्ष लेखनास पुरी सहा वर्षे लागली. असंख्य व्यक्तिरेखा, अनेक लहान मोठ्या घटनांचा भव्य विस्तार, नेपोलियनची रशियावर स्वारी, युद्धातील चित्तधरारक प्रसंग, तत्कालीन खानदानी रशियन लोकांचे कौटुंबिक जीवन, सामान्य लोकांचे वैयक्तिक जीवन, लष्करी कारवाया, नृत्ये, मेजवानी, शिकारी इत्यादी असंख्य घटनांच्या तपशिलाने हे भव्य वाङ्मयीन शिल्प आकार घेऊ लागले. साहित्यक्षेत्रात ही कादंबरी म्हणजे 'न भूतो न भविष्यति !' अशा स्वरूपाचे कैलास लेणे आहे. "मानवी जीवनाचे संपूर्ण चित्रण, तत्कालीन रशियाचे प्रत्ययकारी वर्णन, तत्कालीन ऐतिहासिक महत्त्वाच्या घटना व मानवी संघर्ष यांचा संपूर्ण आलेख, आनंद-उदात्तता-यातना प्रत्ययकारी वर्णन, तत्कालीन ऐतिहासिक महत्त्वाच्या घटना व मानवी भावतरंगांचे जिवंत प्रत्ययकारी चित्रण म्हणजे 'युद्ध आणि शांती' ही अवमान- महत्त्वाकांक्षा इत्यादी नानाविध मानवी भावतरंगांचे जिवंत प्रत्ययकारी चित्रण म्हणजे 'युद्ध आणि शांती' ही कादंबरी", हा स्ट्रुक्चरसारख्या तज्ज्ञ टीकाकाराचा अभिप्राय म्हणजे या कादंबरीच्या शिफारशीचा एक ताघपटक! मोहरीएवढ्या विजापासून प्रचंड अश्वत्थ वृक्ष उभा राहावा तशी ही कादंबरी वाढत गेली. मूळचा आराखडा तीन वेळा बदलला. नावसुद्धा अर्थातच तीन वेळा बदलले. कित्येक व्यक्तिरेखांना मूळच्या आराखड्यात स्थान नव्हते. नंतर प्रवेश मिळाला. जे चित्रित करण्याचे प्रारंभी ठरवले होते, त्याहून कितीतरी वेगळी, कितीतरी श्रेष्ठ, उदात्त अशी कलाकृती हळूहळू तयार होत गेली. कादंबरीच्या उत्क्रांतीच्या पायऱ्यासुद्धा पाहण्यासारख्या आहेत. त्यांतून टॉलस्टॉयची लोकोत्तर कल्पनाशक्ती, संवेदनशीलता, अभ्यासू वृत्ती आणि घटनांचा नेमका वेध घेणारी अंतर्भेदी प्रतिभा दिसून येते. या कादंबरीत आलेली निसर्गवर्णने कादंबरीच्या पोतात इतकी एकरूप झालेली आहेत, की त्यांना वेगळे- तुटक असे अस्तित्व नाही. निसर्गवर्णने मुख्यतः व्यक्तिचित्रणाच्या पार्श्वभूमीवर येतात, त्यामुळे ती बांडमूळवजा वाटत नाहीत. उलट कादंबरीचा तो एक अविभाज्य घटक ठरतो. लढायांचे किंवा इतर घटनांचे वर्णनही त्यामुळे कादंबरीतील व्यक्तींवर जो परिणाम साधला असेल, ते सांगण्याच्या संदर्भात येते. त्यामुळे सर्व प्रसंगांना एक प्रकारचा जिवंतपणा, अपरिहार्यता आलेली आहे. वेगवेगळ्या पार्श्वभूमीवर वेगवेगळ्या ऐतिहासिक संदर्भात व्यक्तिमनाचा ठाव घेण्यात टॉलस्टॉयने जी मानवी उकल करून दाखवली आहे ती केवळ विस्मयावह म्हटली पाहिजे. या कादंबरीच्या लिखाणासाठी टॉलस्टॉयने जी मेहनत घेतली, जे अभ्यासाचे डोंगर पेलले, ते पाहून मनुष्य अक्षरशः अवाक् होतो. अगणित संदर्भ ग्रंथांचा त्याने सतत अभ्यास चालवला होता. ज्या जमिनीत कथावीज पेरायचे तिची खूप कसून नांगरणी चालली होती. अधिकृत इतिहास, रशियन व फ्रेंच इतिहासकारांनी लिहिलेला, त्या कालखंडाचा परामर्श घेताना एकाच घटनेतून दोन विरुद्ध पक्षांचे लोक कसा काय अर्थ काढतात त्याचे संबंध अन्वयार्थ त्याने समजावून घेतले. नेपोलियनविषयी प्रसिद्ध झालेले अपरंपार लिखाण, हे सारे काही त्याने अक्षरशः घुसळून काढले. १८६३ ते १८६९ या सहा वर्षांत मनाने तो नेपोलियनच्या काळातच जगत होता, असे म्हटल्यास हरकत नाही.

3. ' ज्या जमिनीत कथावीज पेरायचे तिची खूप कसून नांगरणी चालली होती ' या विधानाचा अर्थ स्पष्ट करा. (४)

कृती. १ क) पुढील उताऱ्याच्या आधारे सूचनेनुसार कृती करा. (२)

1. 'पाऊस अस्तित्वहीन होत नाही, याची कारणमीमांसा स्पष्ट करणारे वाक्य लिहा.
2. 'पिकं एकाकी होतात, 'यासाठी वापरलेली उपमा लिहा.

"पाऊस जसा येतो तसे त्याला जावेच लागते. तसा निरोपाचा क्षण प्रत्येकाच्या वाट्याला येतो. पण पावसासारखे अलवार निघून जाणे कुणालाच जमत नाही. नव्याने श्रीमंत झालेल्या रानाच्या आणि ओसंडून वाहणाऱ्या नद्यांच्या खाणाखुणा तो ठेवून जातो. देणाऱ्याने मागायचे नसते. तसे ते कुण्या देणाऱ्याला जमतही नाही, पण परतणाऱ्या पावसाला रानाने मागे वळून बघितले तर त्याची निर्मिती धुवून निघण्याचा त्याला शाप आहे. मागे वेळूची बने कितीही हळबी झाली तरी त्याने बघायचे नसते. असे निःसंग होऊन जाणे तसे पावसालाही कठीण जाते. माय मजुरीला जाताना घरातलं तान्हू केविलवाणं व्हावं तशी पिकं एकाकी होतात. वारा त्यांना जोजवीत असतानाच पाऊस परतीच्या बाटेला लागतो. पाऊस असा निघून जात असला तरीही तो अस्तित्वहीन होत नाही. निर्मितीचं देणं लाभलेली कुठलीच गोष्ट तशी पूर्णपणे पुसून टाकता येत नाही.

a. ' मी अनुभवलेला पाऊस ' या विषयावर सुमारे ८ ते १० ओळीत तुमचा अनुभव लिहा. (२)

विभाग २ : पद्य (गुण १६)

कृती २ अ) पुढील पद्यपंक्तींच्या आधारे सूचनेनुसार कृती करा. [८]

१. योग्य पर्याय निवडून वाक्ये पूर्ण करा. (२)

अ) विकट संकटांना कवीने म्हटले -

- i) पोटाशी घेणारे शब्द
- ii) निरुत्तर निखारे
- iii) धावून आलेले शब्द

आ) शब्दांचा उजेड म्हणजे -

- i) शब्दांचे मार्गदर्शन
- ii) शब्दांची मदत
- iii) शब्दांचा हल्ला

२. चौकटी पूर्ण करा. (२)

- i) आग घेऊन धावणारी -
- ii) शब्द कवितेचा संग्रह -

आकान्ताने हाका घातल्या माझ्या
तेव्हा तेव्हा शब्दच धावून आले,
माझ्या निरुत्तर निखाऱ्यांना
माउलीने घ्यावे तसे पोटाशी घेतले.

डोळ्यांपुढे अंधारून आले तेव्हा
शब्दांच्याच उजेडाने हात दिला,
एखादी आठवण आग घेऊन धावली

तेव्हाही शब्दांनीच हल्ला झेलला...
चिडून चिडून सांडत होते ऊन
तेव्हाही शब्दांनीच सावली धरली,
दिवसाही दाटायचा अंधार तेव्हा

शब्दांनीच हातात विजली दिली,
जगू न देणारे काही विसरायचे होते
तेव्हाही शब्दांनीच तोल सावरला,
मरणाच्या धारेत सापडलो तेव्हा
शब्दांनीच माझ्याकडे किनारा सरकवला.

३. 'मानवी जीवनातील शब्दांचे अनन्यसाधारण महत्त्व' तुमच्या शब्दांत लिहा. (४)
- कृती २. ब. खालीलपैकी कोणत्याही चार कृती सोडवा. [८]
- १) पुढील काव्यपंक्तीतील सरळ अर्थ ६ ते ८ ओळीत स्पष्ट करा.
१. खालील ओवींचा भावार्थ ६ ते ८ ओळीत तुमच्या शब्दात लिहा. (२)
माझा मराठाचि बोलु कौतुकें । परि अमृतातेंही पैजां जिंकें ।
ऐसीं अक्षरें रसिकें । मेळवीन ॥१॥
२. खालील ओव्यांतील भावसौंदर्य ६ ते ८ ओळीत स्पष्ट करा. (२)
एका रसाळपणाच्या लोभा । कीं श्रवणींचि होति जिभा ।
बोलें इंद्रियां लागे कळंभा । एकमेकां ॥३॥
३. खालील काव्यपंक्तीतून व्यक्तहोणारा अर्थ ६ ते ८ ओळीत तुमच्या शब्दांत लिहा. (२)
'दिवसाही दाटायचा अंधार तेव्हा, शब्दांनीच विजली दिली'
४. 'मी शब्दांत शिरलो आणि स्वतःला : वाचवले जहर मी प्यालो आणि शब्दांनी ते पचवले:'
या काव्यपंक्तीतील विचारसौंदर्य ६ ते ८ ओळीत स्पष्ट करा. (२)
५. खालील काव्यपंक्तीतील संकल्पना ६ ते ८ ओळीत स्पष्ट करा. (२)
मिळणाऱ्या स्वातंत्र्यासाठी सारे सहन करणे.

विभाग ३ : नाटक -साहित्यप्रकार परिचय [गुण १२]

- कृती ३. (१) पुढील उताऱ्याच्या आधारे सूचनांनुसार कृती करा : [६]
- (१) उत्तरे लिहा :
- (अ) भरतमुनींची दोन वैशिष्ट्ये : 1. _____ 2. _____ (१)
- (आ) नाटक आणि अभिनेता यांतील संबंध : 1. _____ 2. _____ (१)
- (आ) नाटकाच्या प्रयोगाची सफलता अवलंबून असणारे घटक : (२)
1. _____ 2. _____ 3. _____ 4. _____

नाटक म्हणजे ..

लेखकाने लिहिलेले नाटक हे कलाकारांनी सादर करायचे असते. चित्र किंवा शिल्प हे घडताच दिसू लागते; पण नाटक हे प्रत्येक वेळी करून दाखवावे लागते. नाटक हे दृक्-श्राव्य असल्याने ते लिहिणारे, त्याचा प्रयोग करणारे, प्रत्यक्ष अभिनय करणारे, तंत्रज्ञ आणि तो प्रयोग पाहणारे अशा सगळ्यांच्या समन्वयावर आणि सहकार्यावर नाटकाच्या प्रयोगाची सफलता अवलंबून असते. नाटक हा कथा, कादंबरी, कविता याप्रमाणे एक साहित्यप्रकार आहे. त्यामध्ये अभिनेता किंवा अभिनेत्री अभिनय करत असतात. लेखकाने लिहिलेले संवाद अभिनेत्यांमार्फत प्रेक्षकांपर्यंत पोहोचवले जातात. मुळात नाटक हा 'दृक्-श्राव्य' साहित्यप्रकार आहे. ते ऐकता, पाहता व वाचता येते. श्रव्यवाचनातून अन्य साहित्यप्रकारांप्रमाणे आपल्याला नाटकाचा आनंद घेता येतो. नाटक रंगमंचावर सादर करता ते. भारतात प्राचीन काळापासून नाट्यकला अस्तित्वात होती. भरतमुनी यांना 'भारतीय नाट्यकलेचे जनक' असे श्रुतात. नाटकाविषयी सखोल माहिती करून देणारा 'नाट्यशास्त्र' हा ग्रंथ त्यांनी लिहिला. त्यांच्या मते, 'नाटक हे मानवी जीवनातील निरनिराळ्या अवस्थांचे, घटनांचे, प्रसंगांचे, त्यांतील वेगवेगळ्या भाव-भावनांचे. वृत्ती-प्रवृत्तींचे व कव्यवहारांचे अनुकरण करणारे चित्रण आहे.

मानवी जीवनात अवतीभवती घडणाऱ्या अनेक नाट्यमय प्रसंगांतून, घटनांमधून, जाणवणाऱ्या माणसामाणसांतील ॥- अवगुणांमधून त्यांच्यातील भावनांची आंदोलने, वास्तवाधारित परंतु काल्पनिक कथानकात गुंफून, ते उत्तम सदलेखनातून दिग्दर्शकाच्या मार्गदर्शनाखाली, कलाकारांच्या अभिनयाद्वारे, तंत्रज्ञानाच्या साहाय्याने रंगमंचावर कांसमोर सादर करणे म्हणजे 'नाटक' होय.' नाटक हा लेखक, दिग्दर्शक, कलाकार, तंत्रज्ञ यांच्या साहाय्याने

रंगभूमीवर सादर होणारा आणि त्याचप्रमाणे नाट्यगृहात समूहाने एकत्रितरीत्या आस्वाद घेता येईल असा कलाप्रकार आहे. नाटक हे जीवनाचे चित्र असते आणि ते कलाकाराच्या माध्यमातून सादर केले जाते. डोळ्यांनी पाहिले आणि कानांनी ऐकायचे म्हणून ही दृक्-श्राव्य कला आहे. नाटक हे सांघिक कार्य आहे.

2. 'नाटक म्हणजे सांघिक कलाविष्कार आहे.' या विधानासंबंधी तुमचे मत ०६ ते ०८ ओळीत सोदाहरण स्पष्ट करा. (२)

किंवा

1. नाटक हा समाजाचे यथायोग्य दर्शन घडवणारा प्रयोगक्षम साहित्यप्रकार आहे, 'या विधानाचा अर्थ स्पष्ट करा. (६)

(२) पुढीलपैकी कोणत्याही तीन कृती सोडवा :

(१) 'ध्यानीमनी' या नाटकातील शानूचे वागणे योग्य वा अयोग्य ते सकारण ०६ ते ०८ ओळीत तुमच्या शब्दांत मांडा. (२)

(२) 'सुंदर मी होणार' मधील 'सुंदर' या शब्दाचा तुम्हाला समजलेला अर्थ ०६ ते ०८ ओळीत तुमच्या शब्दांत स्पष्ट करा. (२)

(३) गायक नट कृष्णरावांच्या संवादातून स्पष्ट झालेली त्यांच्या पत्नीची स्वभाववैशिष्ट्ये ०६ ते ०८ ओळीत स्पष्ट करा. (२)

(४) 'सुंदर मी होणार' वा नाट्यउताऱ्याच्या आधारे 'ममी' ही भूमिका ०६ ते ०८ ओळीत तुमच्या शब्दांत स्पष्ट करा. (२)

विभाग ४ : उपयोजित मराठी [गुण १८]

कृती ४. पुढीलपैकी कोणत्याही तीन कृती सोडवा :

(१) पुढील मुद्द्यांच्या आधारे 'रेडिओजॉकी' ही संकल्पना १२ ते १५ ओळीत स्पष्ट करा. (६)

रेडिओजॉकी म्हणजे - डिस्कजॉकी - रेडिओ जॉकीचे कार्यस्वरूप - 'स्व'ची ओळख - कामासाठी आवश्यक असणारी कौशल्ये - विविध क्लृप्त्या - रेडिओजॉकी आणि रसिक यांच्यातील संबंध. (६)

(२) पुढीलपैकी कोणत्याही एका विषयावर १२ ते १५ ओळीत ब्लॉग लेखन करा.

(अ) मैत्री तंत्रज्ञानाशी.

(आ) महाविद्यालयातील पहिला दिवस

(३) पुढील मुद्द्यांच्या आधारे 'मौखिक अनुवादकाची कार्यक्षेत्रे' सुमारे १२ ते १५ ओळीत विशद करा. (६)

मौखिक अनुवाद म्हणजे - दुभाषकाच्या संधी - पर्यटन सेवा - समूह दूरभाष - संगणकाचा वापर - नैपुण्ययुक्त अनुवाद - समूह संवोधन अनुवाद - गुगल ट्रान्सलेटर. (६)

(४) खालील तक्त्यात मुद्रितशोधनाच्या खुणा भरून घेणेचा अर्थ लिहा .

अ.क्र.	शब्द	खूण	खुणेचा अर्थ
१	आशिर्वाद		
२	पाहिज		
३	सार्वजनिक		
४	ती शाळेत गेली		
५	मराठी गुगम		
६	तो काय म्हणाला		

विभाग ५ व्याकरण : [गुण १४]

कृती ५ पुढीलपैकी कोणत्याही ७ कृती सोडवा. (२)

अ) खालील वाक्यातील शब्दशक्तीचा प्रकार ओळखून लिहा.

१. 'अखेर येते निरोप घेऊन निवांत मार्गात ते कंकाज'

य) अभिधा र) लक्षणा ख) व्यंजना

२. 'आपल्याभोवती वायव्येच्या कोल्ह्यापासून दूरच राहावे' या वाक्यातील 'कोल्हा' या शब्दातून व्यक्त होणारा लक्ष्यार्थ ..

अ) जंगलाती धूर्त प्राणी आ) मळवातील मका खाणारा इ) धूर्त माणसे

आ) खालील काव्यपंक्तीतील काव्यगुण ओळखून लिहा.

(२)

१. नानपोपटी कवळी पावे
लवलवणारी जिथे - तिथे
हिरवे पिवळे रंग त्यामध्ये
केशर सांठे कुठे - कुठे
य) प्रसाद र) ओज ल) माधुर्य

२. खरा तो एकचि धर्म

जगाला प्रेम अपवि

य) माधुर्य र) प्रसाद ल) ओज

आ) खालील वाक्यांपुढील सूचनेप्रमाणे कृती करा.

(२)

१. कृतिपत्रिका सोपी असते. कृतिपत्रिका अवघड असते. ती सोडवावी लागते. (संयुक्त वाक्य करा)

२. मला रेल्वेचे निश्चित आरक्षण मिळाले, की मी दिल्लीला जाईन. (वाक्यप्रकार ओळखून लिहा.)

ई) खालील वाक्यांपुढील सूचनेप्रमाणे कृती करा.

(२)

१. रस्त्याच्या डाव्या बाजूने चालावे. (साधा वर्तमानकाळ करा)

साधा वर्तमानकाळ -

२. एका गावात एक उत्तम चित्रकार राहत होता. (काळ ओळखून लिहा.)

य) रीतिभूतकाळ र) रीतिवर्तमानकाळ ल) रीतिभविष्यकाळ

उ) शब्दभेद स्पष्ट करणारी चौकट लिहून पूर्ण करा.

(२)

	शब्द	अर्थ	वाक्यात उपयोग
१	पाणी		
२	पाणि		

ऊ) खालील (दिलेल्या पर्यायातून योग्य पर्याय निवडून लिहा.

(२)

१. य) वळूनवळून र) अभिवाचन ल) सामाजिक य) पुटपुट
उपसर्गघटित शब्द -

२. (य) रेनकोटविनकोट र) लाललाल ल) दुकानदार य) आंबटचिंबट
प्रत्ययघटित शब्द -

झ) खालील शब्दघटांतून विशेषण - विशेष्य निवडून लिहा.

(२)

शब्दघट -) कडूगोड , आठवणी , असहकार , वेळ)

	विशेषण	विशेष्य
१.		
२.		

ए) खालील शब्दसमूहासाठी एक शब्द लिहा.

(२)

१. तत्त्व प्रस्थापित करणारा ---

२. सत्ताचा आग्रह धरणारा -----

इ) खालील अशोरेक्षित शब्दांचे विशदर्थी शब्द लिहून अर्थबदल न करता खालील वाक्ये पुन्हा लिहा.

(२)

१. माणसा - . माणसांत संवाद . हवा _____

२. मनुष्य हा प्रेमाच्या आधारावर जगू शकतो . _____



PRAHLADRAI DALMIA LIONS COLLEGE OF COMMERCE & ECONOMICS
Sunder Nagar, S.V. Road Malad (w), Mumbai 400064
ISO 9001:2015 Certified

FYJC ANNUAL EXAMINATION MARCH-2023

Day 05

SEAT NUMBER

2023	3	29	1400	(F)
FRENCH (13)				
TIME: 3.00 Hrs.		(3 Pages)		Max. Marks: 80

Q1) A. Répondez aux questions en français (5 ou choix)

- Nommez deux musées à Paris.
- Nommez deux moyens de transport en commun dans ta ville.
- Quels sont vos loisirs?
- Combien de jours y a-t-il en Février ?
- De quelle Couleur est ton sac?
- Quelle est la profession de Votre mère?
- Donnez deux adjectifs pour votre meilleure amie.

10

Q1) B. Choisissez la bonne réponse

- Vanessa Paradis est une _____
a. Actrice b. Réalisatrice c. Écrivaine
- _____ est un pays francophone.
a. L' Inde b. La Tunisie c. L'Angleterre
- Le jour avant Samedi est _____
a. Vendredi b. Dimanche c. Lundi
- _____ est pour les étudiants de 11ans à 15ans.
a. Lycée b. Université c. Collège
- On célèbre la fête de Noël _____
a. En hiver b. En automne c. En été

5

Q2) Grammaire

A. Conjuguez les verbes au Présent.

- Je ne _____ (venir) pas à la cérémonie.
- Nous _____ (envoyer) les résultats par la poste.
- Vous _____ (pouvoir) venir vous voir demain si tu veux.
- L'année prochaine, elle _____ (apprendre) le japonais.
- Les étudiants _____ (manger) à la cantine.

8

B. Conjuguez les verbes à l' Impératif

- _____ de la patience, mes enfants! (Avoir)
- _____ calme, Paul! (Être)
- _____ à la piscine avec nos cousins! (Aller)

B. Remplacez les Pronoms personnels

- Qui aimes-tu? La glace.
- Rucha et toi, nous allons au cinéma .
- Ce sont vos voisins.
- Ils mangent du pain avec beurre.
- Les enfants vont à l'école.

5

- C. Complétez avec les adjectifs
- _____ planète est menacée. Nous agissons ensemble sauver _____ planète. (adjectif possessif)
 - Il a trouvé un pot sous _____ arbre. (adjectif démonstratif)
 - _____ chambre a deux portes? (l'adjectif interrogatif)
 - _____ cadeau préfères-tu? (l'adjectif interrogatif)
 - Le ciel est _____ (adjectif qualificatif)

D. Faites comme indique

2

A. Mettez au pluriel.

- Il parle au directeur.
- Le Sénégalais aime jouer au foot.

2

B. Mettez au féminin.

- Leur père est informaticien.
- Ce garçon à gauche est mon cousin .

1

C. Mettez au négatif

- Il va chez le dentiste.

1

D. Mettez au interrogatif.

- Les monuments sont magnifiques.

2

E. Complétez avec les mots interrogatifs .

- _____ est la maison?
- _____ cours y a-t-il par jour?

2

F. Complétez avec la forme correcte des prépositions.

- Je suis _____ ma nouvelle maison.
- La cantine est _____ l'amphithéâtre.

Q3) Vocabulaire

4

A. Complétez les phrases.

- Le 14 juillet est _____.
- L'emblème de la France est _____.
- 96° = _____
- 888 = _____

2

B. Que dites-vous.

- Neel greets a group of friends - _____
- The teacher enters the class the students wish - _____

2

C. Reliez les colonnes.

A	B
1. Le Portugal	A. Indien
2. L' Inde	B. Chinois
3. L' Italie	C. Portugais
4. La Chine	D. Italien

D. Faites comme indique. (2 ou choix)

2

- Reconstituez les phrases

A. Est/ le/ garçon/ adorable/ petit

- Contraire

A. Laide

- Chassez l'intrus

A. Crayon, yeux, cheveux, nez

Q4) Compréhension.

8

Vous êtes en France et vous recevez ce courriel.

De: lucie.rousset@laposte.fr

À: fatimah.bakar@gmail.com

Envoyé Mercredi 8 juillet 2020 19:05:32

Objet: Invitation au pique-nique

Salut Fatimah,

Comment vas-tu ? Tu as bien profite tes vacances? Tu sais que les vacances terminent bientôt. J'aimerais bien te voir avant la rentrée universitaire ! C'est parce que je vais déménager le 10 août avec ma famille à Marseille et malheureusement, Je ne vais pas continuer mes études à Besançon. D'après la meteo, il y'a du soleil et il va faire beau toute la semaine. Je te propose donc d'aller au pique-nique au Parc Micaud vers 16h, un jour après la Fête Nationale. Je vais inviter les autres également (Chen Li, Jean, Marion et Léa). Réponds-moi pour confirmer ta présence. Je t'embrasse bien fort et je t'attends to reponse!

Lucie

- A. À qui écrit Lucie ?
- B. Qu'est-ce qu'elle propose comme activité ?
- C. A quelle heure elle propose de retrouver ?
- D. Elle lui écrit pour
 - a. l'inviter à sa fête d'anniversaire
 - b. l'inviter au pique-nique
 - c. l'inviter à une soirée
- E. Lucie propose de retrouver le
 - a. 14 juillet
 - b. 15 juillet
 - c. 16 juillet
- F. Elle propose de retrouver où?
 - a. À Besançon
 - b. À Marseille
 - c. Au Parc Micaud
- G. Qui écrit le courriel?
- H. Qu'est l'objet d'écrire le courriel?

Q5) A. Traduisez en anglais.

6

Les loisirs préférés des Français

Les gens qui travaillent toute la semaine préfèrent rester à la maison pendant le week-end. Ils aiment bien écouter de la musique, regarder un film à la télévision ou sur Netflix. Ils utilisent le temps pour laver leur voiture et travailler dans le jardin. Les jeunes aiment beaucoup sortir. Ils passent beaucoup de temps aux cafés avec leurs amis. Ils vont souvent au cinéma; ils vont également [also] au musée, au théâtre et au concert de musique. Les loisirs jouent un rôle important dans le processus du développement des jeunes. L'ordinateur prend une place de plus en plus importante dans la vie des jeunes. Ils utilisent l'ordinateur pour surfer sur internet, pour tenir un blog et poster leurs photos. C'est leur moyen de rester en contact avec le monde.

Q5) B. Traduisez en français.

6

1. We are leaving for France today.
2. I play the guitar on weekends.
3. Let us buy this bracelet for our mother.

Q6) Mettez le dialogue en bon ordre

6

- Non, non. Continuez tout droit et puis prenez la deuxième rue à gauche.
- Oui monsieur. Bonne idée Au revoir !
- Ah! D'abord, allez tout droit. Au carrefour, tournez à droite.
- C'est compliqué. Je prends un taxi.
- Pardon madame. Je cherche la Bibliothèque Nationale.
- Et on arrive à la bibliothèque ?



PRAHLADRAI DALMIA LIONS COLLEGE OF COMMERCE & ECONOMICS

Sunder Nagar, S.V. Road Malad (w), Mumbai 400064

ISO 9001:2015 Certified

FYJC ANNUAL EXAMINATION MARCH-2023

Day-----05

SEAT NUMBER

--	--	--	--	--	--	--	--

2023

3

29

1400

(E)

INFORMATION TECHNOLOGY (99)

TIME: 2.30 Hrs.

(3 Pages)

Max. Marks: 80

Q1. Fill in the Blanks

10 Marks

1. The _____ unit helps user to enter data and commands into computer system
2. IRC stands for _____
3. In RDBMS _____ ensures that all operation within the work unit are completed successfully
4. The _____ language is for manipulating and retrieve data in a relational database
5. The group of one or more coloums used to uniquely identify each row of a relation is called _____
6. _____ is the collection of inter related data.
7. _____ data type hold time in DBMS
8. _____ tag displays text in the smallest heading level.
9. _____ attribute specify the path of an image file
10. _____ is the shortcut key for copy.

Q2. State True or False

10 Marks

1. ALU can perform logical functions like comparison of data
2. A group of 4 bits is called byte
3. Data security means unauthorized users cant access data
4. There are 6 type of relationship in relational database design
5. Firewall is combination of both software and hardware
6. Hacking back account related information is an example of software piracy
7. <HR> is an Empty Tag.
8. Alert() function displays alert popup box with ok button.
9. Phishing is typically carried out by email spoofing.
10. The web address begins with http:// means it is the sign of Secure website.

Q3. Multiple Choice Single answer

10 Marks

1. _____ is the most consistent security model.
a. SSL b. DLL c. DCL d. SIL
2. _____ is a method of converting the original message into cipher text.
a. Encryption b. Decryption c. Code d. Inscribe
3. _____ is presenting someone else's work or idea as your won without their consent.
a. Unauthorized access b. plagiarism c. Copy write violation d. Cracking
4. _____ is used to create text with multiple lines.
a. <Text> b. <textarea> c. <h1> d.

5. _____ is a valid built-in function in JavaScript
 a. goto() b. ParseInt() c. Document() d. Sorting()
6. In JavaScript single line comment begin with _____
 a. / b. \ c. // d. /*
7. _____ command remove access rights or privileges on the database object.
 a. Select b. Grant c. Revoke d. update
8. _____ is used to delete a database in DBMS
 a. Delete b. Drop c. Remove d. install
9. _____ is also called as a Tuple.
 a. Record b. Field c. colum d. Cell
10. 1 petabyte is = _____
 a. Terabyte b. Exabyte c. Megabyte d. byte

Q4 Multiple choice two correct answers

20Marks

1. _____ and _____ are decision making statements in JavaScript
 a. Looping b. Calculating c. If Statement d. If else statement e. while
2. Types of comments in JavaScript are _____ and _____
 a. Single Line Comment 2. Two Line Comment 3. Three Line Comment d. Multiple Line Comment e. No comment
3. Methos attributes of <Form> tag has _____ and _____ value
 a. GET b. POST c. Action d. URL e. TCP/IP
4. Hyperlink can be created in two ways , they are _____ & _____
 a. Text Hyperlink b. Para Hyperlink c. Image Hyperlink d. Row Hyperlink e. Colum Hyperlink
5. in relationship that exist between to relational database table when one table has _____ key f
 and that is used as a reference to the _____ key of another table
 a. Private b. Public c. Primary d. Foreign e. Encrypted
6. Text has _____ & _____ data type
 a. Character b. String. C. Char d. Varchar e. Decimal
7. IT Act 2000 was amended in the year _____ and _____
 a. 2008 b.2009 c. 2010 d. 2011 e. 2012
8. _____ & _____ are DBMS software
 a. Photoshop b. MySQL c. XML d. Oracle e. Windows
9. Computer crime is alternatively referred as _____, _____ crime
 a. Cyber Crime b. Civil Crime c. E-crime d. software crime e. Normal Crime
10. _____ and _____ are valid increment Statement in JavaScript.
 a. ++A b. -- A c. A++ d. >A e. <A

Q5. Multiple choice three correct answers

6Marks

1. _____, _____ and _____ are the data type used in JavaScript
 a. String type b. Condition type c. Method type d. Boolean type e. Infinity
2. The DBMS provides users and programmers with systematic way to _____ ,

_____ and _____ data.
a. Inform b. Creates c. Update d. Message e. Manage.

Q6. Match the following

4Marks

- | | |
|---------------------|--------------------------------------|
| a. Cyber Law | a. Secondary Memory |
| b. RAM | b. DOS |
| c. Primary Key | c. White Hackers |
| d. Operating System | d. Field |
| | e. SQL |
| | f. Uniquely identify each row. |
| | g. Primary Memory |
| | h. deals with internet, cyber space. |

Q.7 Answer briefly (Any 5)

10Marks

a. Read the following and answer the questions:

Debesh downloads a game from the internet. But soon he found that it was a trial version and it would work only for 8 days. He has a very good friend named Ashok, who is a computer programmer. Debesh asked him to remove those 8 days trial period lock. Ashok created software to decipher the code.

i. Does Debesh think ethically?

ii. Which cybercrime both are committing if they decipher the code.

b. Write any 4 advantages of DBMS.

c. What is WAN and its 2 advantages and 2 disadvantages of its.

d. What is copywrite violation

k e. What is ethics and morals

y f. What is one to one relationship in DBMS

g. Write 4 properties of transaction.

h. Different between Data and Information

(A) Write HTML Program

5Marks

i) Write a HTML program using following specification.

1. Background color should be yellow.
2. Heading should be larger in size 'P.D.Lions College of Comm. & Eco.'
3. Your name in bold & standard in underline

Or

j) Write a HTML program using following specification.

1. Heading should be larger in size 'FYJC Time Table' & center of the page
2. Table background should be skyblue

B) Write Program in JavaScript

5Marks

I) Write a JavaScript program to input a number and check it is a even number or odd number

Or

II) Write a JavaScript program to enter radius of a circle and find out its area ($\text{Area} = 3.14 * r^2$)



PRAHLADRAI DALMIA LIONS COLLEGE OF COMMERCE & ECONOMICS
Sunder Nagar, S.V. Road Malad (w), Mumbai 400064
ISO 9001:2015 Certified

FYJC ANNUAL EXAMINATION MARCH-2023

Day-----01 SEAT NUMBER

--	--	--	--	--	--	--	--

2023	3	23	1330		(E)
ORGANISATION OF COMMERCE & MANAGEMENT (51)					
TIME: 3.00 Hrs.		(2 Pages)		Max. Marks: 80	

Q.1 Select the correct option and rewrite the sentence.

(Marks 5)

1. _____ is known as a Self Service store.
a. Departmental b. Supermarket c. Industry
2. Raw Material is converted into finished product by _____ industry.
a. Genetic b. Extractive c. Manufacturing
3. The members of Hindu Undivided Family business are called _____.
a. Carpenter b. Co-parceners c. Parceners
4. Changes in ruling Government is an aspect of _____ environment.
a. Technological b. Legal c. Political
5. Management uses _____ method of observation.
a. unscientific b. artificial c. scientific

B. Match the following pairs.

(Marks 5)

- | | |
|---|---|
| 1. Peddlers
2. Private Company
3. Micro-manufacturing Sector
4. Top level Management
5. New Economic Policy | a. 2006
b. Policy Framing
c. 1991
d. Carry Goods on Head
e. Minimum 2
f. Minimum 7
g. Carry Goods on Cart
h. Does not exceed Rs.25 lakhs
i. Administration
j. Does not exceed Rs.1 lakh. |
|---|---|

C. Rewrite and give one word or phrase for the following.

(Marks 5)

1. An economic activity done for earning profit.
2. Trader who keeps large stock of goods.
3. An private sector organisation which can raise huge amount of Capital.
4. Apex institution for agricultural Finance.
5. Controllable factors of Business Environment.

D. Arrange in proper order.

(Marks 5)

1. International Market, State Market, National Market, Local Market.
2. Retailer, Producer, Wholesaler, Consumer.
3. Business proposal, Selection of place, Selection of technology, Selection of Product.
4. Board of directors, Managing Director, Shareholders, Purchase Manager.
5. Bill of Entry, Receipt of Documents, Delivery order, Customs Clearance.

Q.2 Explain the following term/concepts. (Any 4)

1. Profession
2. One Price Shop
4. Udyami Mitra
5. Lower Level Management

(Marks 5)
3. Home Trade
6. Social Environment

Q.3 Study the following Case/situation and express your opinion. (Any 2)

(A) Mr. Raghunath is running business from last 30 years. This business is ancestral business of Mr. Raghunath. Kiran and Naman, two sons of Mr. Raghunath is helping him along with their wife.

1. Find out the type of business.
2. Who is Raghunath?
3. What Kiran and Naman are called?

(B) While working in a company, Pranav used to give orders to his subordinates about what is to be done and which work is to be done. In this organization, various employees like Pratap are doing their work assigned by Pravin. In this company, Pravin submits his report of work completion to Pranav after completing the work done by the employees like Pratap.

1. Identify different levels of management in the above mentioned company.
2. Find the level of Pranav in management of the company.
3. Explain the functions and role of Pratap in his company.

(C) Anurag is selling goods to Japan. Kavita is buying goods from the USA whereas Ganesh is buying raw material from South Africa and after processing it sells finished goods to Malaysia.

1. Who is an exporter?
2. Who is the importer?
3. What is Entrepot Trade?

Q.4 Distinguish Between. (Any 3)

1. Industry and Commerce
2. Top Level Management and Middle Level Management
3. Departmental Organisation and Statutory Corporations
4. Joint Hindu Family Firm and Joint Stock Company

(Marks 12)

Q.5 Answer in Brief. (Any 2)

1. State any Four Features of Sole Trading Concern.
2. State any Four Merits of Multinational Corporations.
3. State any Four Problems faced by Small Scale Industry.

(Marks 8)

Q.6 Justify the following statement. (Any 2)

1. Transport creates place utility.
2. Management is an art.
3. The main objective of co-operative society is to provide services to its members.
4. Chain Stores sell a limited range of goods.

(Marks 8)

Q.7 Attempt the following. (Any 2)

1. Explain the features of Government Company.
2. Write the features of Women's Self Help Group.
3. What are the main features of Retailers

(Marks 10)

Q.8 Answer the following. (Any 1)

1. What is Management? State the characteristics of Management?

OR

2. Define Business and Explain its features.

(Marks 8)



PRAHLADRAI DALMIA LIONS COLLEGE OF COMMERCE & ECONOMICS

Sunder Nagar, S.V. Road Malad (w), Mumbai 400064

ISO 9001:2015 Certified

FYJC ANNUAL EXAMINATION MARCH-2023

Day-----03

SEAT NUMBER

--	--	--	--	--	--	--	--

2023

3

27

1400

(E)

ECONOMICS (49)

TIME: 3.00 Hrs.

(3 Pages)

Max. Marks: 80

Q.1 A) Choose the correct option from following.

(5)

- 1) Statements true for planning commission
 - a) Planning commission was established in 1950
 - b) The P.M. is Ex-officio chairman of planning commission.
 - c) Economic planning is time bound programme.
 - d) Economic planning is based on pre-determined objective.

Options: 1) a and b

2) a, b, c and d

3) a and c

4) None of these

2) At present, the number of industries required license

a) 3

b) 5.

c) 4

d) 2

Options: 1) only a

2) a and b

3) None of these

4) only c

3) On an average, the per capita daily calorie requirement amount is

a) 2250

b) 2500

c) 2100

d) 2400

Options: 1) only a

2) a and b

3) only c.

4) only d

4) Person working for less than _____ hours per week is called as unemployed.

a) 15

b) 14.

c) 28.

d) 24

Options: 1) only a

2) only b

3) only c

4) only d

5) Incorrect reasons for population explosion in India.

a) Illiteracy.

b) Universalisation of marriage

c) Joint family system

d) Upliftment in life style

Options: 1) a and b

2) c and d

3) a, b and c

4) only d

B) Complete the correlation:

(5)

1) _____: Seasonal unemployment: Urban unemployment:: Industrial unemployment

2) Consumption expenditure in rural area: 32 rupees per day:: Consumption expenditure in urban area: _____ rupees per day

3) Second stage of demography: High growth of population:: Low or stable population: _____

4) Miniratna companies: 2002:: Maharatna companies: _____

5) Planning commission: 1950 :: NITI Aayog : _____

C) Find the odd word out.

(5)

1) Navratna status companies:

SPCL, IOC, ONGC, HPCL

2) Planning commission consists with:
A chairperson, full time members, a member secretary, part time members.

3) High poverty ratio:
Chhattisgarh, Jharkhand, Bihar, Kerala

4) State with high rate of unemployment:
Goa, Punjab, Maharashtra, Tripura

5) Causes of low death rate:
Fall in maternal mortality, fall in infant mortality, fall in literacy, and improve in medical

(5)

D) Give economic terms:

- 1) Difference between birth rate and Death rate.
- 2) It is a type of self-unemployment where a person is fit for work but not willing to work.
- 3) Poverty that can be completely eradicated.
- 4) Conscious and deliberate choice of economic priorities by some public authority.
- 5) Integration of domestic economy with world economy.

(06)

Q.2A) Identify and explain the following (Any3).

- 1) Sayali's mother maintains a book of accounts for household purpose and plans the expenditure accordingly.
- 2) Integration of domestic economy with world economy.
- 3) Dhanajirao is a wealthy landlord, but his annual income is relatively less in comparison to entrepreneur Raibahadur
- 4) Satish has completed his post-graduation and is desperately expecting a job.
- 5) For a certain period of time China had adopted the policy of 'One child per family'.

(06)

B) Distinguish between (Any3)

- 1) Educated unemployment and Technological unemployment
- 2) Absolute poverty and Relative poverty
- 3) Birth rate and Death rate
- 4) NITI Aayog and planning commission
- 5) Privatisation and Globalisation

2.3) Write the answer of following (Any3)

(12)

- 1) Explain the any four causes of high birth rate
- 2) Measures taken for privatisation
- 3) Types of rural unemployment
- 4) Explain the different types of poverty.
- 5) Explain the main objectives of Economic Policy of 1991.

4) State with reasons whether you agree or disagree with following statement (Any 3)

(12)

- 1) Death rate is falling rapidly in India.
- 2) Educated unemployment is a part of rural unemployment.
- 3) Relative poverty is universal in nature.
- 4) Indian Oil Corporation is one of the public sector units among 'Navratnas'
- 5) State government have more significant role to play under NITI Aayog

5) A) Write the answer from passage/ Figure/ table (Any 2)

(8)

The finance minister of the central government presents the union budget before the parliament during the month of February every year. The budget also referred to as the annual financial statement reflects the estimated receipts and expenditure of the government for particular financial year that begins on 1st April and end on 31st March next year. Changes in the tax structures are suggested in the budget beside this provisions are also made for the allocating expenditure on defence, education, research and development etc. The date for presenting budget has been shifted to first February every year this enable the generation of fund well in advancement of financial year.

Questions:

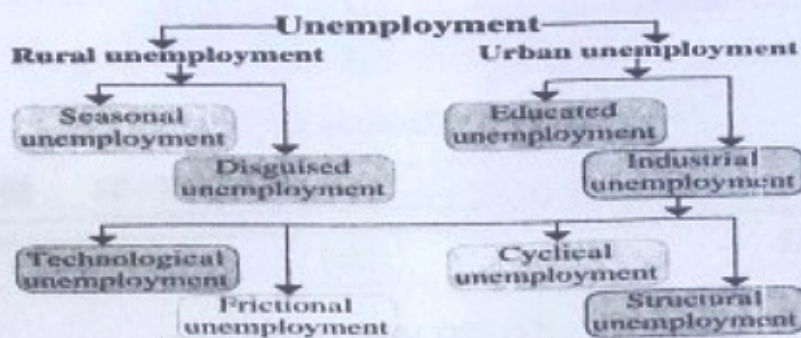
- 1) where is the union budget usually represented?
- 2) What all aspects are considered while preparing the budget?
- 3) Explain the term of budget.

(1)

(1)

(2)

B)



Questions:

- 1) Production does not increase or decrease with increase or decrease in labour force. Mention the type of unemployment. (1)
- 2) A worker thrown out of job because of computerisation. Name the type of unemployment. (1)
- 3) In spite of being a graduate, Vasant is sitting idle at home. (1)
- 4) Give an example of structural unemployment. (1)

C)

Birth rate and Death rate in India

Year	Birth rate	Death rate
1901	49.2	42.6
1911	48.1	47.2
1921	46.3	36.3
1931	45.2	31.2
1941	39.9	27.4
1951	41.7	22.8
1961	41.2	19.0
1971	37.2	15.0
1981	32.5	15.0
1991	29.5	9.8
2001	28.3	9.0
2011	20.97	7.48

- Questions:
- 1) What was the survival rate in the year 1921? (1)
 - 2) Identify the year which has lowest birth rate. (1)
 - 3) Give an opinion on above table. (2)

Q.6) Answer in details (Any 2)

(16)

- 1) Explain the features of the Economic Policy 1991.
- 2) Explain the types of industrial unemployment.
- 3) Explain the various measures undertaken to check the population explosion.



PRAHLADRAI DALMIA LIONS COLLEGE OF COMMERCE & ECONOMICS
Sunder Nagar, S.V. Road Malad (w), Mumbai 400064
ISO 9001:2015 Certified

FYJC ANNUAL EXAMINATION MARCH-2023

Day-----02

SEAT NUMBER

--	--	--	--	--	--	--	--

2023

3

25

1330

(E)

SECRETARIAL PRACTICE (52)

TIME: 3.00 Hrs.

(2 Pages)

Max. Marks: 80

A. Select the correct answer from the options given below and rewrite the statements. (5)

The right of casting vote is given to _____.

- a) Director b) Secretary c) Chairman

General Meeting must have a notice of at least _____ clear days.

- a) 7 b) 21 c) 14

A proposal accepted in meeting is called _____.

- a) motion b) resolution c) proxy

Bank provides overdraft facility to _____ account holder.

- a) current b) saving c) fixed deposit

_____ is responsible for registering companies.

- a) ROC b) SEBI c) Auditors

State whether the following statements are True or False. (5)

A letter without date is incomplete.

Annual Report is prepared by members.

Inside address gives the name and address of the sender.

A director can remain absent for any number of Board Meetings.

Bank account of company is operated by shareholder.

Write a word or a term or a phrase which can substitute each of the following statements. (5)

An elected representatives of shareholders.

A written invitation given to the Director to attend the meeting

A company officer who is required to draft the minutes of the meeting.

Negotiable Instrument which can be discounted with the bank.

Organization responsible for administering Companies Act and regulating professional bodies like ICAI, ICSI, etc.

Arrange in proper order. (5)

a) Drafting Minutes

b) Sending notice

c) Confirming quorum

a) Heading

b) Complimentary close

c) Subject

a) Enclosure

b) Body of letter

c) Date

a) Motion

b) Resolution

c) Voting

d) Signature

e) Salutation

f) Reference number

(8)

Q.2 Explain the following concept. (Any 4)

1. Special resolution
2. Motion
3. Quorum
4. Ministry of corporate affairs
5. Business communication
6. General Meeting

(6)

Q.3 Study the following case/situation and express your opinion. (Any 2)

1. XYZ Ltd held its Annual General Meeting on 11th May 2018. On 1st June Mr. X, a Director of the company was arrested for a financial scam. Hence the shareholders of the company want to remove him.
a) Can the company call for the next Annual General Meeting to be held immediately to remove the director?
b) Which meeting of members should the company hold to discuss removal of the Director?
c) What type of resolution will be passed in this meeting for removal of the Director?

2. A General meeting of public limited company is to be held.

State the provision of quorum for –

- a) meeting of the company which has less than 1000 members
- b) meeting of the company which has more than 5000 members
- c) meeting of the company which has 2500 members

3. Mr. Rahul is the secretary who has been asked by the Managing Director to inform a director about a decision taken in a board meeting in which he was absent. Which aspect of essentials of a good business letter he follows:

- a) When he is giving the required information in a very short and brief manner
- b) When he is using courteous words so as to be polite
- c) When he is giving the entire information about the meeting in a proper manner
(Clarity, conciseness, coherence, courtesy, completeness, correctness)

(12)

Q.4 Distinguish between the following. (Any 3)

1. Motion and Resolution.
2. Current Account and Savings Account
3. Shareholder's Meeting and Board Meeting
4. Loan and Overdraft

Q.5. Answer in brief. (Any 2)

(8)

1. Explain powers and duties of chairman?
2. State the merits of written communication.
3. Explain the essentials of good business letter.

Q.6 Justify the following statements. (Any 2)

(8)

1. Meeting must be duly convened and properly constituted.
2. Written communication is very effective.
3. The Board of Directors are the elected representatives of the shareholders.
4. The secretary should observe certain precautions while corresponding with the Banks.

Q.7 Attempt the following questions. (Any 2)

(10)

1. Draft a letter of Notice and Agenda of a Routine Board Meeting
2. Write a Letter for opening a current Account with the bank.
3. Write a letter to ROC seeking extension of time to hold the AGM.

Q.8 Attempt the following questions. (Any 1)

(8)

1. Draw the layout & Explain different parts of a business letter.
2. Explain the different types of Meetings.
