



**Q.1 a) Fill in the blanks with appropriate words from the bracket. (4)**

- 1) Unemployment during recession is called \_\_\_\_\_ Unemployment.  
(Frictional, Structural, Cyclical)
- 2) Corruption leads to \_\_\_\_\_.  
(equality, inequality, balance)
- 3) Random sampling is a sampling by \_\_\_\_\_.  
(chance, choice, quota)
- 4) \_\_\_\_\_ Variable is expressed in whole numbers.  
(Continuous, Frequency array, Discrete)

**b) state whether the following statement are true or false (4)**

- 1) Birth rate in India is increasing.
- 2) Statistics is affected by multiplicity of causes.
- 3) Larger the size of samples, greater will be the accuracy.
- 4) Disguised Unemployment is a situation where more persons are working when less people are required.

**c) What do the following abbreviations stand for? (4)**

- 1) IRDP 2) TRYSEM 3) NREP 4) SFDA

**Q.2 a) Define or explain the concept (any Four) (8)**

- 1) Poverty line
- 2) Density of population
- 3) Underemployment
- 4) Hoarding
- 5) Primary data
- 6) Inclusive method

**b) Do you agree with the following statements? Give reasons (any Two) (6)**

- 1) The government of India has taken several measures to check population growth.
- 2) There are many source of collecting secondary data.
- 3) Seasonal Unemployment is a part of urban Unemployment.

**Q.3 Answer the following (any Two) (12)**

- 1) State the causes of high birth rate.
- 2) Explain the causes of poverty in India.
- 3) Explain the various types of urban Unemployment
- 4) What is meant by statistics? Explain the features of statistics.

**Q.4 Write notes on any Three of the following (12)**

- 1) Causes for rapid decline in death rate.
- 2) General measures to eradicate poverty.
- 3) Economic effects of Unemployment.
- 4) Questionnaire method.
- 5) Environment deterioration and its economic effect.

\*\*\*\*\*





**Q.1 Select the suitable alternative from the following and rewrite the sentence: (5)**

1. \_\_\_\_\_ means possibility of incurring losses in a Business.  
a. Profit b. Risk c. Cost
2. Cottage Industries are specialized in \_\_\_\_\_.  
a. Consumer goods b. Imported goods c. Luxury good
3. \_\_\_\_\_ is said to be homeland of multiple shops.  
a. UK b. India c. USA
4. Goods or services purchased or sold within a nation is called \_\_\_\_\_.  
a. Internal Trade b. Import Trade c. Export Trade
5. The International Chamber of Commerce was established in \_\_\_\_\_.  
a. 1925 b. 1930 c. 1920

**Q.2 Write a word or phrase or term which can substitute each of the following statement: (5)**

1. Shopping under one roof.
2. Reward for accepting risk in business.
3. A shop where all the goods are available at uniform price.
4. Objectives formed for the welfare of society.
5. A corporation formed by passing a Special Act in the parliament.

**Q.3 Distinguish between the following: (Any 2) (10)**

1. Private Sector Organisation & Public Sector Organisation.
2. Wholesale Trade & Retail Trade.
3. Business & Employment.

**Q.4 State whether the following statements are True or False with reason: (Any 5) (10)**

1. Joint Venture is a Permanent Partnership.
2. Goods are sold on credit basis in One Price Shop.
3. Transport creates form utility.
4. Government Company is registered under some Special Act.
5. Risk is inevitable.
6. Cottage industries are unorganized in nature.

**Q.5 Short Notes on: (Any 2)**

1. Features of Super Market. (10)
2. Types of Mobile Retailers.
3. Features of Small Industry.

**Q.6 Answer in Detail: (Any 1)**

1. Define Global Enterprise & State its Features. (10)
2. Services of Retailer to Consumer & to Wholesaler.

\*\*\*\*\*





Q.1 (A) State whether the following statements are True or False:

[5]

1. Journal is a book of secondary entry.
2. All ledger accounts must have either a debit or a credit balance.
3. All sales are recorded in the sales book.
4. Income- tax is a personal expense of the proprietor.
5. Subdivision of journal is known as subsidiary books.

(B) Fill in the blanks with correct choice:

[5]

1. Purchase of an elephant should be debited to \_\_\_\_\_ account.  
(goods, livestock, cash, elephant)
2. Cash purchase of goods should be credited to \_\_\_\_\_ account.  
(purchase, sales, cash, goods)
3. \_\_\_\_\_ is the source document on the basis of which purchase return book is written.  
(credit note, inward invoice, debit note, outward invoice)
4. When the total of debit side of an account exceeds total of credit side, the account has  
a \_\_\_\_\_ balance.  
(credit, negative, debit, minus)
5. Credit purchase of machinery is recorded in the \_\_\_\_\_.  
(purchase book, return outward book, cash book, journal proper)

Q.2 Pass journal entries in the books of Mr. Sudarshan Maheshwari:

[15]

2017

- May 1. Sudarshan started business with cash ₹ 1,00,000 Bank ₹ 25,000 and furniture ₹ 50,000.
3. Withdrawn ₹ 10,000 from Bank of India.
  5. Purchased goods of ₹ 1,00,000 at 10% T.D. and 10% C.D.
  8. Goods worth ₹ 20,000 were destroyed by fire and insurance company has admitted the claim for 70% of goods.
  15. An amount of ₹ 10,000 was due from Mr. Suresh and only 80% could be recovered from him due to his insolvency.
  18. Machinery of ₹ 20,000 sold for ₹ 25,000.
  30. Paid ₹ 500 to Sunderjeet for travelling from Malad to Boisar.

Q.3 Enter the following transactions of Mr. Anil Gupta in purchase book, sales book, purchase return book and sales return book for the month of June 2017:

[10]

2017

- June 1. Under instructions of Shyamal & sons sold goods of ₹ 20,000 to Shivaji @ 10% trade discount invoice no. 76.
3. Purchased goods on credit from Dhaval traders for ₹ 10,000 and sold the same to Naval & sons at a profit of ₹ 10,000, invoice no. 75 and 77 respectively.
  8. Sent a debit note to Dhiren & co. for ₹ 8,000.
  10. Dhiren traders sold goods of ₹ 25,000 at 20% T.D. to Anil Gupta.
  15. Received a debit note from Minal and Sons of ₹ 18,500 for goods supplied to them.
  18. Dhudmal traders sold goods of ₹ 30,000 to us, invoice no. A/40.
  23. Goods purchased on 18<sup>th</sup> June were sold to Jinal & sons at 100% profit on cost, invoice no 78.
  28. Jinal & sons returned goods worth ₹ 30,000 which were returned back to Dhudmal Traders on the same date.

P.T.O.

**Q.4 Post the following journal entries in the ledger of SUVIDHA TEXTILES:**

[15]

Balances as on 1<sup>st</sup> September

Cash A/c ₹ 1,00,000, Bank A/c (Debit) ₹ 12,000, Drawings A/c ₹ 2,000, Capital A/c ₹ 17,000,  
Machinery A/c ₹ 1,00,000.

Date	Particulars	L.F.	Debit (₹)	Credit (₹)
2017				
September 3	Bank A/c Dr. Cash A/c Dr. Machinery A/C Dr. To capital A/c		20,000 20,000 20,000	60,000
5	Machinery A/c Dr. To cash A/c To bank A/c		1,00,000	50,000 50,000
10	Cash A/c Dr. To Bank A/c		10,000	10,000
15	Drawings A/c Dr. To Bank A/c To Cash A/C		10,000	5,000 5,000
25	Cash A/C Dr. Bank A/c Dr. To Machinery A/c		10,000 10,000	20,000
	Total		2,00,000	2,00,000

\*\*\*\*\*



SECTION - I**Q1) Attempt any four out of seven:****(2 x 4 = 8)**

- 1) Find the conjugate and modulus of  $3 - 4i$
- 2) Express the following angles in radians:
  - a.  $120^\circ$
  - b.  $225^\circ$
- 3) Evaluate:  $4 \cot 45^\circ - \sec^2 60^\circ + \sin^2 30^\circ$
- 4) Find the locus of point P such that its abscissa exceeds twice its ordinate by 7.
- 5) Find the value of  $\sin \theta$  if  $\cos \theta = \frac{4}{5}$ ;  $\frac{3\pi}{2} < \theta < 2\pi$
- 6) Find the length of an arc of a circle which subtends an angle of  $\frac{\pi}{3}$  at the centre, if the radius of the circle is 9 cms.
- 7) Eliminate  $\theta$  if  $x = r \cos \theta$ ,  $y = r \sin \theta$

**Q2) Attempt any three out of five:****(3 x 3 = 9)**

- 1) Find the values of  $x$  and  $y$  which satisfy the following equations  $(x, y \in R)$   
 $(x + 2y) + (2x - 3y)i + 4i = 5$
- 2) The area of a circle is  $25\pi$  sq.cms. Find the length of its arc subtending an angle of  $144^\circ$  at the centre.
- 3) A(5, -2) and B(-4, 2) are the given points. Find the equation of locus of a point P which is equidistant from the points A and B.
- 4) If  $a = \frac{-1 + \sqrt{3}i}{2}$ ;  $b = \frac{-1 - \sqrt{3}i}{2}$  then show that  $a^2 = b$
- 5) Find the values of 'a' and 'b' if the points (3, 2) and (-1, -2) lie on the locus  $ax + by = 5$

**Q3) Attempt any two out of four:****(4 x 2 = 8)**

- 1) Find the square root of  $2i$
- 2) The measures of angles of a triangle are in the ratio 2:3:5. Find their measures in radians.
- 3) Prove that:  $\frac{1}{\operatorname{cosec} \theta - \cot \theta} - \frac{1}{\sin \theta} = \frac{1}{\sin \theta} - \frac{1}{\operatorname{cosec} \theta + \cot \theta}$
- 4) If  $\frac{\sin A}{3} = \frac{\sin B}{4} = \frac{1}{5}$  where A and B are angles in second quadrant, then find the value of  $4 \cos A + 3 \cos B$

Section - II**Q.4) Attempt any four out of seven:****(2 x 4 = 8)**

- 1) Simplify  $\log_{10} 5 + 2 \log_{10} 4$  as single logarithm.
- 2) For a certain data, Quartile Deviation is 10 and the upper Quartile is 60. Find the lower Quartile.
- 3) Calculate  $Q_2$  for the number of ATM transactions per day at a particular location in a certain city recorded as:  
48, 50, 132, 65, 30, 75, 60, 49, 58, 72, 55.
- 4) Find the value of  $\log_5 3125$ .
- 5) Calculate the coefficient of range for the following sales (in ₹) of a departmental store in a week:  
7500, 10900, 15000, 9000, 13080, 12800.

**P.T.O.**



6) Compute  $D_3$  for the following data:

70, 75, 80, 73, 75, 76, 71, 73, 72.

7) Evaluate:  $\frac{\log_2 27}{\log_2 3}$

**Q.5) Attempt any three out of five:**

(3 x 3 = 9)

1) The number of members and mean of two data sets are as follows:

Number of Members	280	350
Mean	45	54

Calculate combined mean of the two distributions taken together.

2) Compute  $Q_1$  and  $Q_3$  for the following frequency distribution:

Daily wages (in ₹)	10	15	20	25	30	35
No. of workers	5	12	16	14	10	2

3) Solve for  $x$  if  $2\log_{10} x = 1 + \log_{10} (x + \frac{11}{10})$

4) Calculate Mean Deviation about mean for the world's annual gold output (in million pounds) for 10 different years: 94, 95, 96, 93, 87, 79, 73, 69, 68, 66.

5) From the following data, calculate  $D_8$  and  $P_{30}$ :

House Rent (in ₹)	1100	1120	1130	1170	1200	1250	1280	1300
No. of houses	25	17	13	15	14	8	6	2

**Q6.) Attempt any two out of four:**

(4 x 2 = 8)

1) Compute Quartile Deviation for the data given below:

Class	0-10	10 - 20	20 -30	30 - 40	40 - 50
Frequency	4	15	28	16	7

2) Find the value of:  $\frac{(0.3125)^2}{(0.4629)^{1/3}}$

3) Calculate  $D_3$  and  $P_{80}$  for the following distribution:

Length (in inches)	0-20	20-40	40-60	60-80	80-100	100-120
No. of units	1	14	35	85	90	15

4) Find Standard Deviation of the following number of families with specified number of children in a certain locality:

No. of children	0	1	2	3	4	5
No. of families	10	40	62	18	8	2

\*\*\*\*\*





**PRAHLADRAI DALMIA LIONS COLLEGE OF COMMERCE & ECONOMICS**

**FYJC TERM END EXAMINATION 2017**

**Duration: 1½ Hrs.**

**SUBJECT: SECRETARIAL PRACTICE**

**Marks: 50**

**Q1) A) select the correct answer from the possible choices given below and rewrite the statements: (5)**

- 1) A \_\_\_\_\_ is a person who discovers the business opportunity.  
(a) Secretary (b) promoter (c) shareholder.
- 2) Minimum \_\_\_\_\_ persons are required to start partnership firm.  
(a) Two (b) three (c) five
- 3) A joint stock company is \_\_\_\_\_ person.  
(a) Natural (b) artificial (c) real.
- 4) A \_\_\_\_\_ is an oldest type of secretary.  
(a) Personal secretary (b) company secretary (c) institutional secretary
- 5) The certificate issued by the registrar of company for registration is \_\_\_\_\_.  
(a) certificate of incorporation (b) trading certificate (c) prospectus

**B) Write a word or a term or a phrase which can substitute each of the following statements (5)**

- 1) The certificate required by public company to start business activities
- 2) The constitution of the company.
- 3) A person doing secretarial work in an ancient Indian history
- 4) The quality of a secretary which enables him to adjust to varying situation
- 5) A person who gives guarantee of raising minimum subscription

**Q2) Distinguish between the following. (Any two) (10)**

- 1) Personal secretary and company secretary
- 2) Certificate of incorporation and certificate of commencement of business
- 3) Memorandum of association and Articles of association

**Q3) State with reasons whether the following statement are true or false (Any two) (10)**

- 1) All companies can start a business after incorporation
- 2) Table A act as silent salesman of company.
- 3) A joint stock company is superior form of business organization

**Q4) Write short notes (Any two) (10)**

- 1) Features of secretary
- 2) Contents of Articles of association
- 3) Promotion stage in formation of company

**Q5) Answer in detail (Any one) (10)**

- 1) What is joint stock company? explain its features.
- 2) Explain in brief capital raising stage.

\*\*\*\*\*





**Q.1 Fill in the blank.**

[10]

1. A \_\_\_\_\_ can have .htm or .html extension.
2. A \_\_\_\_\_ can be defined as a computer that is responsible for accepting HTTP requests from clients as well as serving them with HTTP responses along with optional data contents.
3. A \_\_\_\_\_ consists of a collection of slides that are shown to an audience in sequence.
4. A group of worksheets is known as \_\_\_\_\_.
5. LCD stands for \_\_\_\_\_.
6. In HTML, \_\_\_\_\_ tag contains the document title.
7. ARPA stands for \_\_\_\_\_.
8. GIF stands for \_\_\_\_\_.
9. \_\_\_\_\_ key is used to view Power Point presentation.
10. \_\_\_\_\_ are set of rules to be followed by two computers when they communicate with each other.

**Q.2 State whether following statements are true or false.**

[10]

1. Ctrl+A is used to select the whole text.
2. In Excel, =sqrt(900), the output will be 90.
3. The people who weave multimedia into meaningful tapestries are known as multimedia developers.
4. A web page is a single electronic document written in HTML.
5. In Power Point, theme is a set of colors, fonts and special effects.
6. Information relates to fact, event and transactions.
7. To insert table in Ms-Word, activate page layout tab of the software.
8. Title bar is located at bottom in any application.
9. ROM is not volatile.
10. Bgcolor is an attribute of <body> tag.

**Q.3 Select Two correct options from the following.**

[10]

1. \_\_\_\_\_ and \_\_\_\_\_ are application purposes used within multimedia. (Business, Public Place, Manufacturing, Industry)
2. \_\_\_\_\_ and \_\_\_\_\_ are examples of browsers. (Opera, Domain name system, URL, Apple Safari)
3. \_\_\_\_\_ and \_\_\_\_\_ are common programming languages data types. ( Integer, Character, Text, Decimal point number)
4. \_\_\_\_\_ and \_\_\_\_\_ are examples of output devices. (Projector, Touch Screen, Printer, Micro Phone)
5. \_\_\_\_\_ and \_\_\_\_\_ are attributes of <p> tag. (align, text, style, width)

**Q.4 Answer the following in one or two sentences.**

[10]

1. List all views present on Power Point.
2. Write one feature of <comment> tag.
3. Write any 2 advantages of HTML.
4. List components of multimedia.
5. Give few examples of Top Level Domains.

**Q.5 Write HTML programs to get the following output.**

[10]

1. Limitations (Dis-advantages) of HTML.
2. Attributes of <body> tag.

\*\*\*\*\*





**SECTION: A**

*Reading Skill, Grammar, Note-Making & Summary Writing*

**Q1. (A) Read the first activity. Read the extract and then do all activities.**

[12]

**Activity 1.**

(2)

Given below are jumbled sentences. Put them in the right order.

- The narrator's sister ceased to be a bully.
- The narrator had the taste of sisterly intimacy.
- The narrator's sister fearlessly held her hand.
- The narrator took upon herself to learn.

I still remember the day I learned to ride a bike. I had received the bike at Christmas, which was great, until I realised I had no idea how to ride it. My mom had long since abandoned any attempt to teach me; I had proved to be a panicky, frustrating student. I took upon myself to learn, a little bit each day, but to no avail, I couldn't ride my bike, and on that fateful day, it was no different. I was coming to the end of my daily one hour torture, and I was so frustrated that I threw my bike aside and began to cry. I guess that was what caused my sister to come outside. At first I was sceptical and tense, as I thought she would begin to tease me or at least burst out laughing. She did neither. I hunched my shoulders forward and turned my face away, but she gently picked my bike up and motioned me over, that was the beginning. She fearlessly held my hand while the tears dried on my cheeks; she steadily held my bike when my feet faltered. She never once let me fall. And for three hours- three wonderful, blissful hours- we learned to ride my bike. No shouting. No fighting. No arguing.

That day I learned that my sister was human- how else would she have been my teacher? I have seen those TV shows with doting siblings, and I've longed for that perfect harmony. That was the day, however, I had a taste of what real sisterly intimacy could be like. She saw through my weakness; I saw her compassion. I got off my bike that day empowered, and instead of blind admiration, I now had a newfound respect for my sister and for myself. She was both humbled and exalted before my eyes. My sister walked away quietly that day while I showed off my new skills for my mom, and I did not see her the rest of the day. Perhaps she felt something too.

The day I learned to ride my bike proved to be my bridge from a snotty, naive little brat to a wiser younger sister. It was a life changing experience, not a miracle. We still occasionally have our random spats and bitter rivalries, but since that day, it's been easier to get along because we have an unspoken respect for each other. The day she taught me how to ride my bike, she ceased to be a bully and became my sister.

And nothing more.

**Activity 2.**

(2)

State whether the following statements are true or false and rewrite:

- The narrator's mom taught her to ride a bike.
- The narrator's sister burst out laughing at the narrator's plight.
- The narrator learnt what sisterly intimacy was.
- The narrator had new found respect for her sister.

**Activity 3.**

(2)

Find the proof in the passage given to show that the sisters founded new relationship after the bike ride.

**Activity 4. Vocabulary:**

(2)

Match the following

- |               |                 |
|---------------|-----------------|
| a) Steadily   | i) conflict     |
| b) Empowered  | ii) unfaltering |
| c) Compassion | iii) emancipate |
| d) Rivalries  | iv) empathy     |

**Activity 5. Personal response:**

(2)

Mention two life skills that will help you win admiration and popularity in your family.

**Activity 6. Grammar:**

(2)

- We still occasionally have our random spats and bitter rivalries.

(Use 'as well as' and rewrite the sentence.)

- I showed off my new skills for my mom.

(Rewrite beginning with 'My new...')

**Q1. (B) Do as directed:**

[3]

- \_\_\_\_\_ apex court emphasised that \_\_\_\_\_ consumer protection Act was meant to protect the interest of the consumers. (Fill in the blanks with appropriate articles and rewrite the sentences)
- Every year before Diwali E-tailers gear up \_\_\_\_\_ meet the spike \_\_\_\_\_ demand that follows festive season discounts. (Fill in the blanks with appropriate prepositions and rewrite the sentence)
- "Madan is a stupid boy, isn't he?" Rajiv asked Suman. (Rewrite the sentence making it indirect)



Q2. (A) Read the first activity. Read the extract and then do all activities. [12]  
(2)

**Activity 1.**

Read the following statements and write down two statements which explain the theme of the extract:

- Discipline is worthwhile.
- Athletes and discipline.
- Increase of human energy due to discipline.
- Necessity of discipline.

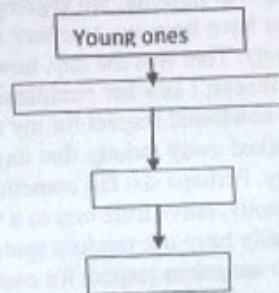
One of our most difficult problems is what we call discipline, and it is really very complex. You see, society feels that it must control or discipline the citizen, shape his mind according to certain religious, social, moral and economic patterns.

Now, is discipline necessary at all? Please listen carefully, don't immediately say 'yes' or 'no'. Most of us feel, especially while we are young, that there should be no discipline, that we should be allowed to do whatever we like, and we think, that is freedom. But merely to say that we should be free and so on, has very little meaning without understanding the whole problem of discipline.

The keen athlete is disciplining himself all the time, is he not? His joy in playing games and the very necessity to keep fit makes him go to bed early, refrain from smoking, eat the right food and generally observe the rules of good health. His discipline is not an imposition or conflict, but a natural outcome of his enjoyment of athletics. Now, does discipline decrease or increase human energy? Human beings throughout the world, in every religion, in every school of philosophy, impose discipline on the mind, which implies control, resistance, adjustment, suppression; and is all this necessary? If discipline brings about a greater output of human energy, then it is worthwhile, then it has meaning; but if it merely suppresses human energy, it is very harmful, destructive. All of us have energy and the question is whether that energy through discipline can be made vital, rich and abundant, or whether discipline destroys whatever energy we have. I think this is the central issue. (2)

**Activity 2.**

Complete the Flow chart:



**Activity 3.**

We need to have discipline in our life because:

- \_\_\_\_\_
- \_\_\_\_\_

**Activity 4.**

Use the given words in meaningful sentences:

- Harmful
- Resistance
- Imposition
- Enjoyment

**Activity 5.**

List two disciplinary changes that you would make in your lifestyle to make your life better

**Activity 6. Grammar:**

- It must control or discipline. (State what the underlined modal auxiliary indicates.)
- If it merely suppresses human energy it is very harmful. (Rewrite the sentence using 'Unless')

**Q2. (B) Summary:**

Write a brief summary of the above extract with the help of the points given below and suggest a suitable title.

Difficult, complex problem.....society needs discipline...young misunderstand .....Discipline not imposition.....suppress human energy



**SECTION: B**

**Poetry**

Q3. Read the given extract and do the activities that follow:

[8]

Constantly dressed in modern dresses,  
Taking yesterday as a very old hag,  
I am destined to pull on  
Among the latest waves of style.

It has been long, long since  
I have  
Left my friendship behind in the village  
And come here.

Ages past  
I feel this day  
On my lips  
The lipstick of sham  
Painted bright.

There is motion but colourless is life  
In this lane of din  
Set up abolishing solitude,  
I have built a wall of enigma  
Around my own house  
Against the pure affection of friendship:  
'Entrance Prohibited'  
I have painted  
On my door.

**Activity 1.**

(2)

Read the given statements and write the two which explain the emotions of the new city occupant.

- a) It is not easy to adapt to the city.
- b) She has many friends in the city.
- c) The city indicates a fast life.
- d) She still wears traditional clothes.

**Activity 2.**

(2)

Pick out the expressions from the poem which indicate that the woman is nostalgic about her simple life in the village:

- a) \_\_\_\_\_
- b) \_\_\_\_\_

**Activity 3.**

(2)

Mention two reasons for liking the life in the city of Mumbai.

**Activity 4.**

(2)

Frame a slogan to express your love for the city of Mumbai.

**SECTION: C**

**Rapid Reading**

Q4. Read the following extract and do the activities that follow:

[4]

After the war service in 1914-18, he came to be recommended for a gatekeeper's post at Engladia's. He liked the job very much. He was given a khaki uniform, a resplendent band across his shoulder and a short stick. He gripped the stick and sat down on a stool at the entrance to the office. And when his chief's car pulled up at the gate he stood at attention and gave a military salute. The office consisted of a staff numbering over a hundred, and as they trooped in and out every day he kept an eye on them. At the end of the day he awaited the footsteps of the General Manager coming down the stairs, and rose stiffly and stood at attention, and after he left, the hundred of staff poured out. The doors were shut; Singh carried his stool in, placed it under the stair case and placed his stick across it. Then he came out and the main door was locked and sealed. In this way he had spent 25 years of service, and then he begged to be pensioned off. He would not have thought of retirement yet, but for the fact that he found his sight and hearing playing tricks on him; he could not catch the Manager's footsteps on the stair, and it was hard to recognise him even at 10 yards. He was ushered into the presence of the chief, who looked up for a moment from his papers and muttered, "We are pleased with your work for us, and the company will give you a pension of twelve rupees for life..."



**Activity 1.****(2)**

Choose the appropriate statements from the following and write them:

- Govind Singh was a military personnel who had participated in the war.
- Govind Singh wanted retirement as he did not like his job.
- Govind Singh was rewarded pension for his sincerity.
- Govind Singh took retirement though he could see and hear well.

**Activity 2.****(2)**

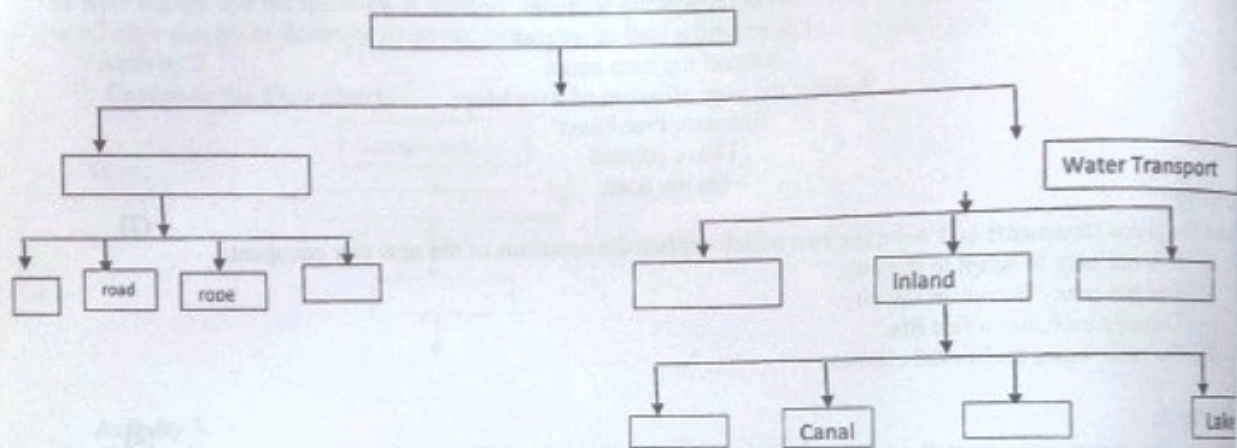
Extend the above extract by adding your own imaginative paragraph in about 50 words.

**SECTION: D****Written Communication**

**Q5. Read the given extract and complete the Tree-Diagram with its main points and sub-points. [4]**

The surface transport is divided into two parts namely ground transport and water transport. On the ground level, roads and railways are mostly preferred. Ropeways and pipelines have to be used for transportation on ground level.

There are three ways of water transport- Coastal shipping, Inland waters, and overseas transport. Inland waters include transportation on rivers, canals, backwaters and lakes.



**Q6. Write a short tourist leaflet on any hill station of your choice with the help of following points: [4]**

- How to reach
- Where to stay
- What to see
- Shopping attraction
- Add your own points

\*\*\*\*\*

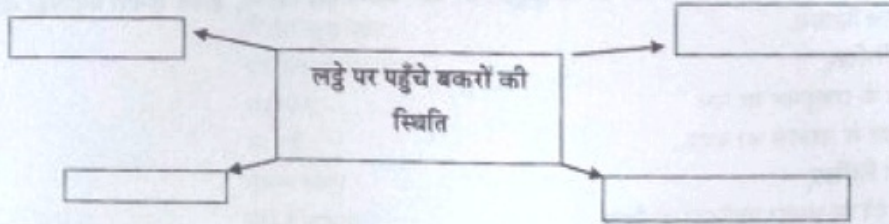




प्रश्न १. क. परिच्छेद पढ़कर दी गई सूचनाओं के अनुसार कृतिथी कीजिए

(२)

१. संज्ञात पूर्ण कीजिए -



परिच्छेद :

जब मैं छोटा - सा बालक हो था, तो स्कूल की किसी पुस्तक में मैंने एक कहानी पढ़ी कि दो पास-पास खड़े पहाड़ों के बीच से एक नदी बहती थी। उस पर आर-पार जाने के लिए गाँव वालों ने लकड़ी का एक लट्टा रख रखा था। एक दिन एक ही समय में उस पर एक बकरा इधर से चला, एक उधर से। लट्टे के बीच में पहुँचे, तो दोनों आमने-सामने, न मुड़ने की जगह, न बचने की गुंजाइश। करे तो क्या करें? मौत दोनों के सामने, पर वे दोनों समझदार और समझदार क्या, दोनों में सहकार भावना थी। सलाह करके दोनों में एक वही लट्टे पर बैठ गया और दूसरा उनके ऊपर से धीरे-धीरे उतर गया। बाद में यह भी उठकर अपनी राह लगा और वो दोनों मौत से बच गए।

मुझ पर इस कहानी का बड़ा असर पड़ा। मैं सोचने लगा कि दोनों बकरे आपस में बहस करने लगते, तो भूखे-प्यासे धक कर नदी में जा गिरते। आपस में मेल जोल से कितने काम निकल सकते हैं। मैं इस कहानी को भूल भी जाता, पर उन्ही दिनों वह बंदरों की घटना हो गई, जिसका मैं अभी आपसे जिक्र कर रहा था और जिस पर आप मेरी अभी-अभी हँसी उड़ा रहे थे।

“हाँ! वह बंदरों की घटना सुनाइये पंडित जी।” “ओहो, फिर वही जल्द बाजी। अरे भाई, सुना तो रहा हूँ बंदरों की घटना। जिस पाठशाला में मैं पढ़ता था, उसके सामने ही था महादेव का मंदिर। मैं एक दिन दोपहर को मंदिर में गया, तो क्या देखता हूँ, कि एक काळा साँप शिवजी को लिपटा हुआ है और अपना भयंकर फन उसने शिवजी के ऊपर फैला रखा है। मैं देखकर उल्टे पाँव लौट आया, पर मेरे बाहर निकलते ही एक बंदर मंदिर में घुसा। बात यह है कि महादेव के असली पुजारी ये बंदर ही हैं और भक्त लोग चावल मिठाई फल आदि जो चढ़ाते हैं वह इन्हीं के हिस्से में आते हैं।”

२. क कारण लिखिए

(१)

१. महादेव के असली पुजारी बंदर ही हैं।

२. लेखक मंदिर से उल्टे पाँव लौट आया।

ख विधानों के सामने सही है या गलत लिखिए

(१)

१. दोनों बकरे भूखे-प्यासे नदी में गिर गए।

२. पाठशाला के सामने महादेव का मंदिर था।

ग. निम्नलिखित शब्दों के वचन बदलिए

(१)

१. मिठाई २. पाठशाला

३. परिच्छेद से दो शब्द चुन ढूँढकर लिखिए

(१)

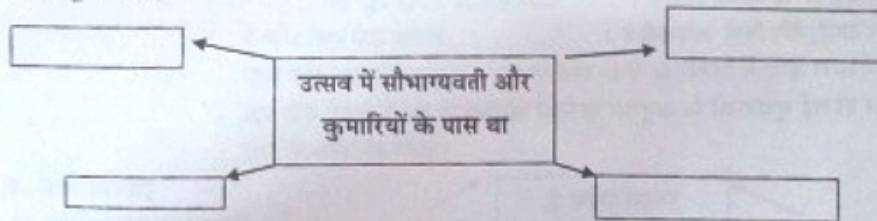
४. सहकार भावना का महत्त्व लगभग १० से १२ वाक्यों में लिखिए

(२)

प्र.१ ख) परिच्छेद पढ़कर सूचनाओं के अनुसार कृतिथी कीजिए

(२)

१. संज्ञात पूर्ण कीजिए



परिच्छेद

प्रभात की हेम फिरंगों से अनुरजित नन्ही-नन्ही बूंदों का एक झोंका स्वर्ण-मल्लिका के समान बरस पड़ा। मंगल सूचना से जनता ने हर्षध्वनि की।

रथों, हावियों और अमारोहियों की पंक्ति जम गई। दर्शकों की भीड़ भी कम न थी। गजराज बैठ गया, सीढ़ियों से महाराज उतरे। सौभाग्यवती और कुमारी सुंदरियों के दो दल, आम्रपल्लवों से सुशोभित मंगल-कलश और फूल, कुंकुम तथा खोलों से भरे घाल लिप, मधुर गान करते हुए आगे बढ़े।

महाराज के मुख पर मधुर मुस्कान थी। पुरोहित वर्ग ने स्वस्त्ययन किया। स्वर्ण रजित हल की मूठ फकड़कर महाराज ने जुते हुए सुंदर पुष्ट बैलों को चलने का संकेत किया। बाजे बजने लगे। किशोरी कुमारियों ने खोलों और फूलों की वर्षा की।

(१)



कौशल का यह उत्सव प्रसिद्ध था। एक दिन के लिए महाराज को कृषक बनाना पड़ता उस दिन इंद्र पूजन को धूम-धाम होती, गोठ होती। निवासी उस पहाड़ी भूमि में उत्सव मनाते। प्रतिवर्ष कृषि का यह महोत्सव उत्साह से संपन्न होता; दूसरे राज्यों से भी युवक राजकुमार इस उत्सव में भाव से आकार योग देते।

मगध का एक राजकुमार अरुण अपने रथ पर बैठा बड़ा कुतूहल से यह दृश्य देख रहा था।

बीजों का एक थाल लिए कुमारी मधुलिका महाराज के साथ थी। बीज बोते हुए महाराज जब हाथ बढ़ाते तब मधूलिका उनके सामने थाल देती। यह खेत मधूलिका का था। जो इस साल महाराज की खेती के लिए चुना गया था। इस लिए बीज देने का सम्मान मधूलिका को ही मिला। वह कु थी। सब लोग महाराज का हल चलाना देख रहे थे - विस्मय से, कुतूहल से। और अरुण देख रहा था, कृषक कुमारी मधूलिका को। अहा! कि भोला सौंदर्य! कितनी सरल चितवन!

२. अ. उत्तर लिखिए

१. मगध के राजकुमार का नाम
२. कौशल के महाराज का वाहन

ब. कारण लिखिए

१. बीज देने का सम्मान मधूलिका को मिला
२. दूसरे राज्यों के युवक राजकुमार कौशल आए थे।

३. अ. पर्यायवाची शब्द परिच्छेद से ढूँढकर लिखिए

१. सोना
२. घोड़ा

ब. निम्नलिखित शब्दों के प्रत्यय और उपसर्ग अलग कीजिए

१. सुशोभित
२. सौभाग्यवती

४. अपने गाँव या शहर के किसी विशेष महोत्सव का वर्णन १० से १२ पंक्तियों में कीजिए।

प्र.१ ग. ८० से १०० शब्दों में उत्तर लिखिए (२ में से १)

१. लाजो ने करवा का बत तोड़ देने का कारण स्पष्ट कीजिए।
२. पुरस्कार कहानी का उद्देश्य स्पष्ट कीजिए।

प्र.२. (घ) पद्यांश पढ़कर दी गई सूचनाओं के अनुसार कृतियाँ कीजिए

१. अ. चौखट पूर्ण कीजिए

मीरा के नृत्य करने पर

लोगों ने कहा

सास ने कहा

ब. उत्तर लिखिए

१. मीरा के उपास्य देव
२. मीरा को राणा द्वारा भेजा गया

पद्यांश :

पग घुँघरू बाँध मीराँ नाची रे ।

लोग कहै मीराँ हो गई, बावरि सास कहे कुलवासी रे ।

जहर का प्याला राणा भेज्या, पीवत मीराँ हासी रे ।

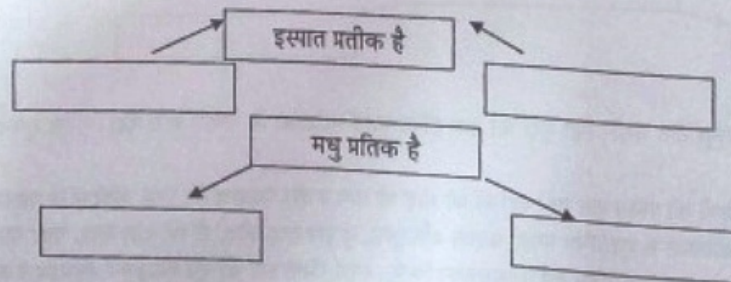
मैं तो अपने नारायण की, हो गई आपहि दासी रे ।

मीराँ के प्रभु गिरिधर नागर, बेगि मिलो अविनासी रे ।

२. पद्यांश का भावार्थ सरल हिन्दी में लिखिए (८ से १० पंक्तियों में)

(ख) पद्यांश पढ़कर दी गई सूचनाओं के अनुसार कृतियाँ कीजिए

१. उत्तर लिखिए



(२)



पद्यांश :

मैं ही हूँ वह मधु  
जिसे प्रकृति ने  
असंख्य फूलों से चुना है  
जिसमें सभी आकाशों का  
सुनहरा मरंद है  
ओ इस्पात के तथ्य  
मैं तेरा जूता पहन  
दृढ़ संकल्प के चरण  
बढ़ाऊँगा,  
पर तुझे  
मूर्धन्य स्थान  
नहीं दे सकता।  
तु साधन रह,  
साध्य न बन

२. सही विकल्प चुनकर लिखिए

(१)

१. जिसमें सभी आकाशों का सुनहरा ————— है। (मकरंद, मरंद, मधु)

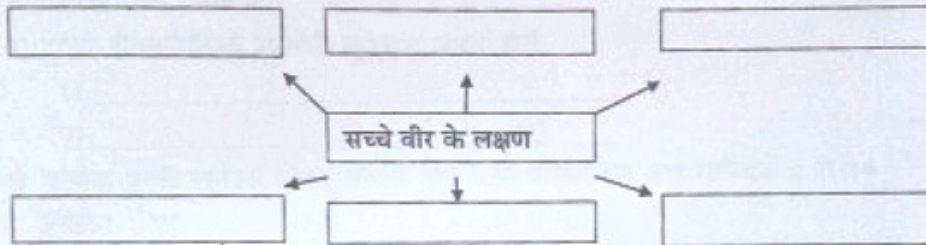
२. ओ इस्पात के तथ्य मैं तेरा जूता पहन दृढ़ संकल्प के ————— बढ़ाऊँगा। (कदम, चरण, हाथ)

३. पद्यांश द्वारा मिलने वाला संदेश लिखिए (८ से १० पंक्तियों में)

(२)

ज. १. पद्यांश पढ़कर दी गई सूचनाओं के अनुसार कृतियाँ कीजिए

(२)



पद्यांश :

सच है, विपत्ति जब आती है,  
कायर को ही दहलाती है,  
सूरमा नहीं विचलित होते,  
क्षण एक नहीं धीरज खोते,  
विघ्नों को गले लगाने हैं  
काँटों में राह बनाते हैं।  
मुख से न कभी उफ़ कहते हैं  
संकट का चरण न गहते हैं,  
उद्योग - निरत नित रहते हैं,  
शूलों का मूल नशाने को,  
बढ़ खुद विपत्ति पर छाने को।  
हे कौन विघ्न ऐसा जग में,  
टिक सके आदमी के मग में?  
खम ठोंक ठेलता है जब नर,  
पर्वत के ज्ञाते पाँव उखड़।

२. उत्तर लिखिए

(१)

१. विपत्ति में ऐसा साहस नहीं

२. धीर पुरुष के ताल ठोकने का परिणाम

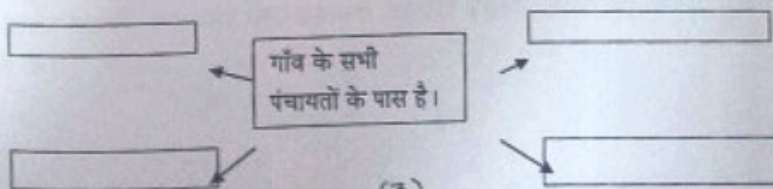
३. उपर्युक्त पद्यांश का भावार्थ लगभग ८-१० पंक्तियों में लिखिए

(२)

प्र.३. (क) परिच्छेद पढ़कर दी गई सूचनाओं के अनुसार कृतियाँ कीजिए।

१. संज्ञा ल पूर्ण कीजिए

(२)



(३)





विभाग १ गद्य

कृती - १. अ ) खालील पठित उतान्याच्या आधारे दिलेल्या सूचनेनुसार कृती करा : (२)

१) लेखकाने सांगितलेल्या चार गोष्टी - १ \_\_\_\_\_ २ \_\_\_\_\_ ३ \_\_\_\_\_ ४ \_\_\_\_\_

थोर ग्रंथांचे अध्ययन करा . परंतु तेवढ्याने भागणार नाही . जीवनग्रंथांचा खोल अभ्यास करा . प्रत्येक प्राणी म्हणजे विश्व ग्रंथांचे पान आहे . प्रत्येक जीवन म्हणजे महाकाव्य आहे. ती जीवने तपासा . मुंबईच्या चाळीतून जा . दहा हात लांबीरुंदीच्या खोलीत सहा कुटुंबे कशी राहतात हे पहा आणि साहित्यिक असाल तर असा आगीचा डोंब पेटवा की ज्या समाजरचनेत हे शक्य होते , ती भस्म होईल . जा , शेतकऱ्यांची जीवने तपासा . खंडोगणती धान्य पिकणारे देवाचे शेतकरी दुर्दैवी का? त्यांच्या मुलांना दोन दिवस काकडीवर, आठ आठ दिवस आंब्यांच्या कोयांवर तर काहीना चिंचोक्यावर राहण्याची पाळी का ? साहित्यिक म्हणजे सहानुभूतीचा सागर ! ज्या मानाने तुमची सहानुभूती मोठी युवा मानाने तुम्ही मोठे साहित्यिक . तुमचा सहानुभूतीची लांबीरुंदी कोठवर पोचते ते पहा . तुम्हाला मी तीन-चार गोष्टी सांगितल्या . सभोवतीच्या मानवी जीवनाशी एकरूप व्हा. प्राचीन इतिहास अभ्यासा ; त्याप्रमाणे अर्वाचीनही , आजचाही . तिसरी गोष्ट निसर्गाशी एकरूप व्हा आणि चौथी गोष्ट थोर थोर देशी-विदेशी , प्राचीन - अर्वाचीन ग्रंथकारांचा अभ्यास करा. आजच्याही थोर साहित्यिकांजवळ जात जा.

२) दुर्दैवी शेतकऱ्यांच्या मुलांची गुजराण यावर होते. (२)

१) \_\_\_\_\_

२) \_\_\_\_\_

३) 'प्रत्येक प्राणी म्हणजे विश्व ग्रंथांचे पण' , या वाक्यातील आश्चर्यसौन्दर्य ८ ते १० ओळीत लिहा. (२)

किंवा

मराठीतील थोर साहित्यिक साने गुरुजींबद्दल तुम्हास माहीत असलेली माहिती लिहा .

ब ) खालील उतान्याच्या आधारे सूचनेनुसार कृती करा .

थोड्याफार फरकानं शहरात याच प्रकारे होळी साजरी केली जाते . अलीकडे पाण्याचा नाहक उपसा, गैरवापर आपल्याकडे सगळेच सण सण उत्सव लहानमोठ्या प्रमाणावर साजरे करण्याची परंपरा आहे. रोजच्या कामाच्या धबदब्यातून थोडा वेळ काढून , ताण-तणाव विसरून आनंद उपभोगता यावा, हा खरेतर या सणांचा साधा अर्थ . होळीपुढे उभे राहून खच्चून वाईटसाईट बोलून मनातली भडस होळीत जाळून टाकते. मन स्वच्छ करणे असो नाहीतर वय -जात -धर्म- लिंग -आर्थिक स्तर वगैरे विसरून मुक्त मनाने एकमेकांना रंगवणे असो. निखळ आनंद देण्याची क्षमता असलेल्या कित्येक प्रथा आपल्यापाशी आहेत. पण आजचे चित्र खूप वेगळे असल्याचे जाणवतेय . मुळात सगळे सण-उत्सव साजरे करण्याला एक प्रकारचे बाजरी स्वरूप आलेय . प्रत्येक सण जसा काही 'इव्हेंट' होत चालला आहे . जोरदार खरेदी..... गरजेची-विनगरजेची पण 'सेलिब्रेट' करायचा म्हंटले कि बाजार गाठणे कर्तव्यप्राप्त ठरलेय. सणांसाठी सततचे उसने अवसान आणताना साधेपणा कुठे हरवलाय ? कायमच का सगळे झगझगीत झकपक हवेहवेसे वाटू लागलेय ?

-प्राची कुलकर्णी -गरुड

'लोकसत्ता, चतुरंग पुरवणी', दि. १९ मार्च २०१६ (पृष्ठ १)

१. होळी सणांचा साधा अर्थ १)----- (२)

२)-----

२. तुम्हाला आवडणाऱ्या सणाबद्दल माहिती लिहा . (२)

३. 'सण उत्सव साजरे करायला एक प्रकारचे बाजरी स्वरूप आले', या बाबत तुमचे मत व्यक्त करा. (२)



विभाग २ : पद्य

कृती २. अ ) खालील कवितेच्या आधारे दिलेल्या सूचनेनुसार कृती करा.

१. ज्ञानाचे महत्त्व सांगताना संत बहेणाबाईंनी दिलेली दोन उदाहरणे लिहा

(१)

उदाहरणे : १) \_\_\_\_\_ २) \_\_\_\_\_

२. संत बहेणाबाईंच्या मते - i) सर्वात श्रेष्ठ -----

(१)

ii) सुसंगतीचे फळ -----

सुरतरू म्हणोनि बाभूळ मानिली । व्यर्थचि ते गेली भावना हो ॥ १ ॥

यालागी वळखी असावी नेटकी । येईल परिपाकीं गुण तया ॥ २ ॥

साखरेचा खडा गार ते एकवर्ण । हंस पक्षी जाण सारिखेची ॥ ३ ॥

बहेणि म्हणे पाहे विचारुनी मनी । ज्ञान सर्वाहूनी श्रेष्ठ असे ॥ ४ ॥

हिंगाचिया संगे कापूर नासला । लवणे विध्वंसिला क्षीरयोग ॥ १ ॥

म्हणोनिया संग करावा तो करी । जो हो सौख्यकारी प्राणियाते ॥ २ ॥

केशर काजळाची सांगत जालिया । काजळाचा तया सांग लागे ॥ ३ ॥

बहेणि म्हणे सांग धरावा तो ऐसा । मोक्ष तो आपैसा होय जेणे ॥ ४ ॥

३. 'सुसंगतीचे महत्त्व' तुमच्या शब्दात लिहा.

(२)

४. 'हिंगाचिया संगे कापूर नासला । लवणे विध्वंसिला क्षीरयोग' या पंक्तीचा अर्थ तुमच्या शब्दात लिहा .

(२)

ब . खालील कवितेच्या आधारे दिलेल्या सूचनेनुसार कृती करा.

१. जत्रेशी निगडित पूर्वीच्या व आताच्या मुलांच्या वृत्तीतील फरक लिहा.

(१)

१) \_\_\_\_\_ २) \_\_\_\_\_

२. मुलांच्या खेळण्यातील बदलांची कवीने घेतलेली नोंद व्यक्त करणारी काव्यपंक्ती लिहा.

(१)

आता फारशी जत्रा भरत नाही, भरलीच तरी

मुले पुनः वीकत घेत नाहीत, घेतात प्रकाशमान होताना धडाडणारी बंदूक

मुले कुठे खेळतात खेळपाणी खेळतात 'युद्ध युद्ध'

बैठकीतल्या उश्यांचा बांध रचून, पोरांनी एकदा

माझ्यावरच रोखली स्टेनगन,

गोळीला घाबरलो नाही, पण चिमुकल्या डोक्यांत

हिंस्त्रतेचा आविर्भाव पाहून, हातातली खोटी बंदूक

कधीही खरी होण्याची भीती, मेंदूत आरपार घुसत गेली.

भीती मेंदूत आरपार - दासू वैद्य (तूर्तास)

३. लहान मुलांच्या वृत्तीतील निरागसपणा लोप चालल्याची कवीने व्यक्त केलेली तुमच्या शब्दांत लिहा.

(२)

४. 'पण चिमुकल्या डोक्यांत .... खरी होण्याची भीती' या पंक्तीतील काव्य सौंदर्य लिहा.

(२)

विभाग ३ : व्याकरण

कृती ३ (अ) समानार्थी शब्दांचा योग्य पर्याय निवड :

(२)

१) शरीर - (अ) छाया (ब) माया (क) काया (ड) वाया

२) अंधार - (अ) सम (ब) तम (क) दम (ड) यम

(आ) विशेषण व प्रकार यांच्या योग्य जोड्या जुळवा .

(२)

विशेषणे :- (i) म्हातारी माणसे (ii) साठवा वर्ष (iii) तिच्या साड्या (iiii) वरचा मजला

प्रकार :- (अ) संख्याविशेषण (ब) गुणविशेषण (क) नामसाधित विशेषण (ड) सर्वनामसाधित



(६) खालील प्रत्येक शब्दगटांतून एकाच शब्दाला लागलेला उपसर्ग व प्रत्ययघटित शब्द शोध लिहा

- |                                  |                                 |     |
|----------------------------------|---------------------------------|-----|
| १. अपारंपरिक , शेतमजूर, उष्णता   | २. माणुसकी, निदर्शन, परिपूर्णता | (२) |
| ३. अन्याय , अपरिवर्तनीय , माननीय | ४. परोपकारी, अनादर, परंपरा      |     |

(६) खालीलपैकी योग्य अर्थ वाक्यचारांसमोर लिहा .

- १) टक लावून पाहणे -- (२)
- (अ) बारीक नजरेने पाहणे (ब) वरवर पाहणे (क) कसे तरी न्याहाळणे (ड) अधूनमधून पाहणे
- २) स्तिमित होणे --
- (अ) खूप भीती वाटणे (ब) आश्चर्यचकित होणे (क) जीव घाबरा होणे (ड) मन खिन्न होणे .

(३) खालील पारिभाषिक शब्दांचा पर्यायातील योग्य अर्थ लिहा .

- १) comedy : अ) शोकांतिका ब) सुखांतिका क) एकांकिका (२)
- २) coach : अ) प्रशिक्षक ब) अधीक्षक क) निरीक्षक

#### विभाग ४ व्यक्तिचित्रे

कृति . ४ खालील पठित उतान्याच्या आधारे दिलेल्या सूचनेनुसार कृती करा :

१. खालील शब्दप्रयोगातून तुम्हाला जाणवलेला भाव तुमच्या शब्दांत लिहा (२)

\* दिव्यासारखी सोबत करणारे शब्द : \_\_\_\_\_

\* पित्याच्या छात्राची सावली \_\_\_\_\_

जेव्हा जेव्हा काळाकुट्ट अंधार माझ्या आयुष्यात दाटून येतो तेव्हा तेव्हा , बाबा , तुमचे हे शब्द दिव्यासारखी सोबत करतात . अद्याप . या दिव्यात तुम्हाला होरपळताना मी पाहिलं : पण मी काही शहाणा झालो नाही. आहे त्यापेक्षा वेद व्हायचं ठरवलं . या दिव्याला आजपर्यंत घट्ट कवटाळून जगतो आहे. हा दिवा खूप खूप माझा आहे . त्याच्यापुढे माझी होरपळ लक्ष देव्याच्याही लायकीची नाही. तुम्ही गेल्याची वार्ता अर्ध्या-पाऊण तासात दूरवर पोचली . डोक्यावर पित्याच्या छात्राची सावली असते, तोवर त्यांचे मोल कळत नाही . कुठल्या मॉलमध्ये विकत पण मिळत नाही. या छात्राविना जगताना आता बाहेरच्या जगाला थेट सामोरे जावं लागणार आहे, ही जाणीव तेव्हाच्या शाळकरी पोराला, म्हणजे मला, कशी कुणास ठाऊक, पण क्षणार्धात झाली. आजूबाजूचे शेजारी, आप्त , तुमचे प्रकाशक-स्नेही तातडीने आले. त्यात कॉटनॅटल प्रकाशनचे अनंतराव कुलकर्णी आतर. त्या गृहस्थांना कं मुलांसारखे हुंदकून रडताना मी प्रथमच पाहत होतो

२. लेखकाच्या बाबांच्या निधनानंतर भेटावयास आलेल्या समाजातील चार व्यक्ती (२)

३. 'या छात्राविना जगताना आता बाहेरच्या जगाला थेट सामोरे जावं लागणार आहे,'

या विधानातील संवेदना तुमच्या शब्दात व्यक्त करा . (२)

#### विभाग - ५ उपयोजित मराठी

कृति ५ अ) दिलेल्या घटनांवर आधारित बातमी तयार करा :

(५)

१. गुणवंत विद्यार्थ्यांचा सत्कार सोहळा साजरा .

किंवा

१. जोड्या लावा :

अ

१. दर्पण

२. पी. टी. आय

३. यू.एन.आय

४. इनव्हर्टेड पिरेमिड

५. न्यूज

६. लीड/ इंट्रो

ब

उलटा त्रिकोण

बातमी

बातमीचा शिरोभाग

युनायटेड न्यूज ऑफ इंडिया

बाळशात्री जांभेकर

प्रेस ट्रस्ट ऑफ इंडिया

(३)



## Section II

Answer the following in 2 to 3 sentences each

Q.1 What do you mean by flexibility? (2)

Ans. \_\_\_\_\_  
\_\_\_\_\_

Q.2 Write Five components of HRPF? (2)

Ans. \_\_\_\_\_  
\_\_\_\_\_

Q.3 What do you mean by obesity? (2)

Ans. \_\_\_\_\_  
\_\_\_\_\_

Q.4 Give the full form of any two of the following terms. (2)

(i) B.M.I. \_\_\_\_\_

(ii) W.H.R. \_\_\_\_\_

(iii) W.H.O. \_\_\_\_\_

Q.5 Explain the effect of exercise of human body. (2)

Ans \_\_\_\_\_  
\_\_\_\_\_  
\_\_\_\_\_  
\_\_\_\_\_  
\_\_\_\_\_  
\_\_\_\_\_

\*\*\*\*\*